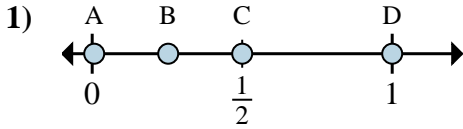


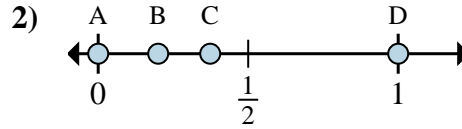


Determina quale lettera rappresenta correttamente la posizione della frazione sulla linea numerata.

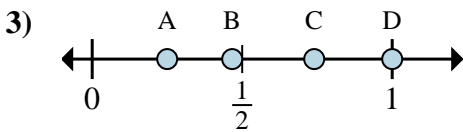
Risposte



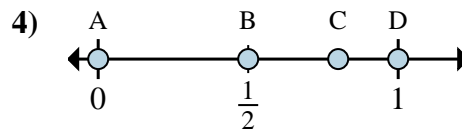
- a. Quale lettera rappresenta meglio $\frac{6}{6}$?
- b. Quale lettera rappresenta meglio $\frac{3}{6}$?



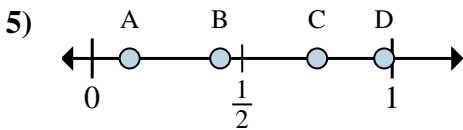
- a. Quale lettera rappresenta meglio $\frac{0}{2}$?
- b. Quale lettera rappresenta meglio $\frac{2}{2}$?



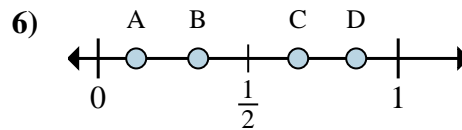
- a. Quale lettera rappresenta meglio $\frac{1}{4}$?
- b. Quale lettera rappresenta meglio $\frac{4}{4}$?



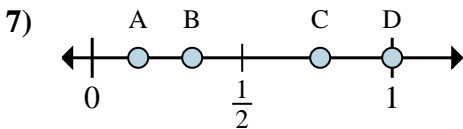
- a. Quale lettera rappresenta meglio $\frac{0}{3}$?
- b. Quale lettera rappresenta meglio $\frac{3}{3}$?



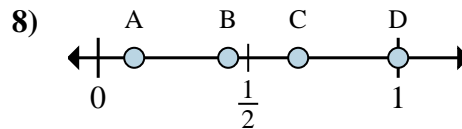
- a. Quale lettera rappresenta meglio $\frac{1}{8}$?
- b. Quale lettera rappresenta meglio $\frac{6}{8}$?



- a. Quale lettera rappresenta meglio $\frac{2}{3}$?
- b. Quale lettera rappresenta meglio $\frac{1}{3}$?



- a. Quale lettera rappresenta meglio $\frac{1}{3}$?
- b. Quale lettera rappresenta meglio $\frac{3}{3}$?



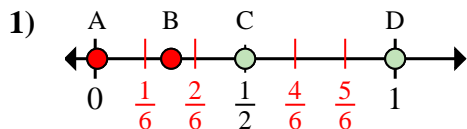
- a. Quale lettera rappresenta meglio $\frac{3}{3}$?
- b. Quale lettera rappresenta meglio $\frac{2}{3}$?

- 1. _____
- 2. _____
- 3. _____
- 4. _____
- 5. _____
- 6. _____
- 7. _____
- 8. _____

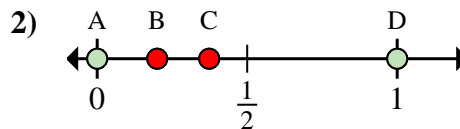


Determina quale lettera rappresenta correttamente la posizione della frazione sulla linea numerata.

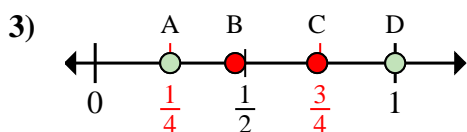
Risposte



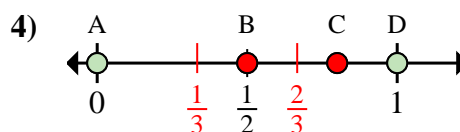
- a. Quale lettera rappresenta meglio $\frac{6}{6}$?
- b. Quale lettera rappresenta meglio $\frac{3}{6}$?



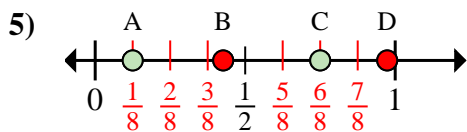
- a. Quale lettera rappresenta meglio $\frac{0}{2}$?
- b. Quale lettera rappresenta meglio $\frac{2}{2}$?



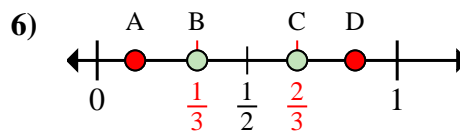
- a. Quale lettera rappresenta meglio $\frac{1}{4}$?
- b. Quale lettera rappresenta meglio $\frac{4}{4}$?



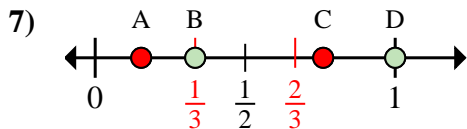
- a. Quale lettera rappresenta meglio $\frac{0}{3}$?
- b. Quale lettera rappresenta meglio $\frac{3}{3}$?



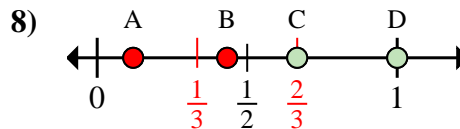
- a. Quale lettera rappresenta meglio $\frac{1}{8}$?
- b. Quale lettera rappresenta meglio $\frac{6}{8}$?



- a. Quale lettera rappresenta meglio $\frac{2}{3}$?
- b. Quale lettera rappresenta meglio $\frac{1}{3}$?



- a. Quale lettera rappresenta meglio $\frac{1}{3}$?
- b. Quale lettera rappresenta meglio $\frac{3}{3}$?



- a. Quale lettera rappresenta meglio $\frac{3}{3}$?
- b. Quale lettera rappresenta meglio $\frac{2}{3}$?

- 1. D C
- 2. A D
- 3. A D
- 4. A D
- 5. A C
- 6. C B
- 7. B D
- 8. D C