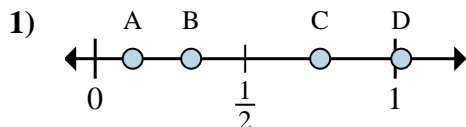


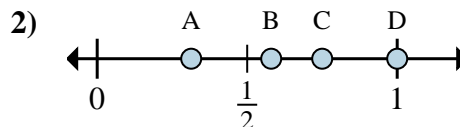


Determina quale lettera rappresenta correttamente la posizione della frazione sulla linea numerata.

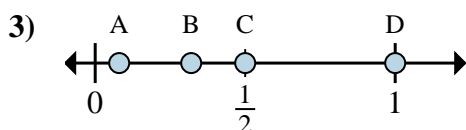
Risposte



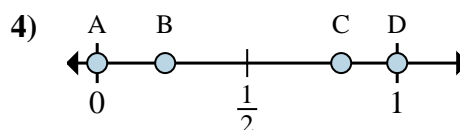
- a. Quale lettera rappresenta meglio $\frac{1}{8}$?
- b. Quale lettera rappresenta meglio $\frac{6}{8}$?



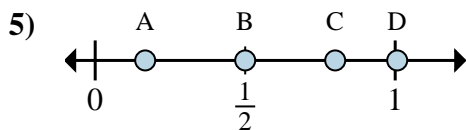
- a. Quale lettera rappresenta meglio $\frac{3}{4}$?
- b. Quale lettera rappresenta meglio $\frac{4}{4}$?



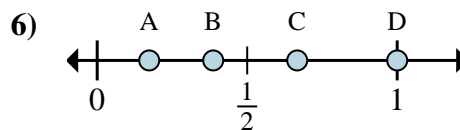
- a. Quale lettera rappresenta meglio $\frac{8}{8}$?
- b. Quale lettera rappresenta meglio $\frac{4}{8}$?



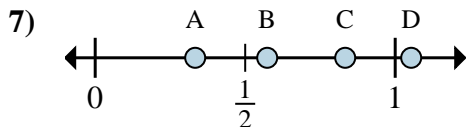
- a. Quale lettera rappresenta meglio $\frac{0}{2}$?
- b. Quale lettera rappresenta meglio $\frac{2}{2}$?



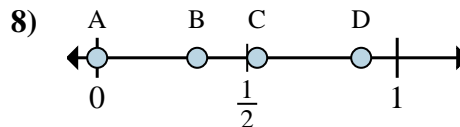
- a. Quale lettera rappresenta meglio $\frac{1}{6}$?
- b. Quale lettera rappresenta meglio $\frac{3}{6}$?



- a. Quale lettera rappresenta meglio $\frac{2}{3}$?
- b. Quale lettera rappresenta meglio $\frac{3}{3}$?



- a. Quale lettera rappresenta meglio $\frac{5}{6}$?
- b. Quale lettera rappresenta meglio $\frac{2}{6}$?



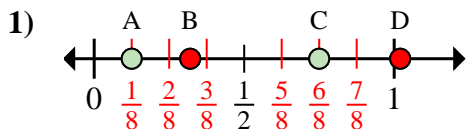
- a. Quale lettera rappresenta meglio $\frac{0}{3}$?
- b. Quale lettera rappresenta meglio $\frac{1}{3}$?

- 1. _____
- 2. _____
- 3. _____
- 4. _____
- 5. _____
- 6. _____
- 7. _____
- 8. _____

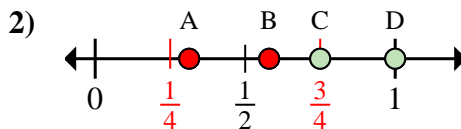


Determina quale lettera rappresenta correttamente la posizione della frazione sulla linea numerata.

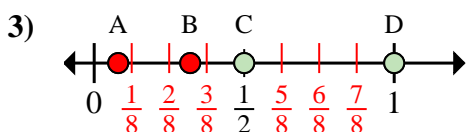
Risposte



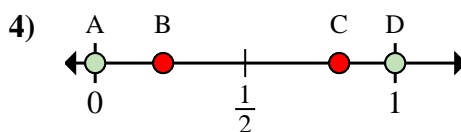
- a. Quale lettera rappresenta meglio $\frac{1}{8}$?
 b. Quale lettera rappresenta meglio $\frac{6}{8}$?



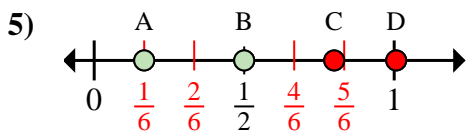
- a. Quale lettera rappresenta meglio $\frac{3}{4}$?
 b. Quale lettera rappresenta meglio $\frac{4}{4}$?



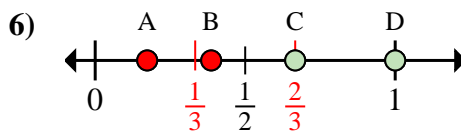
- a. Quale lettera rappresenta meglio $\frac{8}{8}$?
 b. Quale lettera rappresenta meglio $\frac{4}{8}$?



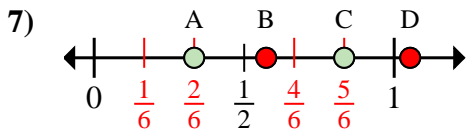
- a. Quale lettera rappresenta meglio $\frac{0}{2}$?
 b. Quale lettera rappresenta meglio $\frac{2}{2}$?



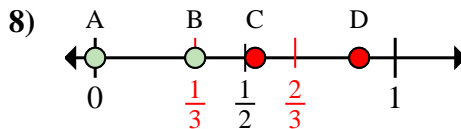
- a. Quale lettera rappresenta meglio $\frac{1}{6}$?
 b. Quale lettera rappresenta meglio $\frac{3}{6}$?



- a. Quale lettera rappresenta meglio $\frac{2}{3}$?
 b. Quale lettera rappresenta meglio $\frac{3}{3}$?



- a. Quale lettera rappresenta meglio $\frac{5}{6}$?
 b. Quale lettera rappresenta meglio $\frac{2}{6}$?



- a. Quale lettera rappresenta meglio $\frac{0}{3}$?
 b. Quale lettera rappresenta meglio $\frac{1}{3}$?

1. A C
 2. C D
 3. D C
 4. A D
 5. A B
 6. C D
 7. C A
 8. A B