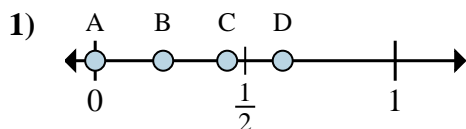


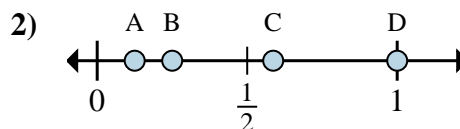


Determina quale lettera rappresenta correttamente la posizione della frazione sulla linea numerata.

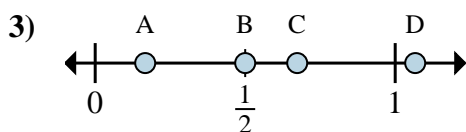
Risposte



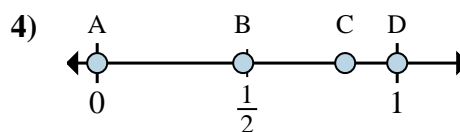
- a. Quale lettera rappresenta meglio $\frac{0}{8}$?
- b. Quale lettera rappresenta meglio $\frac{5}{8}$?



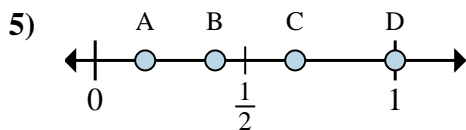
- a. Quale lettera rappresenta meglio $\frac{1}{8}$?
- b. Quale lettera rappresenta meglio $\frac{2}{8}$?



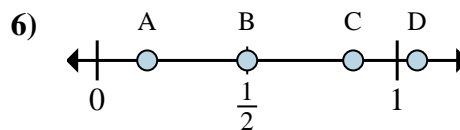
- a. Quale lettera rappresenta meglio $\frac{1}{6}$?
- b. Quale lettera rappresenta meglio $\frac{3}{6}$?



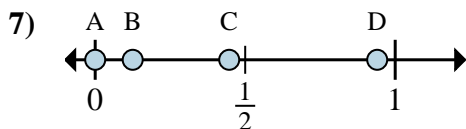
- a. Quale lettera rappresenta meglio $\frac{0}{2}$?
- b. Quale lettera rappresenta meglio $\frac{2}{2}$?



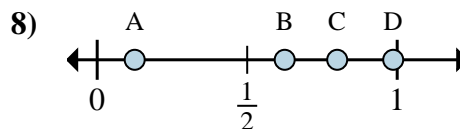
- a. Quale lettera rappresenta meglio $\frac{3}{3}$?
- b. Quale lettera rappresenta meglio $\frac{2}{3}$?



- a. Quale lettera rappresenta meglio $\frac{3}{6}$?
- b. Quale lettera rappresenta meglio $\frac{1}{6}$?



- a. Quale lettera rappresenta meglio $\frac{0}{8}$?
- b. Quale lettera rappresenta meglio $\frac{1}{8}$?



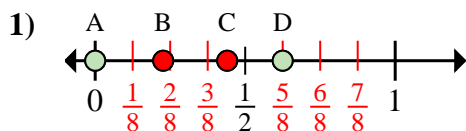
- a. Quale lettera rappresenta meglio $\frac{5}{8}$?
- b. Quale lettera rappresenta meglio $\frac{1}{8}$?

- 1. _____
- 2. _____
- 3. _____
- 4. _____
- 5. _____
- 6. _____
- 7. _____
- 8. _____

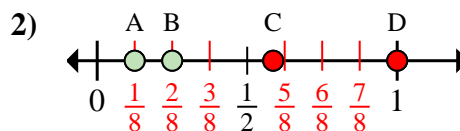


Determina quale lettera rappresenta correttamente la posizione della frazione sulla linea numerata.

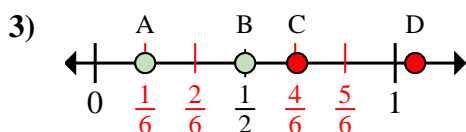
Risposte



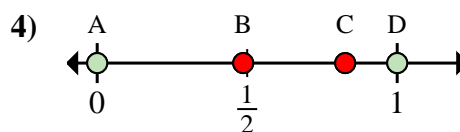
- a. Quale lettera rappresenta meglio $\frac{0}{8}$?
 b. Quale lettera rappresenta meglio $\frac{5}{8}$?



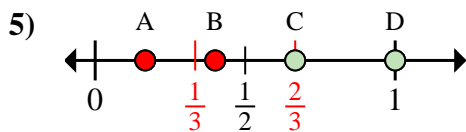
- a. Quale lettera rappresenta meglio $\frac{1}{8}$?
 b. Quale lettera rappresenta meglio $\frac{2}{8}$?



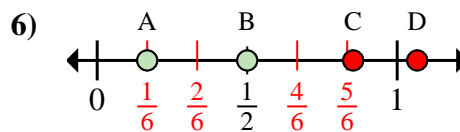
- a. Quale lettera rappresenta meglio $\frac{1}{6}$?
 b. Quale lettera rappresenta meglio $\frac{3}{6}$?



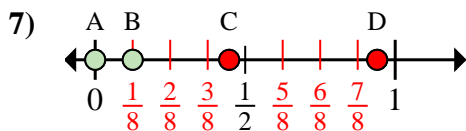
- a. Quale lettera rappresenta meglio $\frac{0}{2}$?
 b. Quale lettera rappresenta meglio $\frac{2}{2}$?



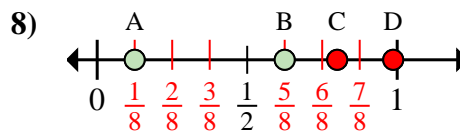
- a. Quale lettera rappresenta meglio $\frac{3}{3}$?
 b. Quale lettera rappresenta meglio $\frac{2}{3}$?



- a. Quale lettera rappresenta meglio $\frac{3}{6}$?
 b. Quale lettera rappresenta meglio $\frac{1}{6}$?



- a. Quale lettera rappresenta meglio $\frac{0}{8}$?
 b. Quale lettera rappresenta meglio $\frac{1}{8}$?



- a. Quale lettera rappresenta meglio $\frac{5}{8}$?
 b. Quale lettera rappresenta meglio $\frac{1}{8}$?

1. A D
 2. A B
 3. A B
 4. A D
 5. D C
 6. B A
 7. A B
 8. B A