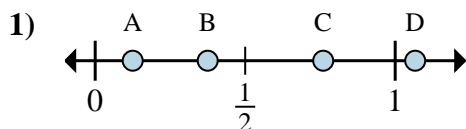


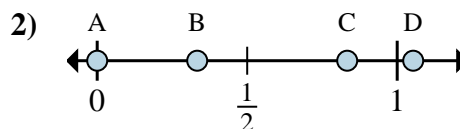


**Determina quale lettera rappresenta correttamente la posizione della frazione sulla linea numerata.**

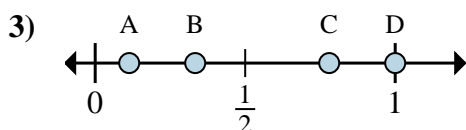
**Risposte**



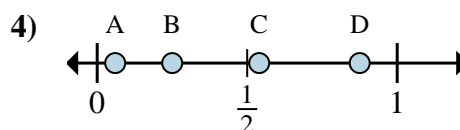
- a. Quale lettera rappresenta meglio  $\frac{1}{8}$ ?
- b. Quale lettera rappresenta meglio  $\frac{3}{8}$ ?



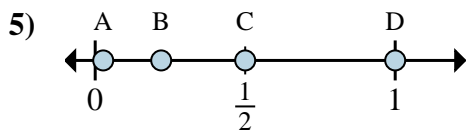
- a. Quale lettera rappresenta meglio  $\frac{5}{6}$ ?
- b. Quale lettera rappresenta meglio  $\frac{2}{6}$ ?



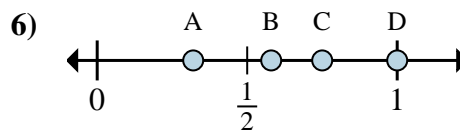
- a. Quale lettera rappresenta meglio  $\frac{1}{3}$ ?
- b. Quale lettera rappresenta meglio  $\frac{3}{3}$ ?



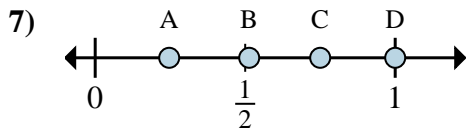
- a. Quale lettera rappresenta meglio  $\frac{7}{8}$ ?
- b. Quale lettera rappresenta meglio  $\frac{2}{8}$ ?



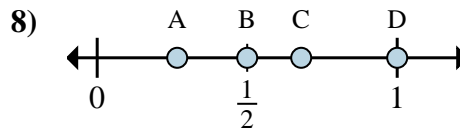
- a. Quale lettera rappresenta meglio  $\frac{1}{2}$ ?
- b. Quale lettera rappresenta meglio  $\frac{2}{2}$ ?



- a. Quale lettera rappresenta meglio  $\frac{3}{4}$ ?
- b. Quale lettera rappresenta meglio  $\frac{4}{4}$ ?



- a. Quale lettera rappresenta meglio  $\frac{3}{4}$ ?
- b. Quale lettera rappresenta meglio  $\frac{4}{4}$ ?

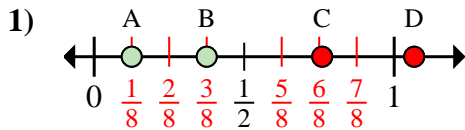


- a. Quale lettera rappresenta meglio  $\frac{8}{8}$ ?
- b. Quale lettera rappresenta meglio  $\frac{4}{8}$ ?

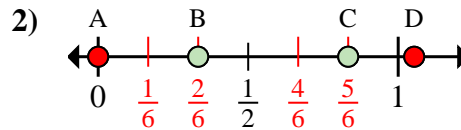
- 1. \_\_\_\_\_
- 2. \_\_\_\_\_
- 3. \_\_\_\_\_
- 4. \_\_\_\_\_
- 5. \_\_\_\_\_
- 6. \_\_\_\_\_
- 7. \_\_\_\_\_
- 8. \_\_\_\_\_



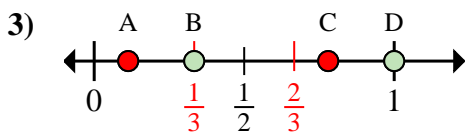
Determina quale lettera rappresenta correttamente la posizione della frazione sulla linea numerata.



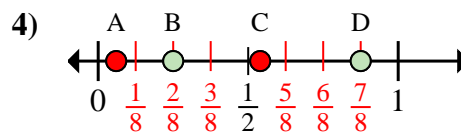
- Quale lettera rappresenta meglio  $\frac{1}{8}$ ?
- Quale lettera rappresenta meglio  $\frac{3}{8}$ ?



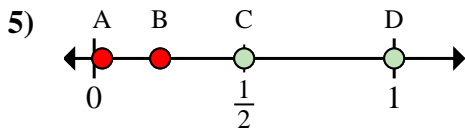
- Quale lettera rappresenta meglio  $\frac{5}{6}$ ?
- Quale lettera rappresenta meglio  $\frac{2}{6}$ ?



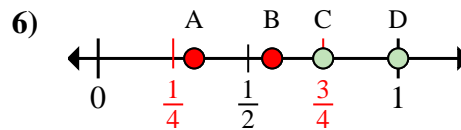
- Quale lettera rappresenta meglio  $\frac{1}{3}$ ?
- Quale lettera rappresenta meglio  $\frac{3}{3}$ ?



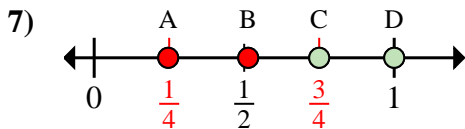
- Quale lettera rappresenta meglio  $\frac{7}{8}$ ?
- Quale lettera rappresenta meglio  $\frac{2}{8}$ ?



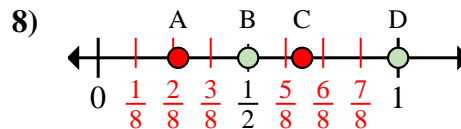
- Quale lettera rappresenta meglio  $\frac{1}{2}$ ?
- Quale lettera rappresenta meglio  $\frac{2}{2}$ ?



- Quale lettera rappresenta meglio  $\frac{3}{4}$ ?
- Quale lettera rappresenta meglio  $\frac{4}{4}$ ?



- Quale lettera rappresenta meglio  $\frac{3}{4}$ ?
- Quale lettera rappresenta meglio  $\frac{4}{4}$ ?



- Quale lettera rappresenta meglio  $\frac{8}{8}$ ?
- Quale lettera rappresenta meglio  $\frac{4}{8}$ ?

**Risposte**

- A B
- C B
- B D
- D B
- C D
- C D
- C D
- D B