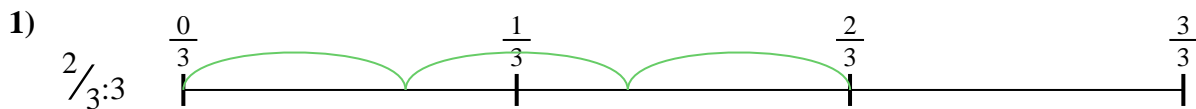




Usa la linea numerata per risolvere ogni problema. Il primo è un esempio.

Risposte

1. _____

2. _____



3. _____

4. _____



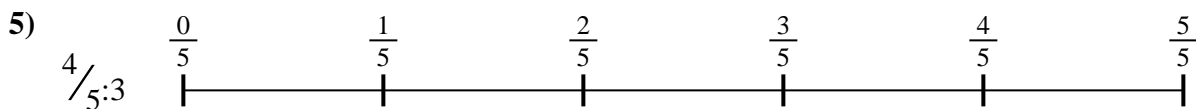
5. _____

6. _____

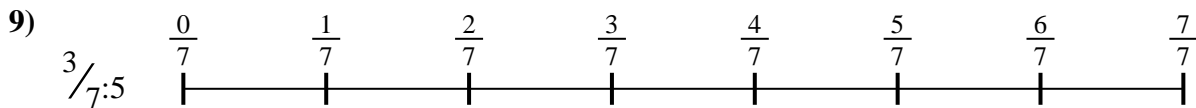
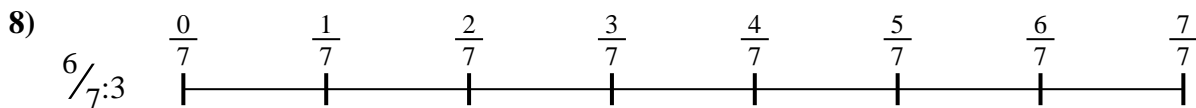
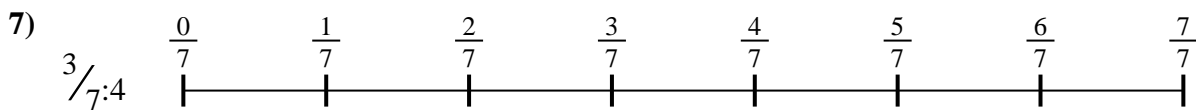


7. _____

8. _____

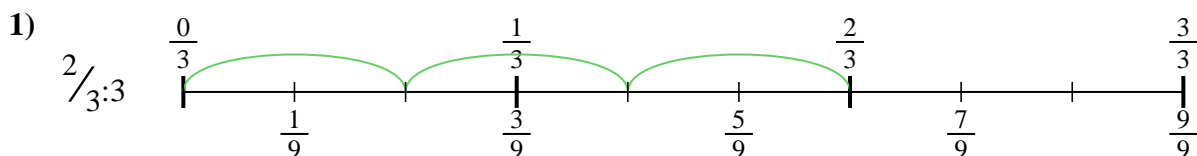


9. _____

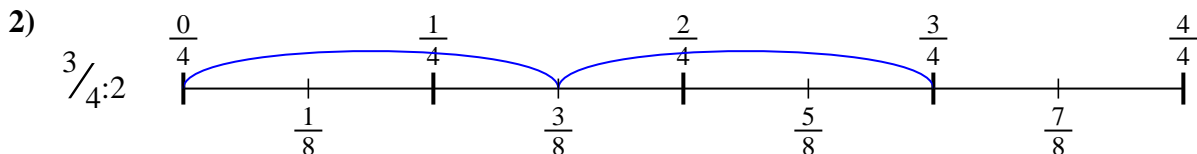




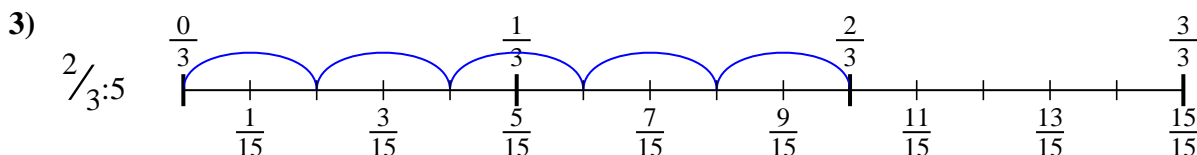
Usa la linea numerata per risolvere ogni problema. Il primo è un esempio.

Risposte

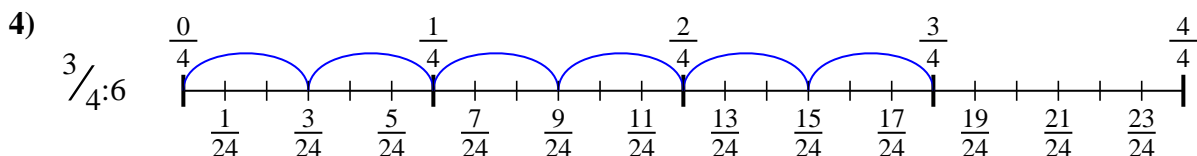
1. $\frac{2}{9}$



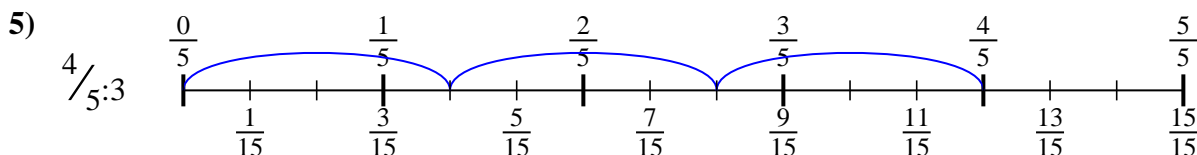
2. $\frac{3}{8}$



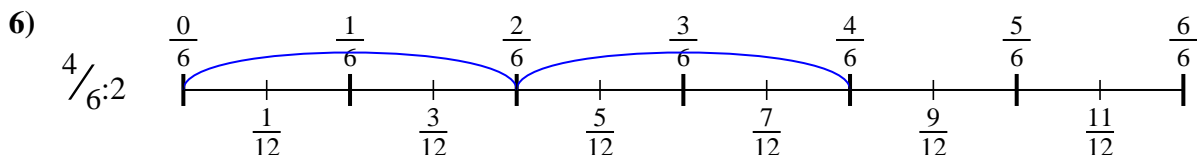
3. $\frac{2}{15}$



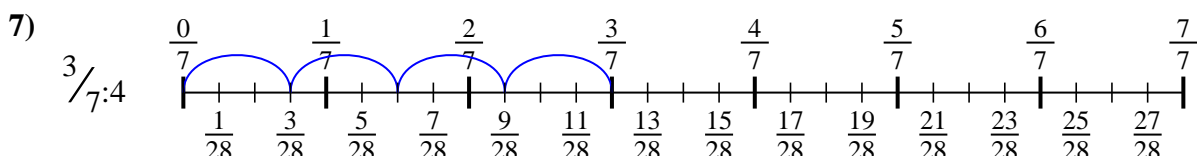
4. $\frac{3}{24}$



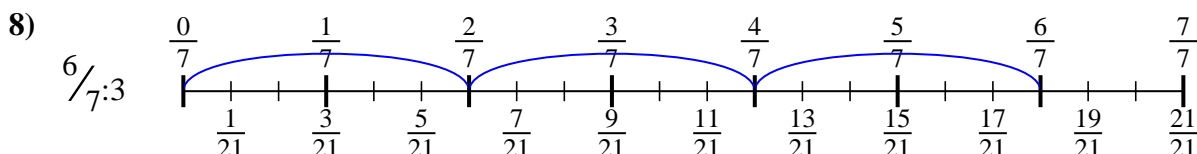
5. $\frac{4}{15}$



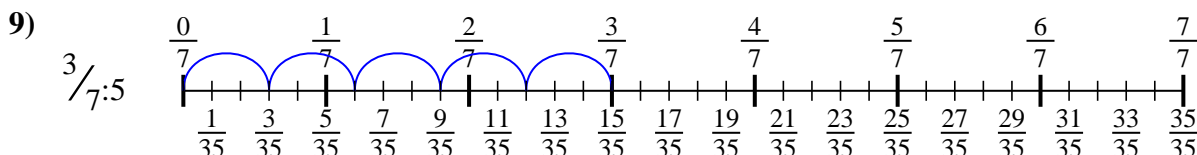
6. $\frac{4}{12}$



7. $\frac{3}{28}$



8. $\frac{6}{21}$



9. $\frac{3}{35}$



Usa la linea numerata per risolvere ogni problema. Il primo è un esempio.

Risposte

$\frac{3}{24}$

$\frac{2}{15}$

$\frac{3}{28}$

$\frac{2}{9}$

$\frac{6}{21}$

$\frac{4}{12}$

$\frac{3}{8}$

$\frac{3}{35}$

$\frac{4}{15}$

1. _____

2. _____

3. _____

4. _____

5. _____

6. _____

7. _____

8. _____

9. _____

