





Usa la linea numerata per risolvere ogni problema. Il primo è un esempio.

**Risposte**

1. \_\_\_\_\_

2. \_\_\_\_\_



3. \_\_\_\_\_

4. \_\_\_\_\_




5. \_\_\_\_\_

6. \_\_\_\_\_


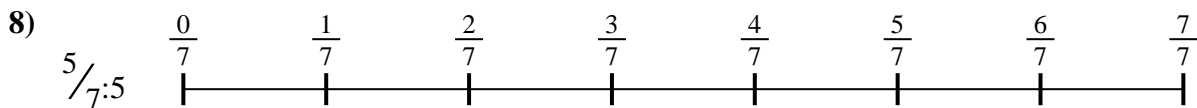
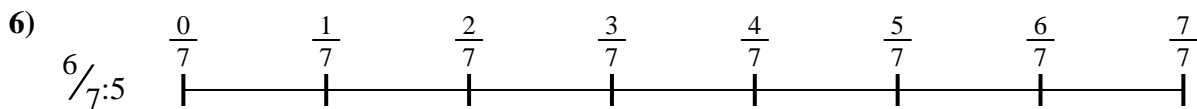


7. \_\_\_\_\_

8. \_\_\_\_\_

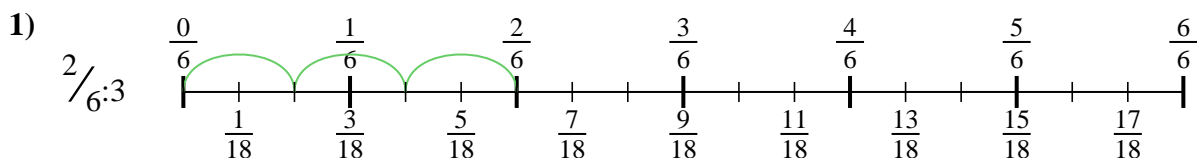


9. \_\_\_\_\_

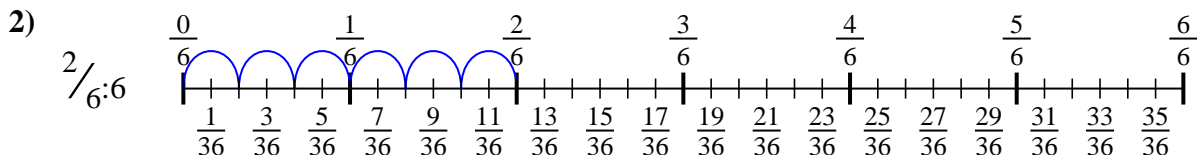




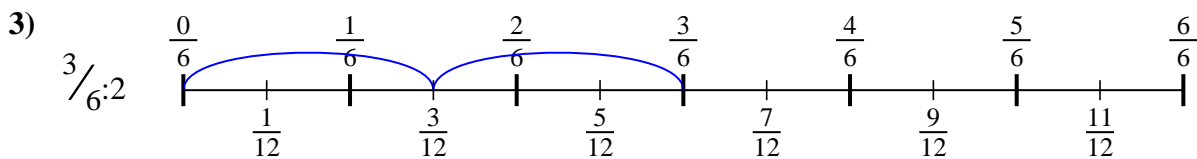
Usa la linea numerata per risolvere ogni problema. Il primo è un esempio.

**Risposte**

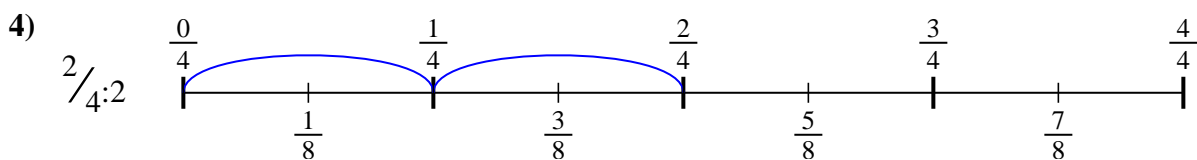
1.  $\frac{2}{18}$



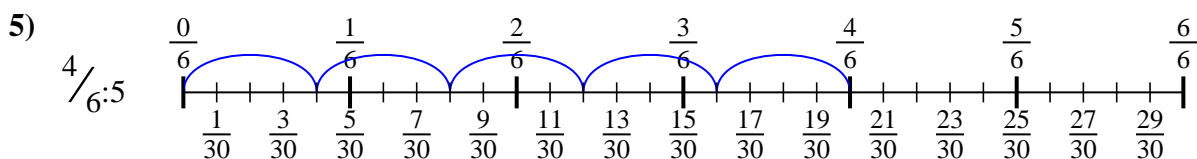
2.  $\frac{2}{36}$



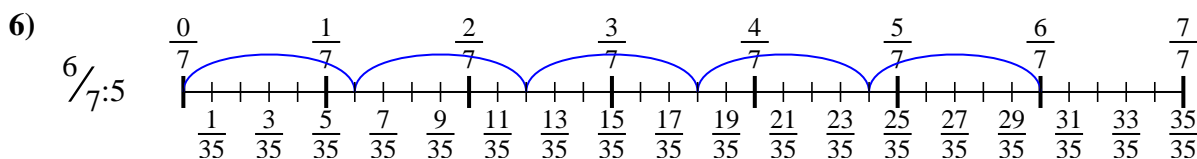
3.  $\frac{3}{12}$



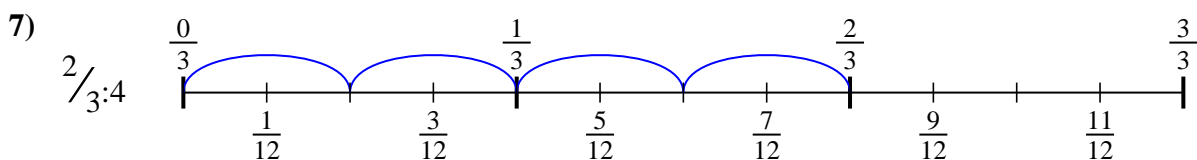
4.  $\frac{2}{8}$



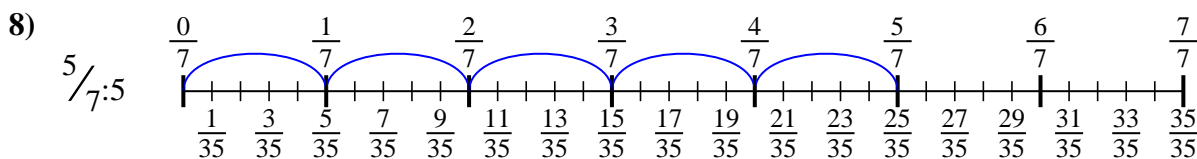
5.  $\frac{4}{30}$



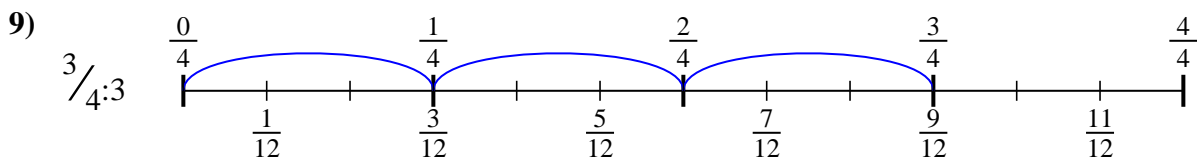
6.  $\frac{6}{35}$



7.  $\frac{2}{12}$



8.  $\frac{5}{35}$



9.  $\frac{3}{12}$



Usa la linea numerata per risolvere ogni problema. Il primo è un esempio.

**Risposte**

$\frac{2}{18}$

$\frac{2}{8}$

$\frac{2}{36}$

$\frac{3}{12}$

$\frac{6}{35}$

$\frac{5}{35}$

$\frac{4}{30}$

$\frac{2}{12}$

$\frac{3}{12}$

1. \_\_\_\_\_

2. \_\_\_\_\_

3. \_\_\_\_\_

4. \_\_\_\_\_

5. \_\_\_\_\_

6. \_\_\_\_\_

7. \_\_\_\_\_

8. \_\_\_\_\_

9. \_\_\_\_\_

