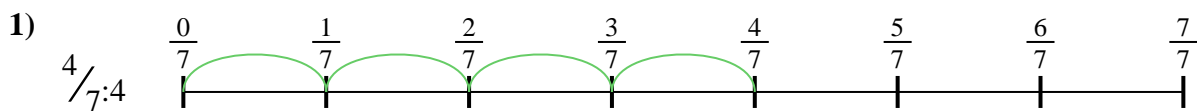




Usa la linea numerata per risolvere ogni problema. Il primo è un esempio.

Risposte

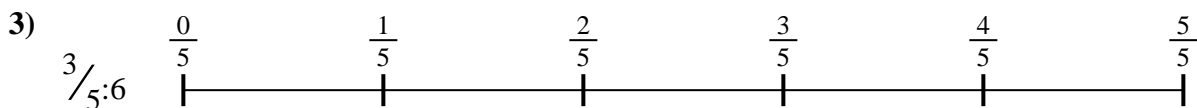
1. _____

2. _____



3. _____

4. _____



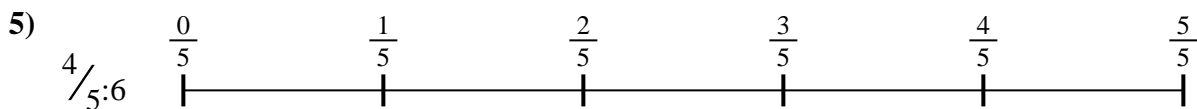
5. _____

6. _____

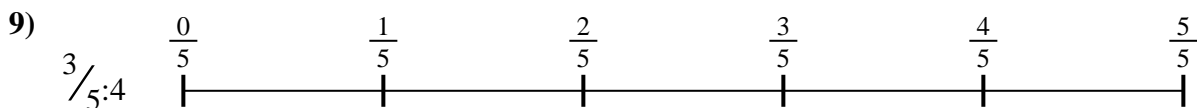
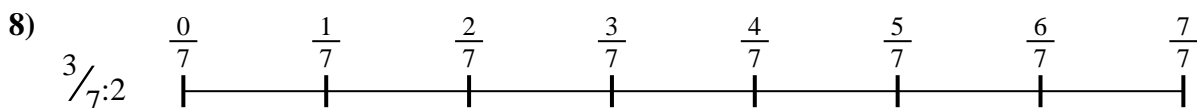
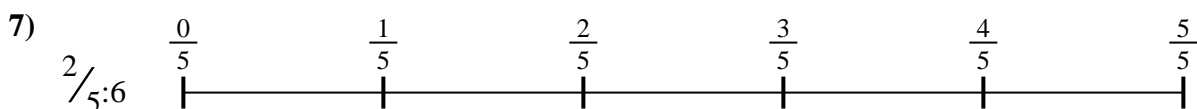


7. _____

8. _____

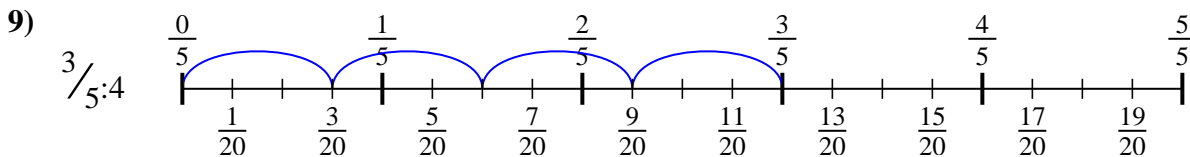
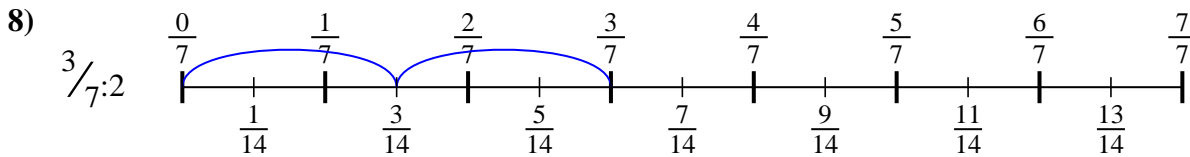
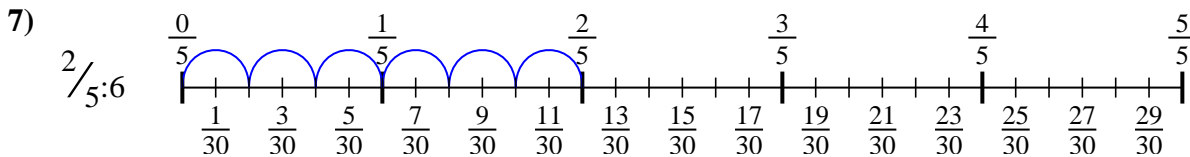
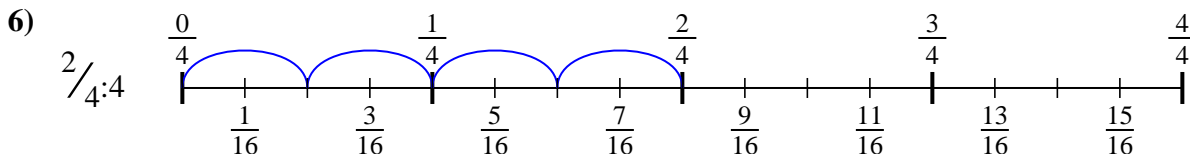
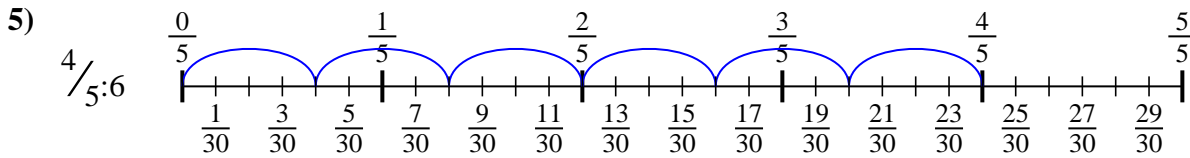
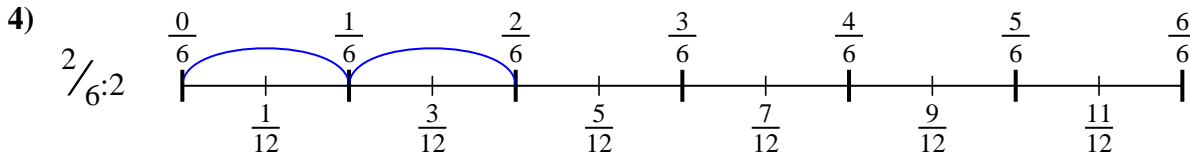
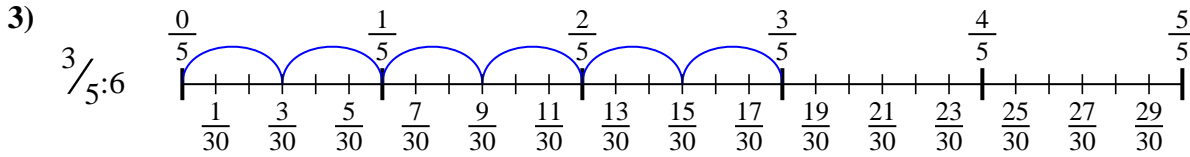
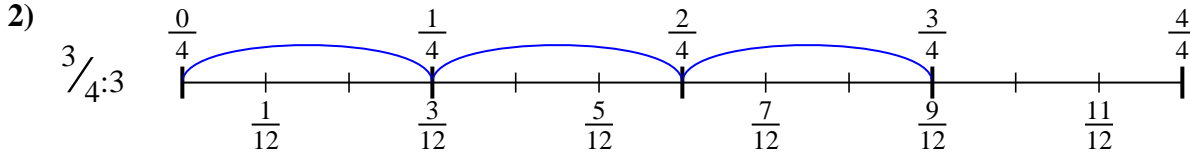
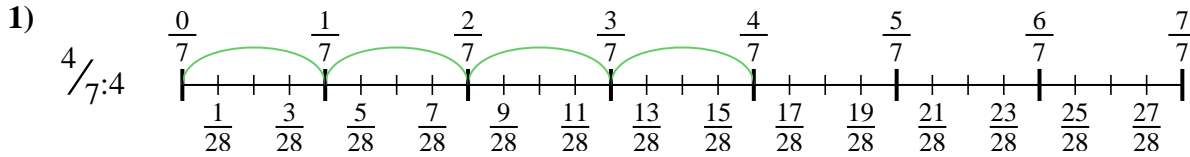


9. _____





Usa la linea numerata per risolvere ogni problema. Il primo è un esempio.

Risposte

1. $\frac{4}{28}$

2. $\frac{3}{12}$

3. $\frac{3}{30}$

4. $\frac{2}{12}$

5. $\frac{4}{30}$

6. $\frac{2}{16}$

7. $\frac{2}{30}$

8. $\frac{3}{14}$

9. $\frac{3}{20}$



Usa la linea numerata per risolvere ogni problema. Il primo è un esempio.

Risposte

$\frac{3}{14}$

$\frac{2}{12}$

$\frac{3}{12}$

$\frac{2}{16}$

$\frac{2}{30}$

$\frac{4}{30}$

$\frac{3}{20}$

$\frac{4}{28}$

$\frac{3}{30}$

1. _____

2. _____

3. _____

4. _____

5. _____

6. _____

7. _____

8. _____

9. _____

