



Usa la linea numerata per risolvere ogni problema. Il primo è un esempio.

Risposte

1. _____

2. _____



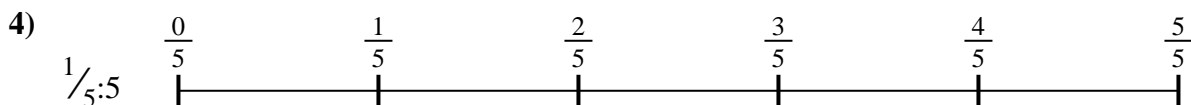
3. _____

4. _____



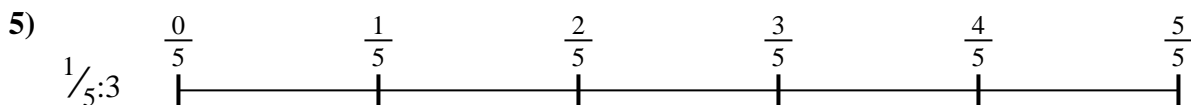
5. _____

6. _____

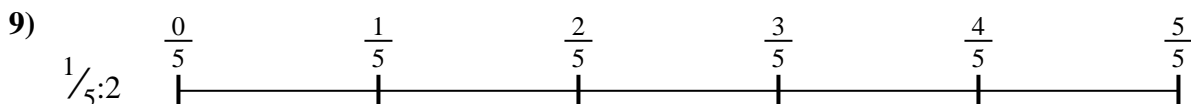
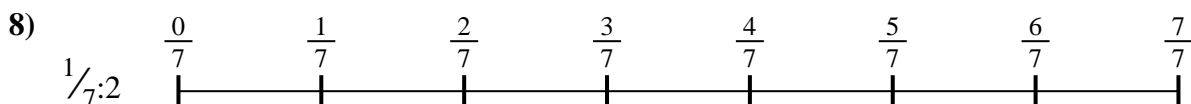



7. _____

8. _____

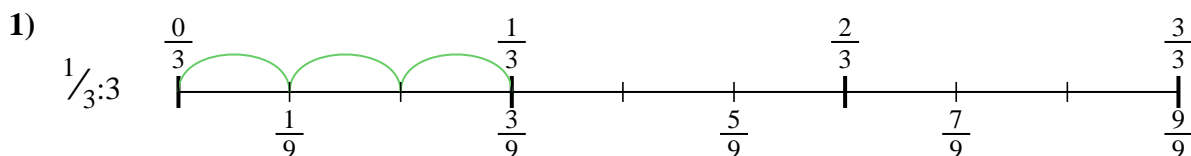


9. _____

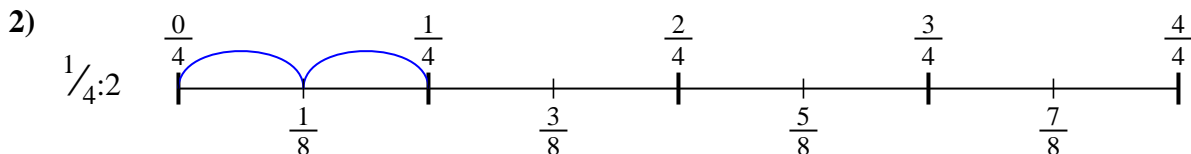




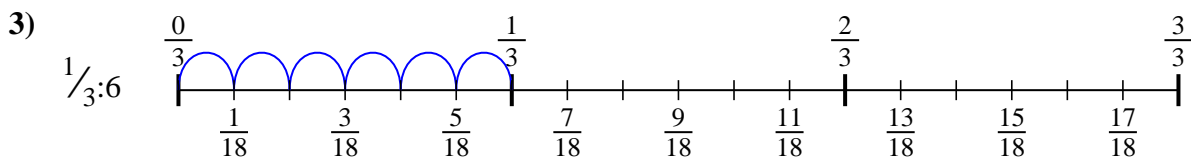
Usa la linea numerata per risolvere ogni problema. Il primo è un esempio.

Risposte

1. $\frac{1}{9}$



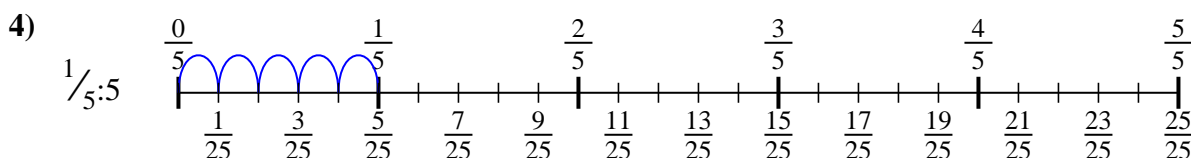
2. $\frac{1}{8}$



3. $\frac{1}{18}$

4. $\frac{1}{25}$

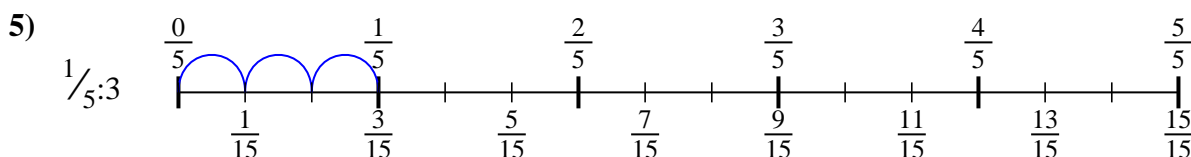
5. $\frac{1}{15}$



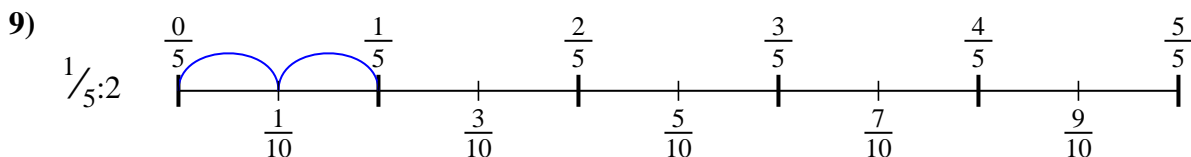
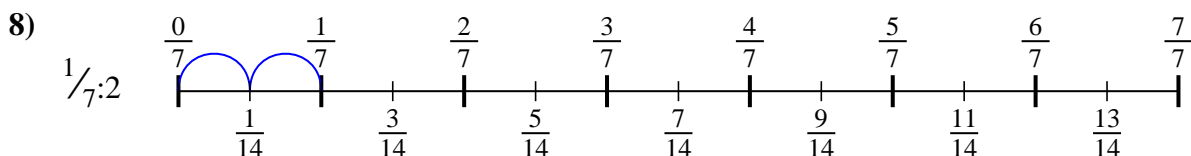
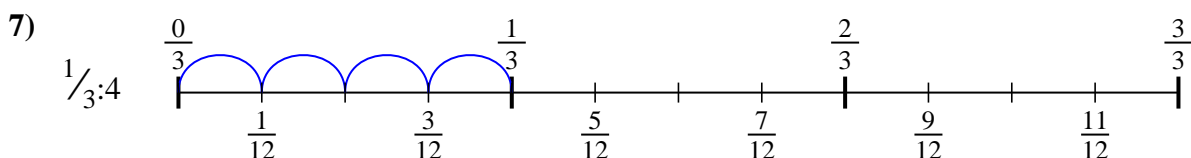
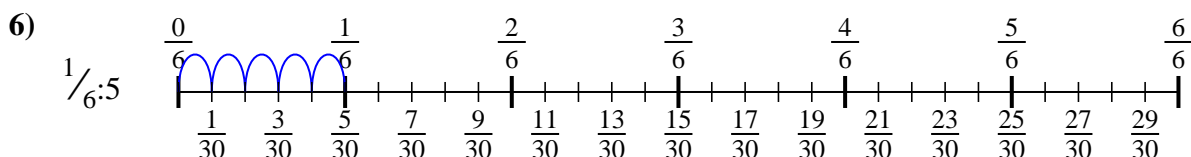
6. $\frac{1}{30}$

7. $\frac{1}{12}$

8. $\frac{1}{14}$



9. $\frac{1}{10}$





Usa la linea numerata per risolvere ogni problema. Il primo è un esempio.

Risposte

$\frac{1}{14}$

$\frac{1}{9}$

$\frac{1}{30}$

$\frac{1}{10}$

$\frac{1}{18}$

$\frac{1}{8}$

$\frac{1}{25}$

$\frac{1}{15}$

$\frac{1}{12}$

1. _____

2. _____

3. _____

4. _____

5. _____

6. _____

7. _____

8. _____

9. _____

