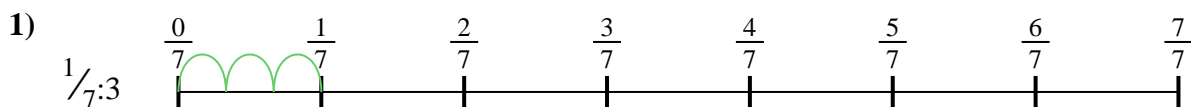




Usa la linea numerata per risolvere ogni problema. Il primo è un esempio.

Risposte

1. _____

2. _____



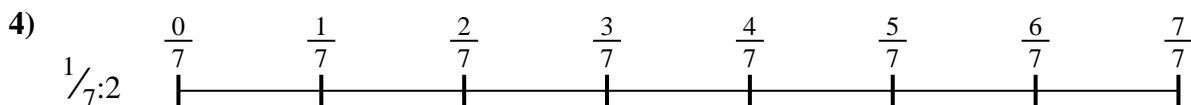
3. _____

4. _____



5. _____

6. _____





7. _____

8. _____

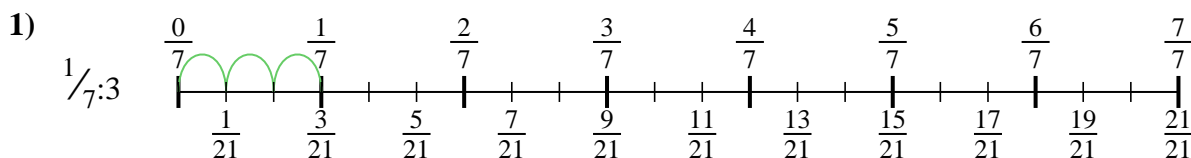


9. _____

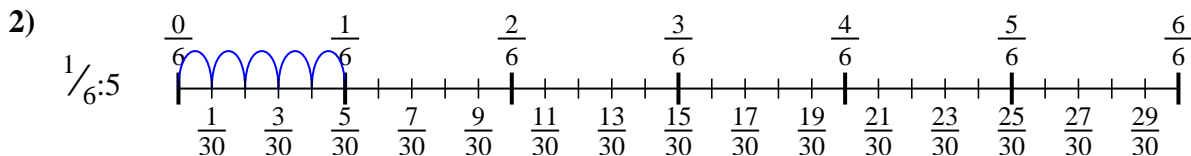




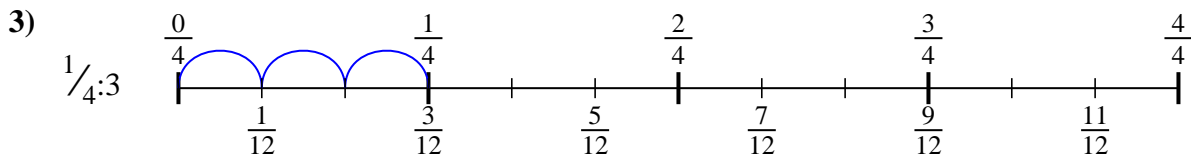
Usa la linea numerata per risolvere ogni problema. Il primo è un esempio.

Risposte

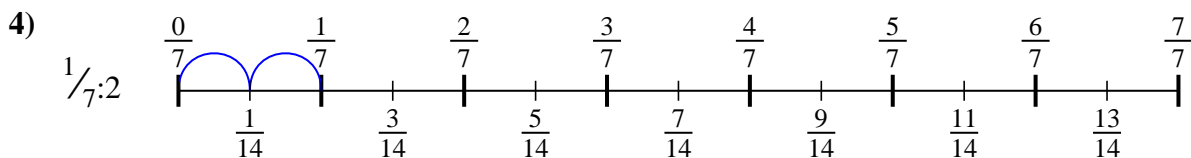
1. $\frac{1}{21}$



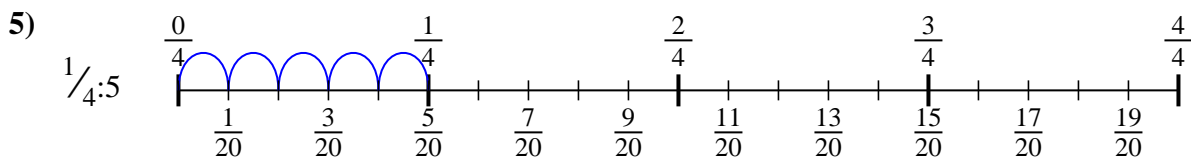
2. $\frac{1}{30}$



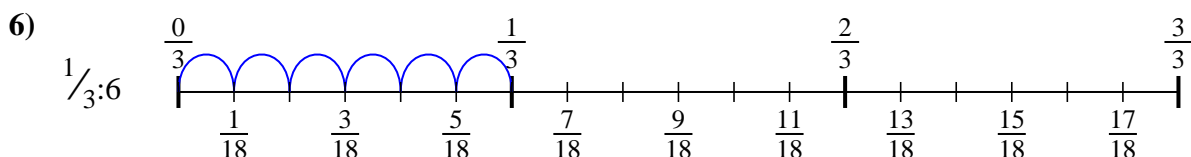
3. $\frac{1}{12}$



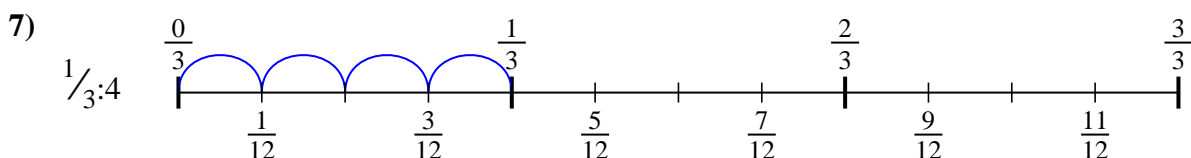
4. $\frac{1}{14}$



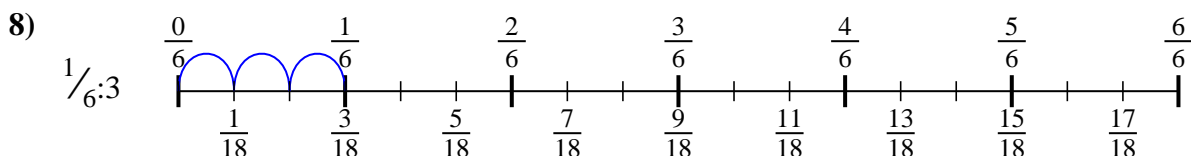
5. $\frac{1}{20}$



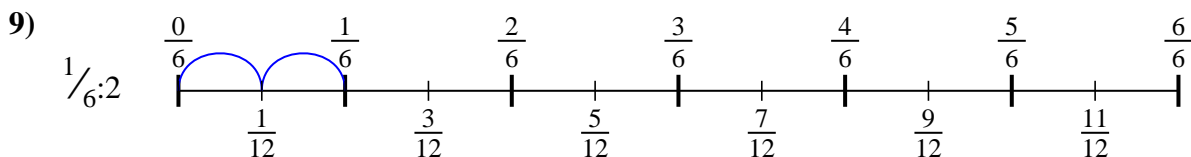
6. $\frac{1}{18}$



7. $\frac{1}{12}$



8. $\frac{1}{18}$



9. $\frac{1}{12}$



Usa la linea numerata per risolvere ogni problema. Il primo è un esempio.

Risposte

$\frac{1}{30}$

$\frac{1}{12}$

$\frac{1}{12}$

$\frac{1}{20}$

$\frac{1}{21}$

$\frac{1}{18}$

$\frac{1}{18}$

$\frac{1}{12}$

$\frac{1}{14}$

1. _____

2. _____

3. _____

4. _____

5. _____

6. _____

7. _____

8. _____

9. _____

