


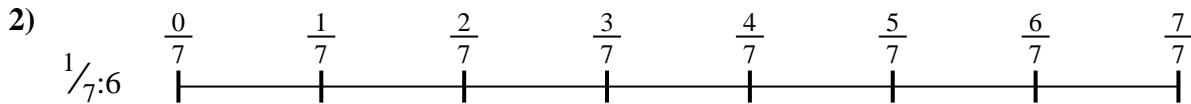


Usa la linea numerata per risolvere ogni problema. Il primo è un esempio.

Risposte

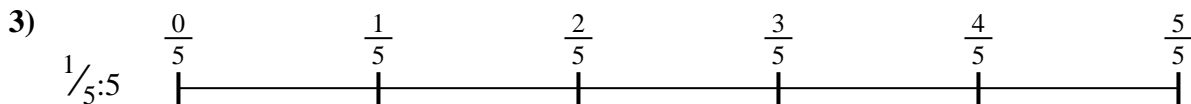
1. _____

2. _____



3. _____

4. _____



5. _____

6. _____

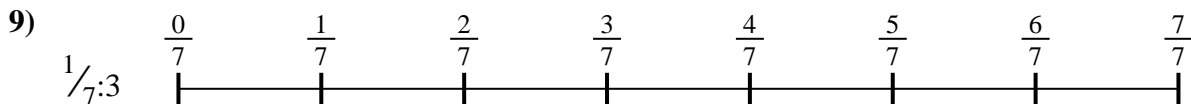
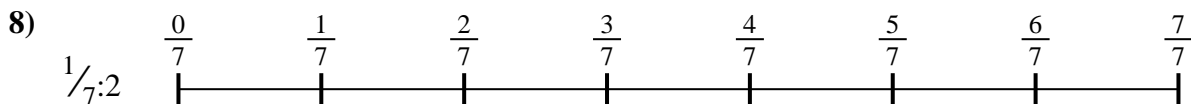



7. _____

8. _____

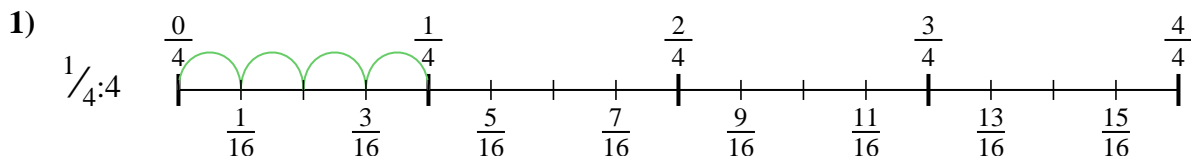


9. _____

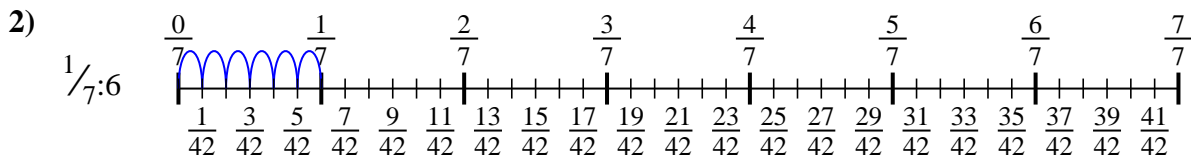




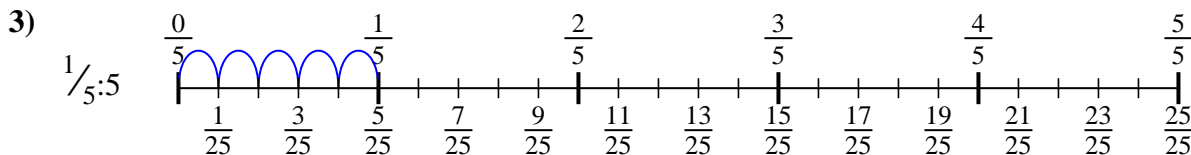
Usa la linea numerata per risolvere ogni problema. Il primo è un esempio.

Risposte

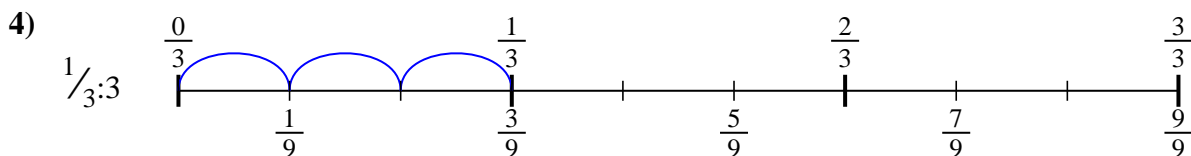
1. $\frac{1}{16}$



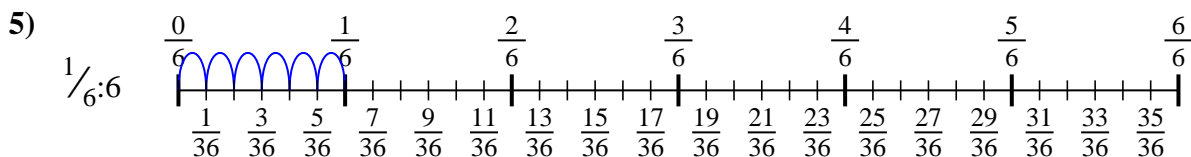
2. $\frac{1}{42}$



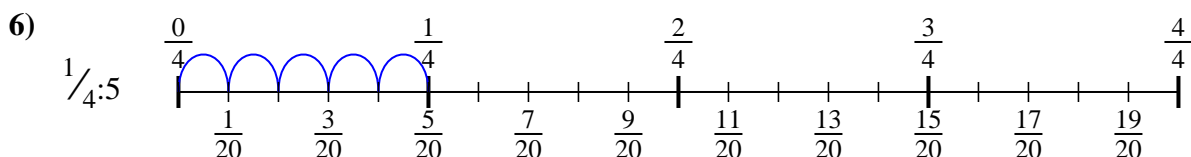
3. $\frac{1}{25}$



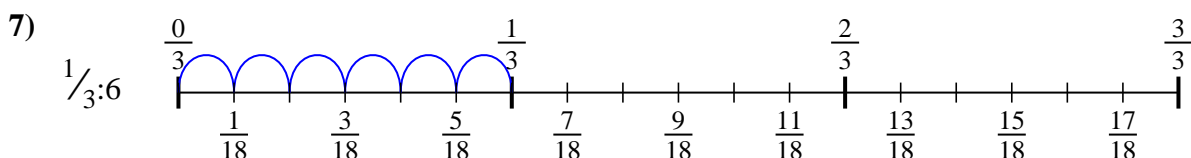
4. $\frac{1}{9}$



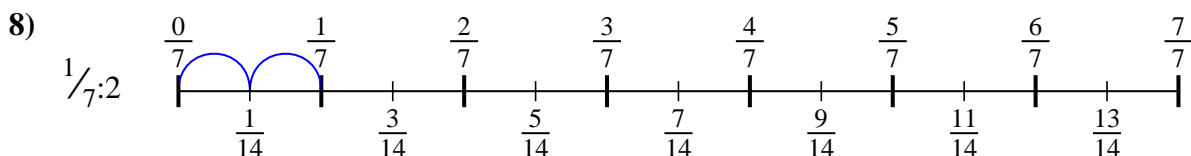
5. $\frac{1}{36}$



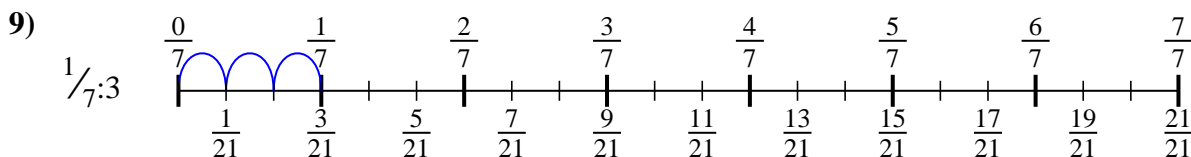
6. $\frac{1}{20}$



7. $\frac{1}{18}$



8. $\frac{1}{14}$



9. $\frac{1}{21}$



Usa la linea numerata per risolvere ogni problema. Il primo è un esempio.

Risposte

$\frac{1}{42}$

$\frac{1}{20}$

$\frac{1}{14}$

$\frac{1}{21}$

$\frac{1}{36}$

$\frac{1}{25}$

$\frac{1}{16}$

$\frac{1}{9}$

$\frac{1}{18}$

1. _____

2. _____

3. _____

4. _____

5. _____

6. _____

7. _____

8. _____

9. _____

