




Usa la linea numerata per risolvere ogni problema. Il primo è un esempio.

Risposte

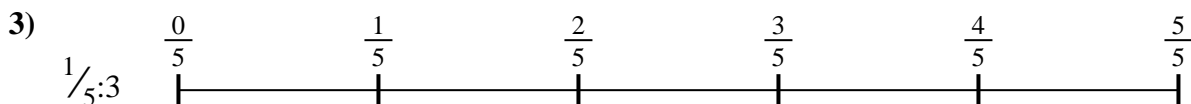
1. _____

2. _____



3. _____

4. _____



5. _____

6. _____


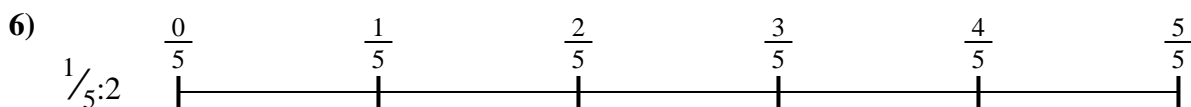


7. _____

8. _____

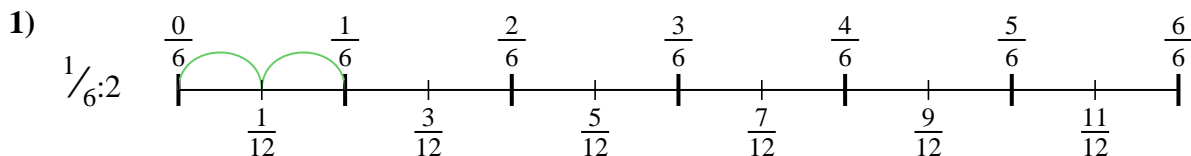


9. _____

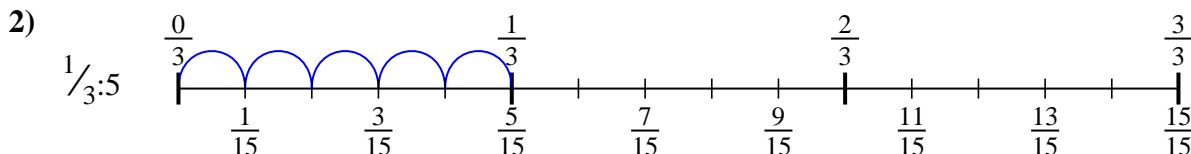




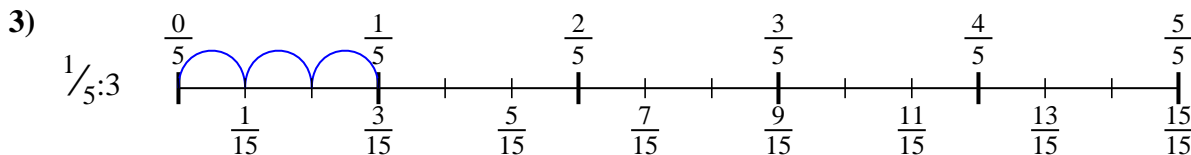
Usa la linea numerata per risolvere ogni problema. Il primo è un esempio.

Risposte

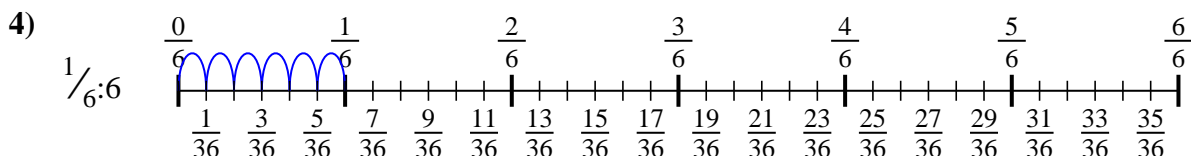
1. $\frac{1}{12}$



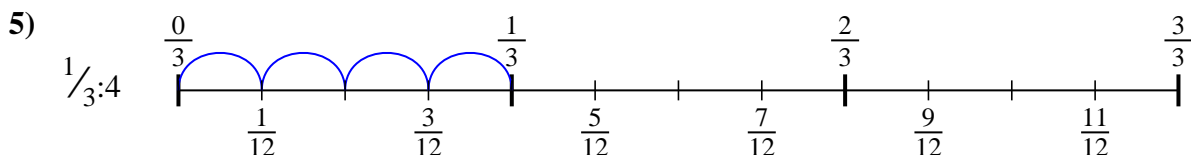
2. $\frac{1}{15}$



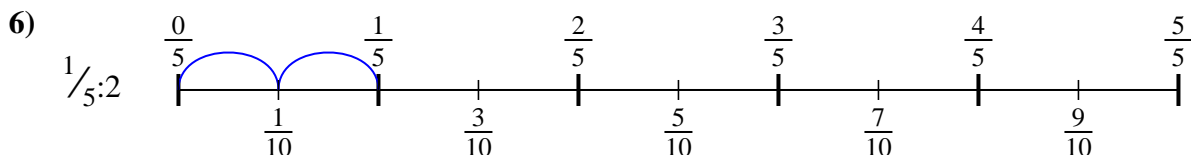
3. $\frac{1}{15}$



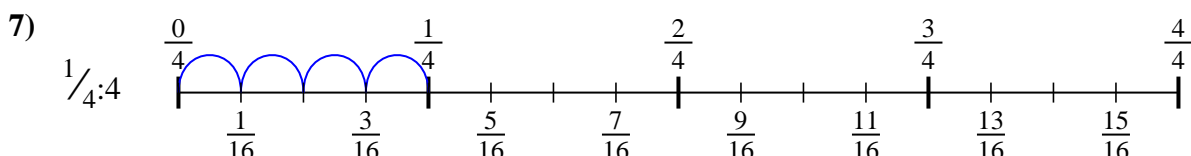
4. $\frac{1}{36}$



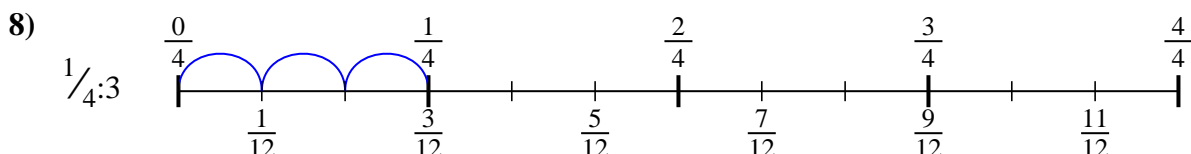
5. $\frac{1}{12}$



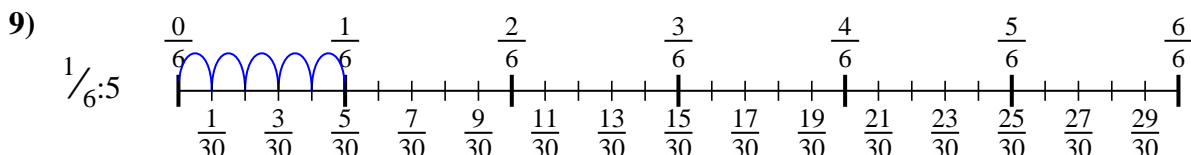
6. $\frac{1}{10}$



7. $\frac{1}{16}$



8. $\frac{1}{12}$



9. $\frac{1}{30}$



Usa la linea numerata per risolvere ogni problema. Il primo è un esempio.

Risposte

$\frac{1}{36}$

$\frac{1}{12}$

$\frac{1}{30}$

$\frac{1}{12}$

$\frac{1}{15}$

$\frac{1}{10}$

$\frac{1}{12}$

$\frac{1}{16}$

$\frac{1}{15}$

1. _____

2. _____

3. _____

4. _____

5. _____

6. _____

7. _____

8. _____

9. _____

