



Determina quale frazione va inserita nel mezzo in modo da rendere vero il confronto.

Risposte

1) $\frac{1}{3}$ $<$ $(?)$ $<$ $\frac{4}{8}$

$\frac{5}{8}$ $\frac{2}{3}$

$\frac{5}{6}$ $\frac{3}{8}$

2) $\frac{4}{8}$ $<$ $(?)$ $<$ $\frac{4}{6}$

$\frac{5}{6}$ $\frac{3}{4}$

$\frac{5}{8}$ $\frac{2}{8}$

3) $\frac{1}{8}$ $<$ $(?)$ $<$ $\frac{3}{8}$

$\frac{7}{8}$ $\frac{1}{4}$

$\frac{2}{4}$ $\frac{5}{6}$

4) $\frac{2}{6}$ $<$ $(?)$ $<$ $\frac{1}{2}$

$\frac{7}{8}$ $\frac{3}{8}$

$\frac{6}{8}$ $\frac{2}{3}$

5) $\frac{3}{8}$ $<$ $(?)$ $<$ $\frac{4}{6}$

$\frac{2}{6}$ $\frac{1}{4}$ $\frac{5}{8}$ $\frac{6}{8}$

6) $\frac{3}{6}$ $<$ $(?)$ $<$ $\frac{5}{6}$

$\frac{3}{4}$ $\frac{7}{8}$ $\frac{1}{6}$ $\frac{1}{8}$

7) $\frac{1}{6}$ $<$ $(?)$ $<$ $\frac{5}{8}$

$\frac{3}{8}$ $\frac{5}{6}$

$\frac{6}{8}$ $\frac{1}{8}$

8) $\frac{2}{8}$ $<$ $(?)$ $<$ $\frac{4}{6}$

$\frac{2}{6}$ $\frac{6}{8}$

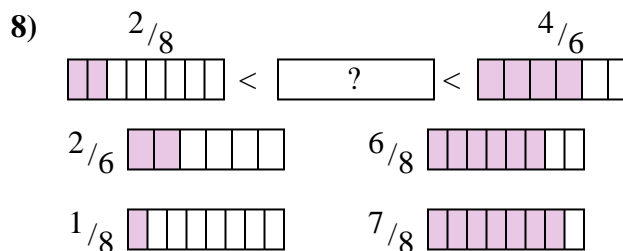
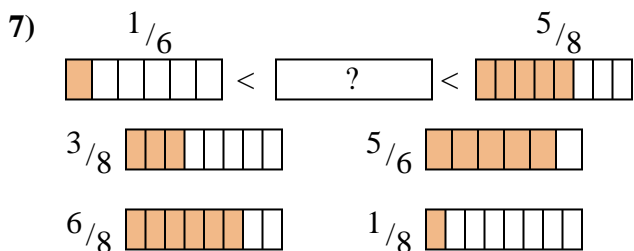
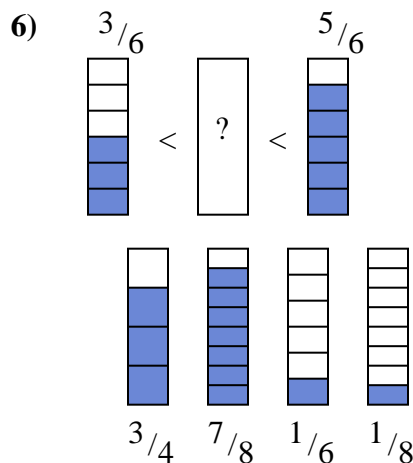
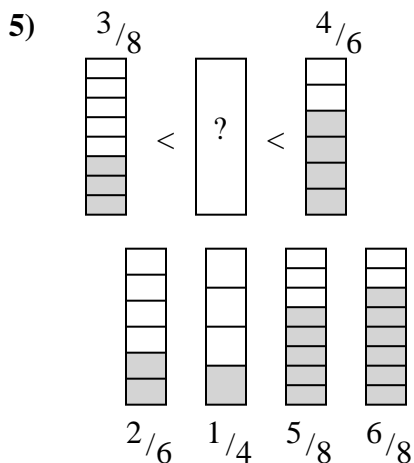
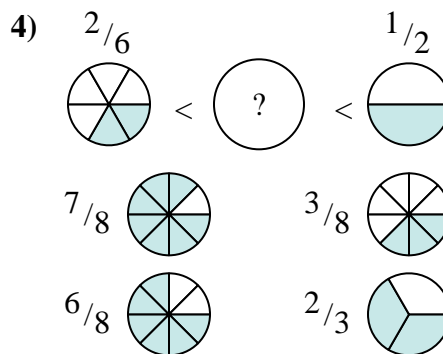
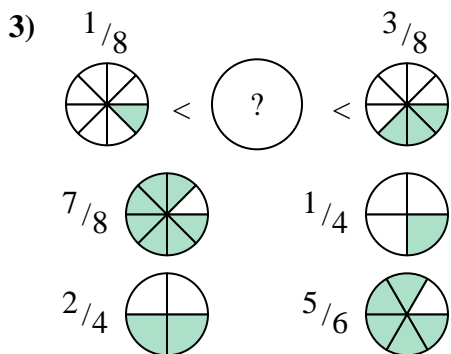
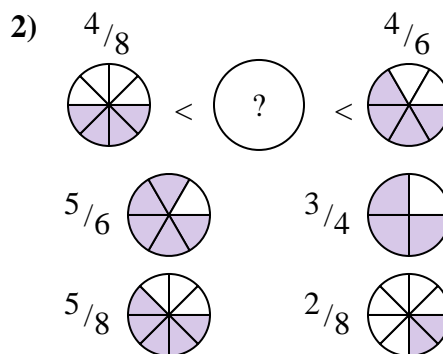
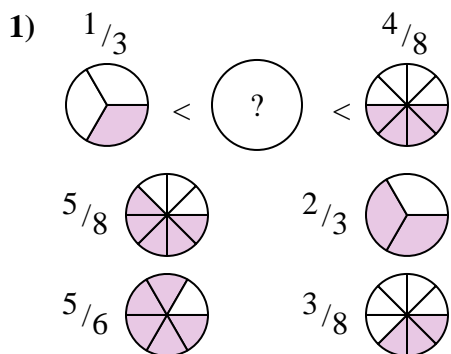
$\frac{1}{8}$ $\frac{7}{8}$

1. _____
2. _____
3. _____
4. _____
5. _____
6. _____
7. _____
8. _____



Determina quale frazione va inserita nel mezzo in modo da rendere vero il confronto.

Risposte



1. $\frac{3}{8}$
2. $\frac{5}{8}$
3. $\frac{1}{4}$
4. $\frac{3}{8}$
5. $\frac{5}{8}$
6. $\frac{3}{4}$
7. $\frac{3}{8}$
8. $\frac{2}{6}$