





Dividi e assegna una frazione ad ogni parte.


Es) *Dividi la figura in 2 parti uguali e indica a quanto corrisponde ciascuna parte.*



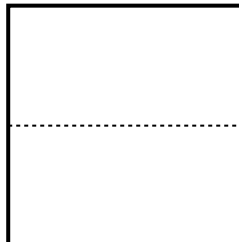
1) *Dividi la figura in 8 parti uguali e indica a quanto corrisponde ciascuna parte.*




2) *Dividi la figura in 6 parti uguali e indica a quanto corrisponde ciascuna parte.*



3) *Dividi la figura in 4 parti uguali e indica a quanto corrisponde ciascuna parte.*




4) *Dividi la figura in 3 parti uguali e indica a quanto corrisponde ciascuna parte.*




5) *Dividi la figura in 6 parti uguali e indica a quanto corrisponde ciascuna parte.*




6) *Dividi la figura in 8 parti uguali e indica a quanto corrisponde ciascuna parte.*



7) *Dividi la figura in 2 parti uguali e indica a quanto corrisponde ciascuna parte.*



8) *Dividi la figura in 4 parti uguali e indica a quanto corrisponde ciascuna parte.*



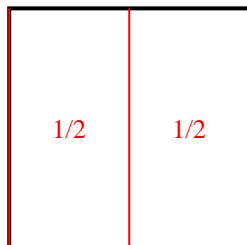
9) *Dividi la figura in 3 parti uguali e indica a quanto corrisponde ciascuna parte.*



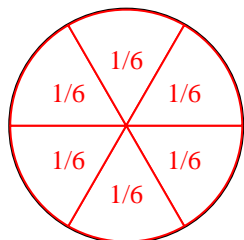


Dividi e assegna una frazione ad ogni parte.

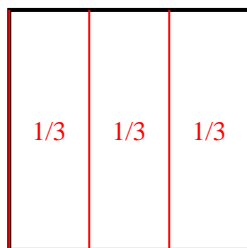
- Es) Dividi la figura in 2 parti uguali e indica a quanto corrisponde ciascuna parte.



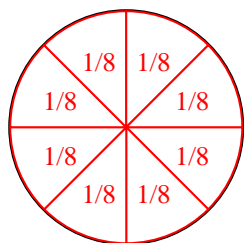
- 2) Dividi la figura in 6 parti uguali e indica a quanto corrisponde ciascuna parte.



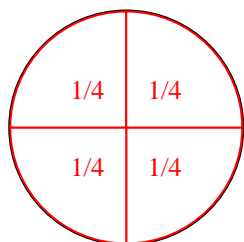
- 4) Dividi la figura in 3 parti uguali e indica a quanto corrisponde ciascuna parte.



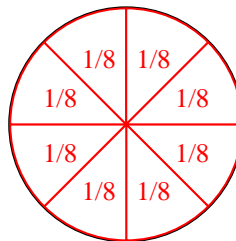
- 6) Dividi la figura in 8 parti uguali e indica a quanto corrisponde ciascuna parte.



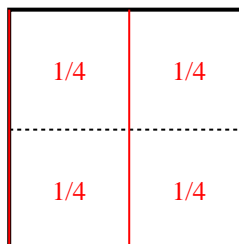
- 8) Dividi la figura in 4 parti uguali e indica a quanto corrisponde ciascuna parte.



- 1) Dividi la figura in 8 parti uguali e indica a quanto corrisponde ciascuna parte.



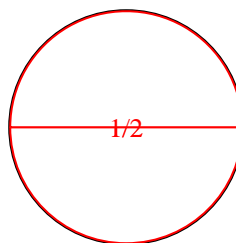
- 3) Dividi la figura in 4 parti uguali e indica a quanto corrisponde ciascuna parte.



- 5) Dividi la figura in 6 parti uguali e indica a quanto corrisponde ciascuna parte.



- 7) Dividi la figura in 2 parti uguali e indica a quanto corrisponde ciascuna parte.



- 9) Dividi la figura in 3 parti uguali e indica a quanto corrisponde ciascuna parte.

