





Dividi e assegna una frazione ad ogni parte.


Es) *Dividi la figura in 6 parti uguali e indica a quanto corrisponde ciascuna parte.*




2) *Dividi la figura in 3 parti uguali e indica a quanto corrisponde ciascuna parte.*




4) *Dividi la figura in 4 parti uguali e indica a quanto corrisponde ciascuna parte.*



6) *Dividi la figura in 2 parti uguali e indica a quanto corrisponde ciascuna parte.*




8) *Dividi la figura in 8 parti uguali e indica a quanto corrisponde ciascuna parte.*



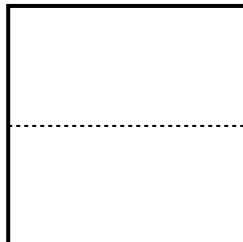
1) *Dividi la figura in 2 parti uguali e indica a quanto corrisponde ciascuna parte.*




3) *Dividi la figura in 8 parti uguali e indica a quanto corrisponde ciascuna parte.*



5) *Dividi la figura in 4 parti uguali e indica a quanto corrisponde ciascuna parte.*



7) *Dividi la figura in 3 parti uguali e indica a quanto corrisponde ciascuna parte.*



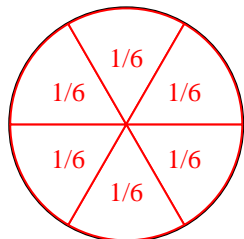
9) *Dividi la figura in 6 parti uguali e indica a quanto corrisponde ciascuna parte.*



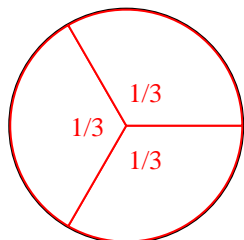


Dividi e assegna una frazione ad ogni parte.

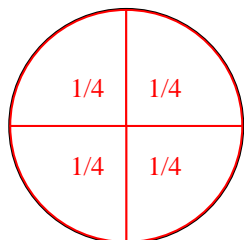
Es) *Dividi la figura in 6 parti uguali e indica a quanto corrisponde ciascuna parte.*



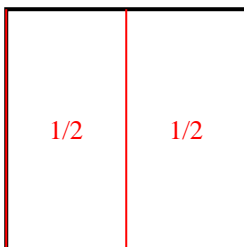
2) *Dividi la figura in 3 parti uguali e indica a quanto corrisponde ciascuna parte.*



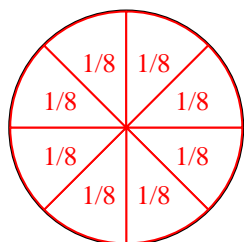
4) *Dividi la figura in 4 parti uguali e indica a quanto corrisponde ciascuna parte.*



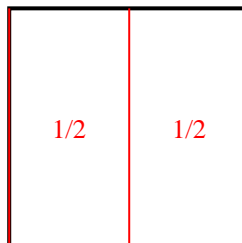
6) *Dividi la figura in 2 parti uguali e indica a quanto corrisponde ciascuna parte.*



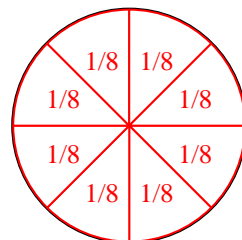
8) *Dividi la figura in 8 parti uguali e indica a quanto corrisponde ciascuna parte.*



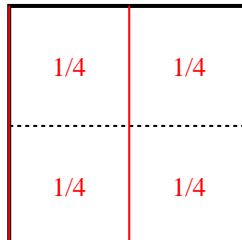
1) *Dividi la figura in 2 parti uguali e indica a quanto corrisponde ciascuna parte.*



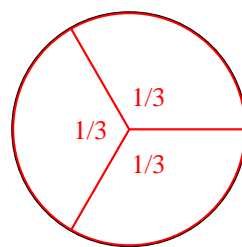
3) *Dividi la figura in 8 parti uguali e indica a quanto corrisponde ciascuna parte.*



5) *Dividi la figura in 4 parti uguali e indica a quanto corrisponde ciascuna parte.*



7) *Dividi la figura in 3 parti uguali e indica a quanto corrisponde ciascuna parte.*



9) *Dividi la figura in 6 parti uguali e indica a quanto corrisponde ciascuna parte.*

