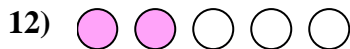
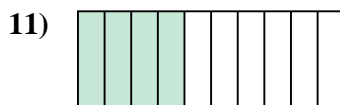


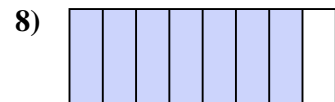
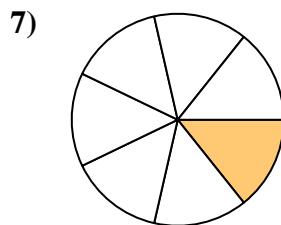
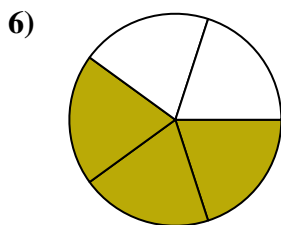
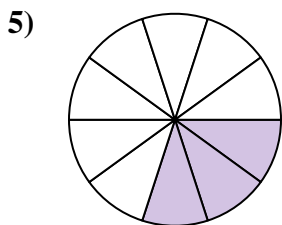

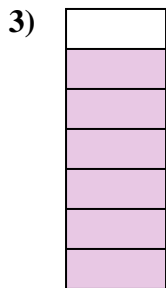






Determina se la parte colorata è 'più', 'meno' o 'uguale' alla metà.

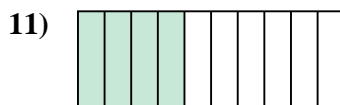


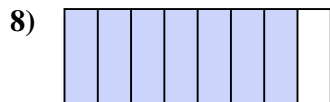
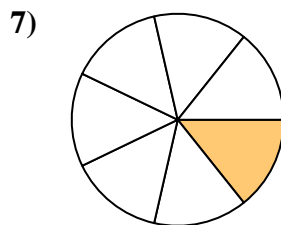
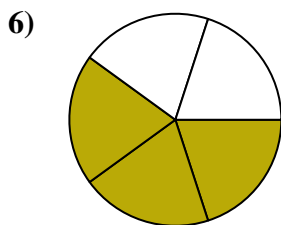
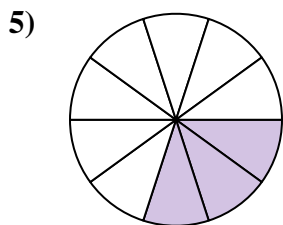

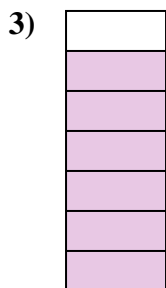


**Risposte**



1. \_\_\_\_\_
2. \_\_\_\_\_
3. \_\_\_\_\_
4. \_\_\_\_\_
5. \_\_\_\_\_
6. \_\_\_\_\_
7. \_\_\_\_\_
8. \_\_\_\_\_
9. \_\_\_\_\_
10. \_\_\_\_\_
11. \_\_\_\_\_
12. \_\_\_\_\_
13. \_\_\_\_\_
14. \_\_\_\_\_
15. \_\_\_\_\_
16. \_\_\_\_\_
17. \_\_\_\_\_
18. \_\_\_\_\_
19. \_\_\_\_\_
20. \_\_\_\_\_



Determina se la parte colorata è 'più', 'meno' o 'uguale' alla metà.



**Risposte**

1. minore

2. maggiore

3. maggiore

4. minore

5. minore

6. maggiore

7. minore

8. maggiore

9. minore

10. uguale

11. minore

12. minore

13. maggiore

14. maggiore

15. minore

16. minore

17. uguale

18. minore

19. minore

20. maggiore