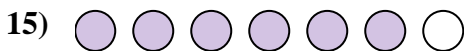
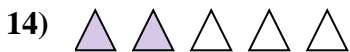

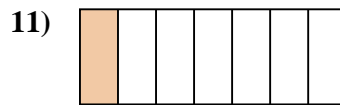
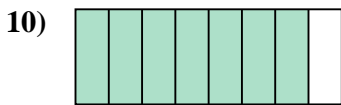
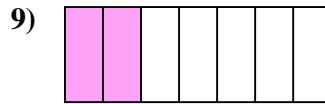
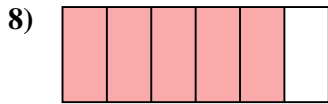
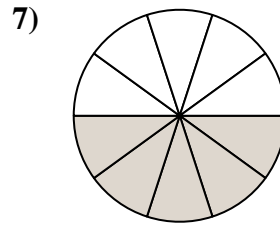
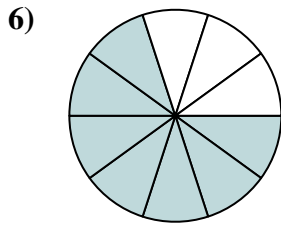
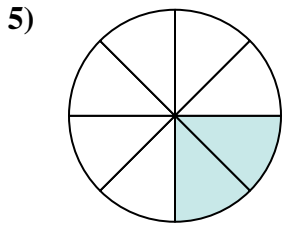








Determina se la parte colorata è 'più', 'meno' o 'uguale' alla metà.


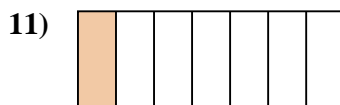
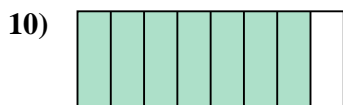
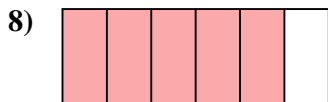
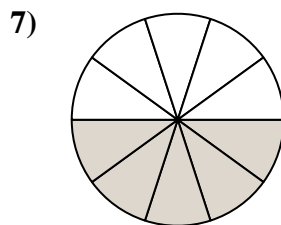
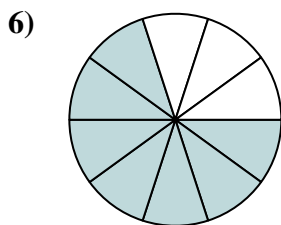
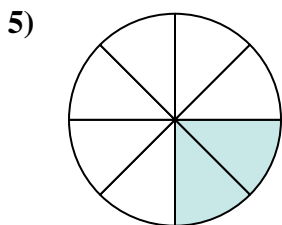


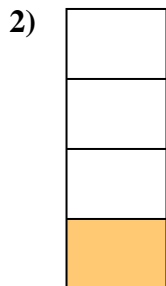



Risposte

1. _____
2. _____
3. _____
4. _____
5. _____
6. _____
7. _____
8. _____
9. _____
10. _____
11. _____
12. _____
13. _____
14. _____
15. _____
16. _____
17. _____
18. _____
19. _____
20. _____



Determina se la parte colorata è 'più', 'meno' o 'uguale' alla metà.



Risposte

1. minore

2. minore

3. maggiore

4. maggiore

5. minore

6. maggiore

7. uguale

8. maggiore

9. minore

10. maggiore

11. minore

12. maggiore

13. minore

14. minore

15. maggiore

16. uguale

17. minore

18. minore

19. minore

20. minore