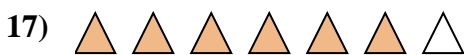


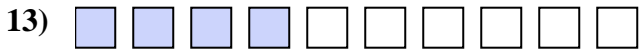
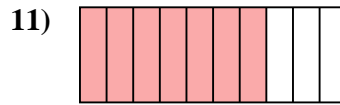

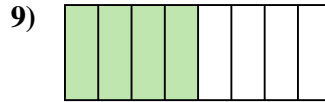
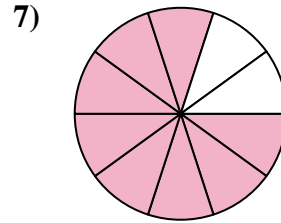
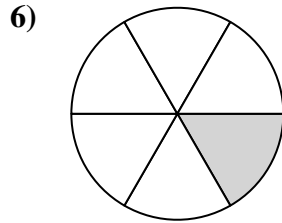
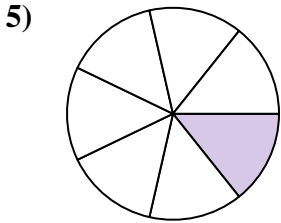

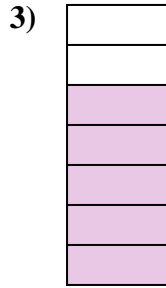
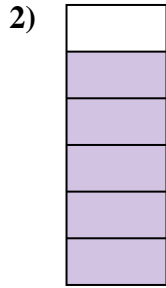





Determina se la parte colorata è 'più', 'meno' o 'uguale' alla metà.



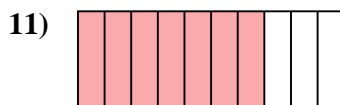

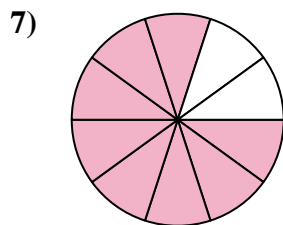
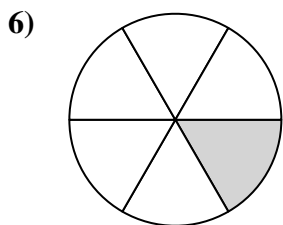
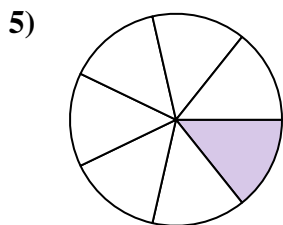
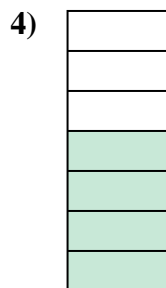
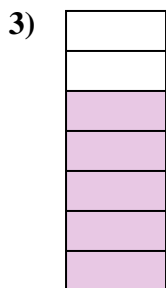
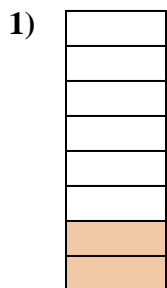


Risposte

1. _____
2. _____
3. _____
4. _____
5. _____
6. _____
7. _____
8. _____
9. _____
10. _____
11. _____
12. _____
13. _____
14. _____
15. _____
16. _____
17. _____
18. _____
19. _____
20. _____



Determina se la parte colorata è 'più', 'meno' o 'uguale' alla metà.



Risposte

1. minore

2. maggiore

3. maggiore

4. maggiore

5. minore

6. minore

7. maggiore

8. minore

9. uguale

10. uguale

11. maggiore

12. maggiore

13. minore

14. uguale

15. uguale

16. minore

17. maggiore

18. maggiore

19. minore

20. maggiore