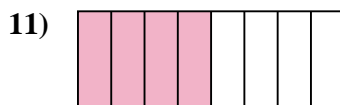
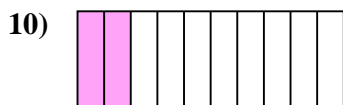
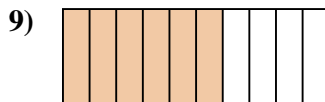

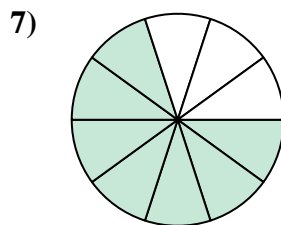
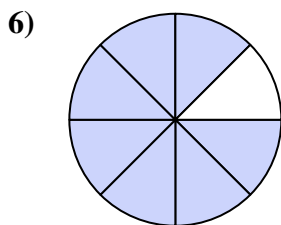
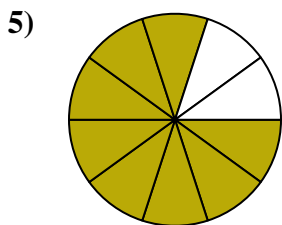







Determina se la parte colorata è 'più', 'meno' o 'uguale' alla metà.

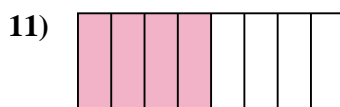
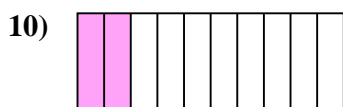
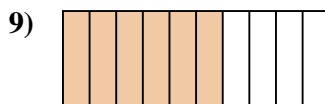

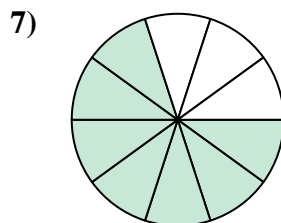
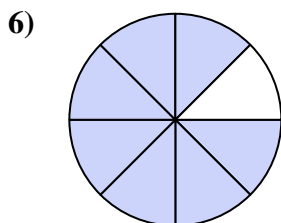
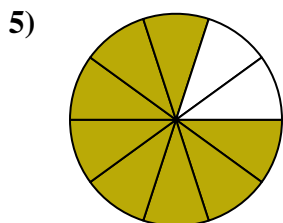


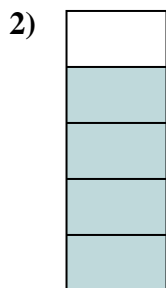



Risposte

1. _____
2. _____
3. _____
4. _____
5. _____
6. _____
7. _____
8. _____
9. _____
10. _____
11. _____
12. _____
13. _____
14. _____
15. _____
16. _____
17. _____
18. _____
19. _____
20. _____



Determina se la parte colorata è 'più', 'meno' o 'uguale' alla metà.



Risposte

1. minore

2. maggiore

3. minore

4. minore

5. maggiore

6. maggiore

7. maggiore

8. minore

9. maggiore

10. minore

11. uguale

12. maggiore

13. maggiore

14. uguale

15. uguale

16. minore

17. minore

18. maggiore

19. minore

20. minore