
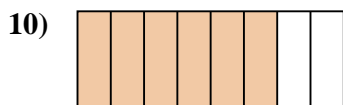
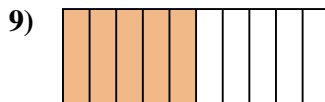
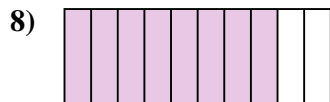
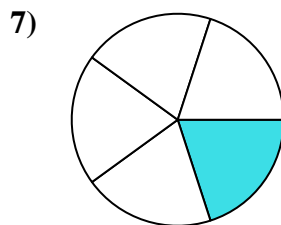
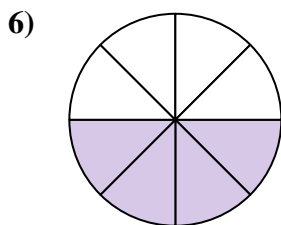
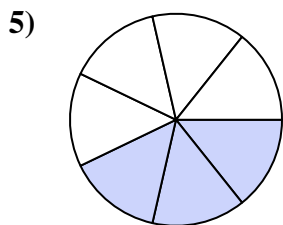

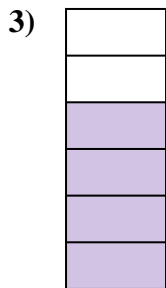





Determina se la parte colorata è 'più', 'meno' o 'uguale' alla metà.


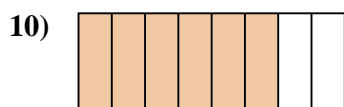
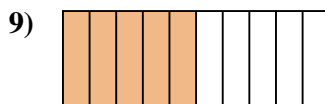
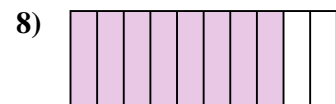
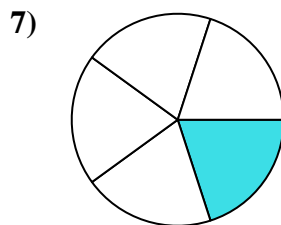
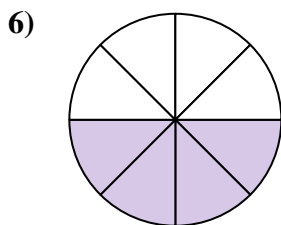
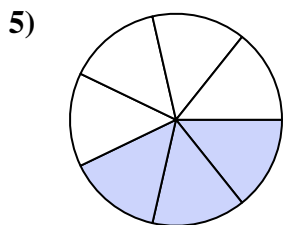

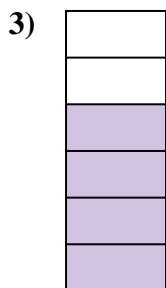



Risposte

1. _____
2. _____
3. _____
4. _____
5. _____
6. _____
7. _____
8. _____
9. _____
10. _____
11. _____
12. _____
13. _____
14. _____
15. _____
16. _____
17. _____
18. _____
19. _____
20. _____



Determina se la parte colorata è 'più', 'meno' o 'uguale' alla metà.



Risposte

1. maggiore

2. minore

3. maggiore

4. minore

5. minore

6. uguale

7. minore

8. maggiore

9. uguale

10. maggiore

11. maggiore

12. minore

13. maggiore

14. maggiore

15. minore

16. maggiore

17. minore

18. minore

19. minore

20. maggiore