
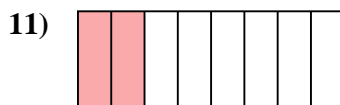
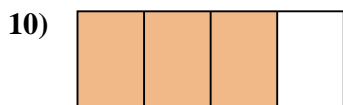
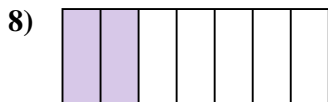
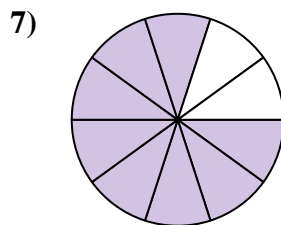
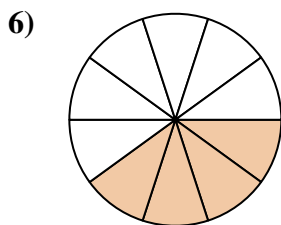
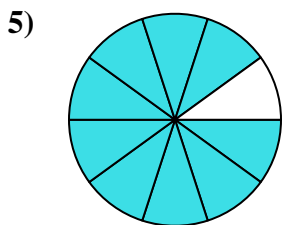

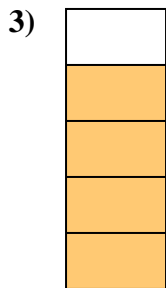






Determina se la parte colorata è 'più', 'meno' o 'uguale' alla metà.

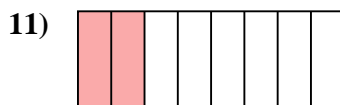
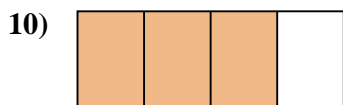
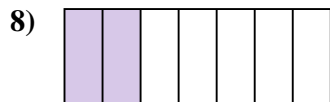
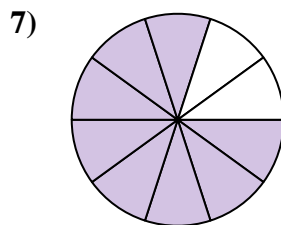
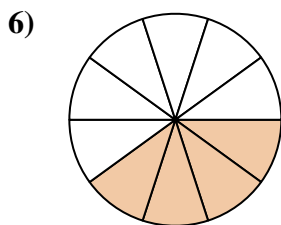
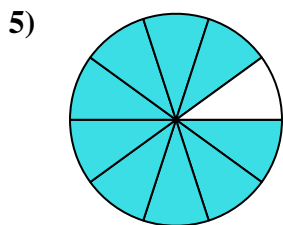

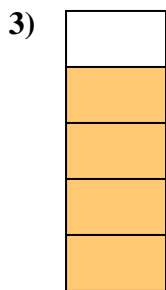




**Risposte**

1. \_\_\_\_\_
2. \_\_\_\_\_
3. \_\_\_\_\_
4. \_\_\_\_\_
5. \_\_\_\_\_
6. \_\_\_\_\_
7. \_\_\_\_\_
8. \_\_\_\_\_
9. \_\_\_\_\_
10. \_\_\_\_\_
11. \_\_\_\_\_
12. \_\_\_\_\_
13. \_\_\_\_\_
14. \_\_\_\_\_
15. \_\_\_\_\_
16. \_\_\_\_\_
17. \_\_\_\_\_
18. \_\_\_\_\_
19. \_\_\_\_\_
20. \_\_\_\_\_



Determina se la parte colorata è 'più', 'meno' o 'uguale' alla metà.



**Risposte**

1. maggiore

2. minore

3. maggiore

4. maggiore

5. maggiore

6. minore

7. maggiore

8. minore

9. minore

10. maggiore

11. minore

12. maggiore

13. minore

14. minore

15. minore

16. uguale

17. maggiore

18. uguale

19. uguale

20. maggiore