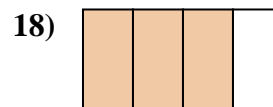
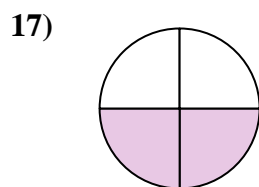

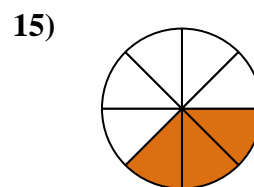
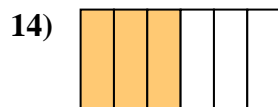

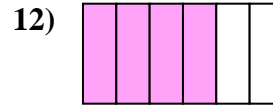
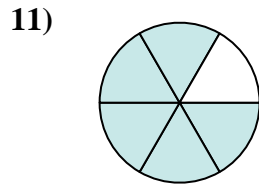
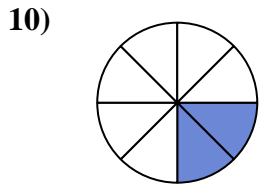
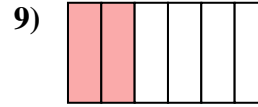
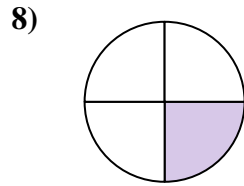
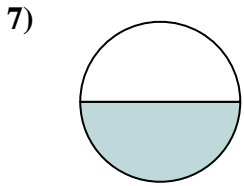
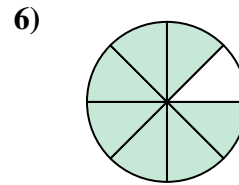
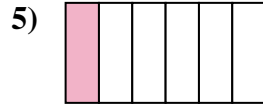
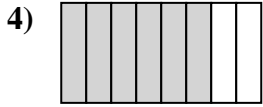
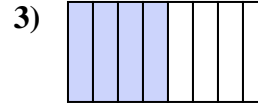
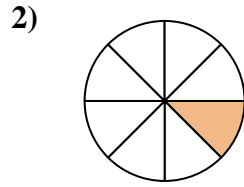
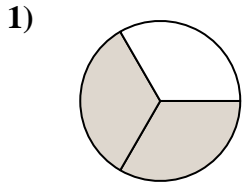




Scrivi la frazione corrispondente alla parte colorata.

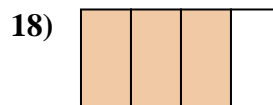
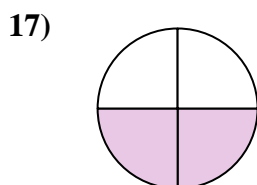

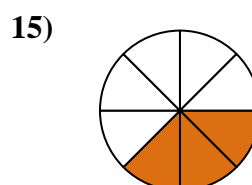
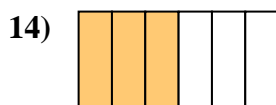
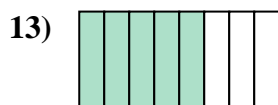

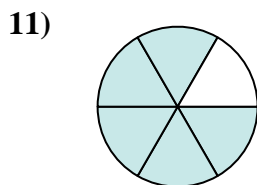
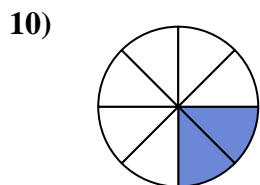
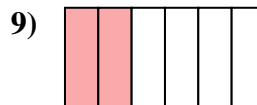
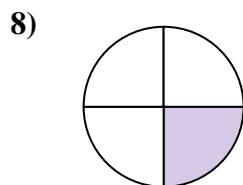
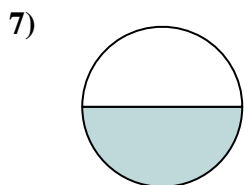
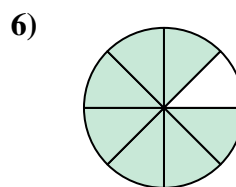
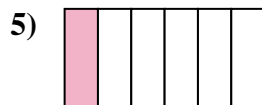
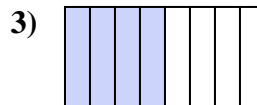
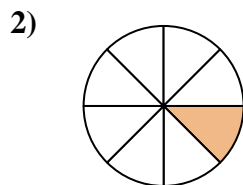
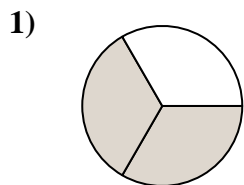


Risposte

1. _____
2. _____
3. _____
4. _____
5. _____
6. _____
7. _____
8. _____
9. _____
10. _____
11. _____
12. _____
13. _____
14. _____
15. _____
16. _____
17. _____
18. _____



Scrivi la frazione corrispondente alla parte colorata.



Risposte

1. $\frac{2}{3}$

2. $\frac{1}{8}$

3. $\frac{4}{8}$

4. $\frac{6}{8}$

5. $\frac{1}{6}$

6. $\frac{7}{8}$

7. $\frac{1}{2}$

8. $\frac{1}{4}$

9. $\frac{2}{6}$

10. $\frac{2}{8}$

11. $\frac{5}{6}$

12. $\frac{4}{6}$

13. $\frac{5}{8}$

14. $\frac{3}{6}$

15. $\frac{3}{8}$

16. $\frac{1}{3}$

17. $\frac{2}{4}$

18. $\frac{3}{4}$