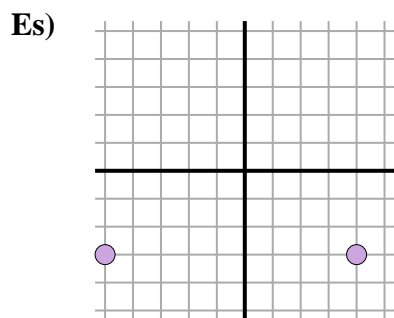


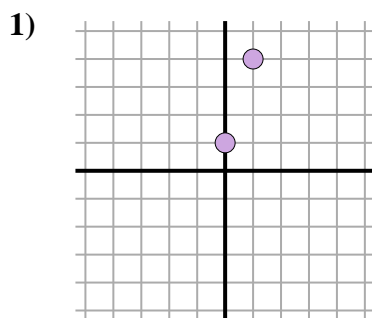


Trova la distanza tra i punti. Arrotonda il risultato alla decina più vicina.



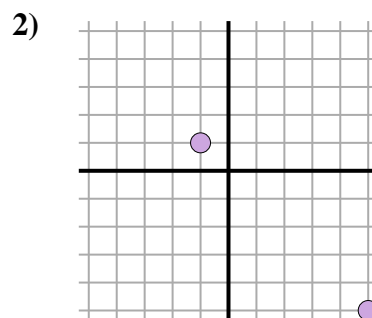
$$\sqrt{(-5-4)^2 + (-3--3)^2}$$

$$\sqrt{(81) + (0)}$$



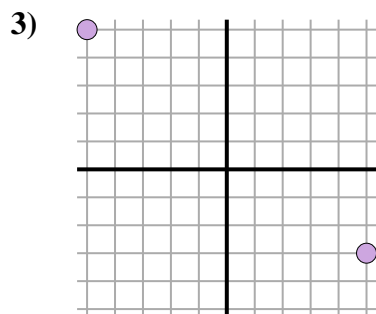
$$\sqrt{(1-0)^2 + (4-1)^2}$$

$$\sqrt{(1) + (9)}$$



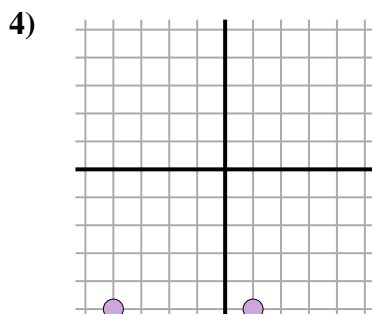
$$\sqrt{(-1-5)^2 + (1--5)^2}$$

$$\sqrt{(36) + (36)}$$



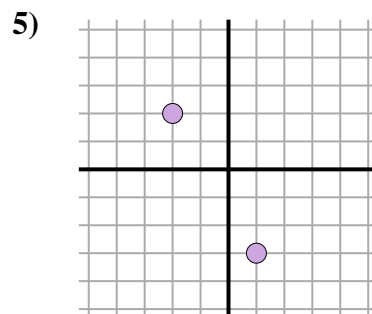
$$\sqrt{(5--5)^2 + (-3-5)^2}$$

$$\sqrt{(100) + (64)}$$



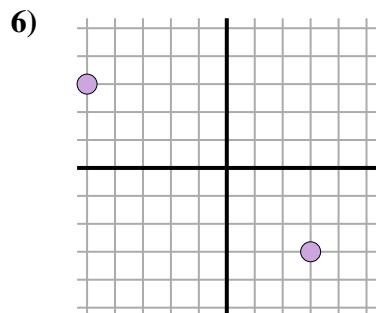
$$\sqrt{(1--4)^2 + (-5--5)^2}$$

$$\sqrt{(25) + (0)}$$



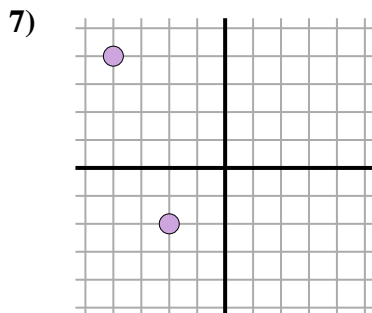
$$\sqrt{(-2-1)^2 + (2--3)^2}$$

$$\sqrt{(9) + (25)}$$



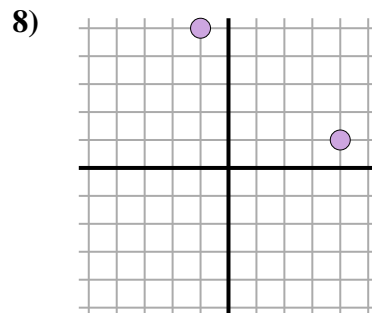
$$\sqrt{(-5-3)^2 + (3--3)^2}$$

$$\sqrt{(64) + (36)}$$



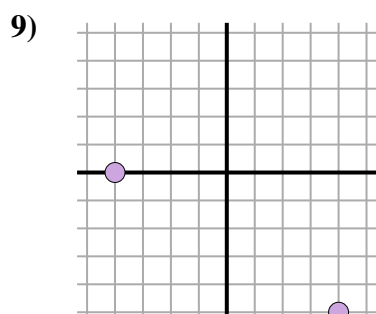
$$\sqrt{(-4--2)^2 + (4-2)^2}$$

$$\sqrt{(4) + (36)}$$



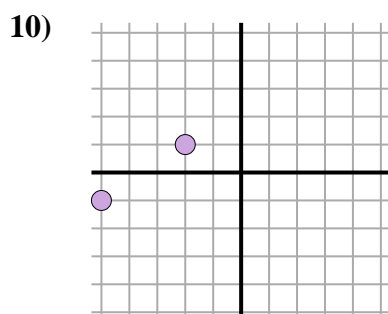
$$\sqrt{(-1-4)^2 + (5-1)^2}$$

$$\sqrt{(25) + (16)}$$



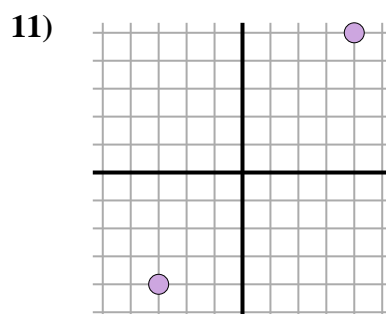
$$\sqrt{(-4-0)^2 + (0--5)^2}$$

$$\sqrt{(64) + (25)}$$



$$\sqrt{(-2--5)^2 + (1--1)^2}$$

$$\sqrt{(9) + (4)}$$



$$\sqrt{(-3-4)^2 + (-4-5)^2}$$

$$\sqrt{(49) + (81)}$$

RisposteEs. 91. 3,22. 8,53. 12,84. 55. 5,86. 107. 6,38. 6,49. 9,410. 3,611. 11,4