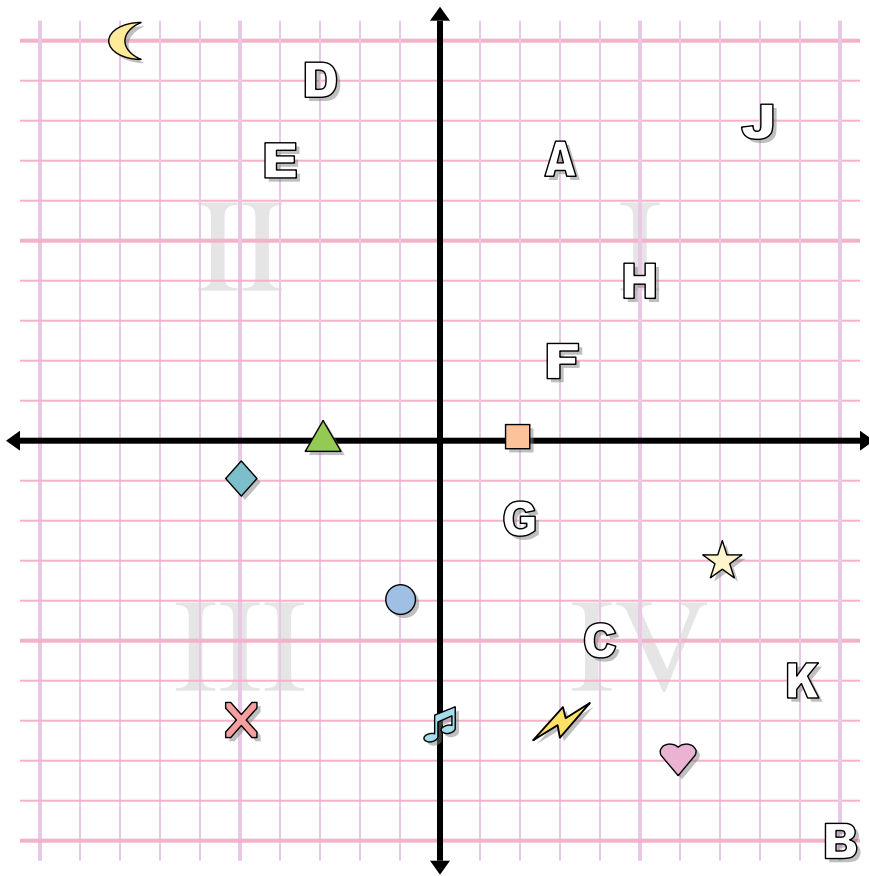




Risposte



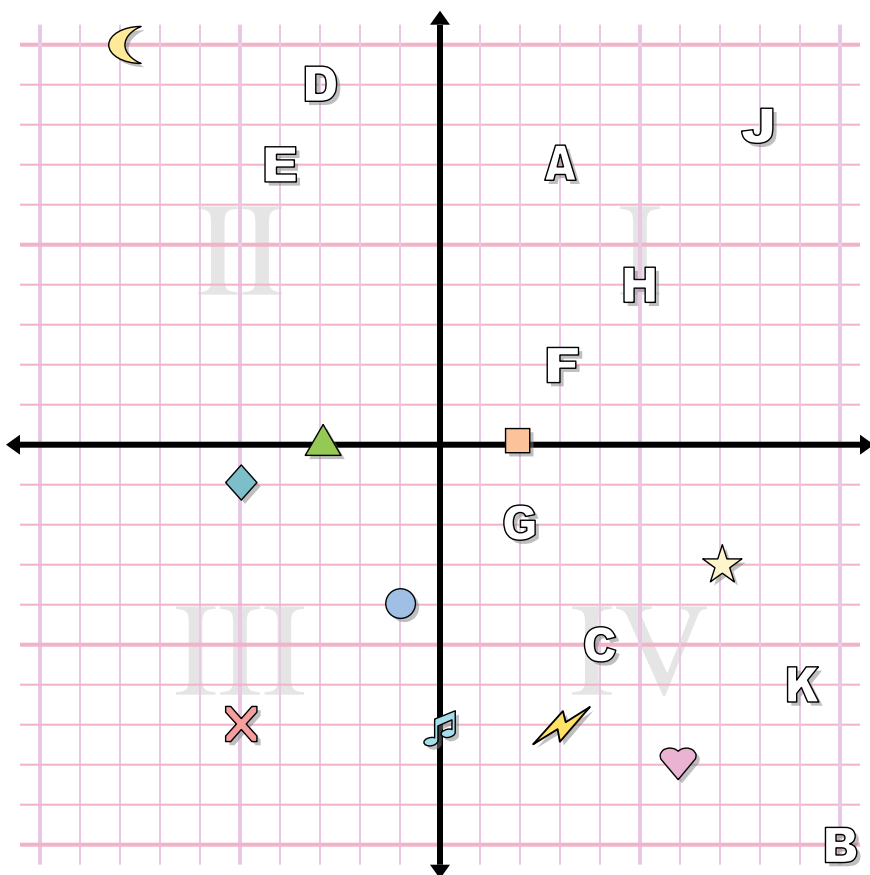
Determina le coordinate di ogni figura.

- | | |
|---------------|--------------|
| 1) music note | 2) circle |
| 3) lightning | 4) cross |
| 5) moon | 6) diamond |
| 7) star | 8) heart |
| 9) square | 10) triangle |

Indica quale lettera corrisponde a ciascuna coordinata.

- | | |
|--------------|----------------|
| 11) (-4 . 7) | 12) (2 . -2) |
| 13) (-3 . 9) | 14) (5 . 4) |
| 15) (8 . 8) | 16) (3 . 7) |
| 17) (4 . -5) | 18) (10 . -10) |
| 19) (9 . -6) | 20) (3 . 2) |

1. _____
2. _____
3. _____
4. _____
5. _____
6. _____
7. _____
8. _____
9. _____
10. _____
11. _____
12. _____
13. _____
14. _____
15. _____
16. _____
17. _____
18. _____
19. _____
20. _____



Risposte

1. (0 . -7)
2. (-1 . -4)
3. (3 . -7)
4. (-5 . -7)
5. (-8 . 10)
6. (-5 . -1)
7. (7 . -3)
8. (6 . -8)
9. (2 . 0)
10. (-3 . 0)
11. E
12. G
13. D
14. H
15. J
16. A
17. C
18. B
19. K
20. F

Determina le coordinate di ogni figura.

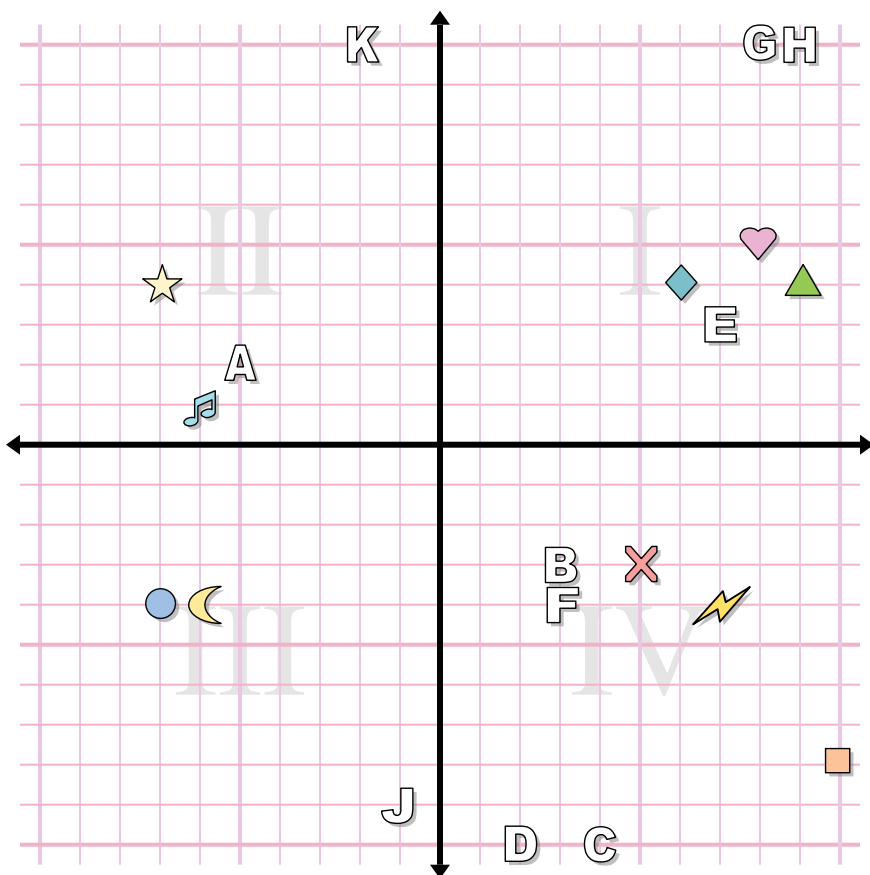
- | | |
|---------------|--------------|
| 1) music note | 2) circle |
| 3) lightning | 4) cross |
| 5) moon | 6) diamond |
| 7) star | 8) heart |
| 9) square | 10) triangle |

Indica quale lettera corrisponde a ciascuna coordinata.

- | | |
|--------------|----------------|
| 11) (-4 . 7) | 12) (2 . -2) |
| 13) (-3 . 9) | 14) (5 . 4) |
| 15) (8 . 8) | 16) (3 . 7) |
| 17) (4 . -5) | 18) (10 . -10) |
| 19) (9 . -6) | 20) (3 . 2) |



Risposte



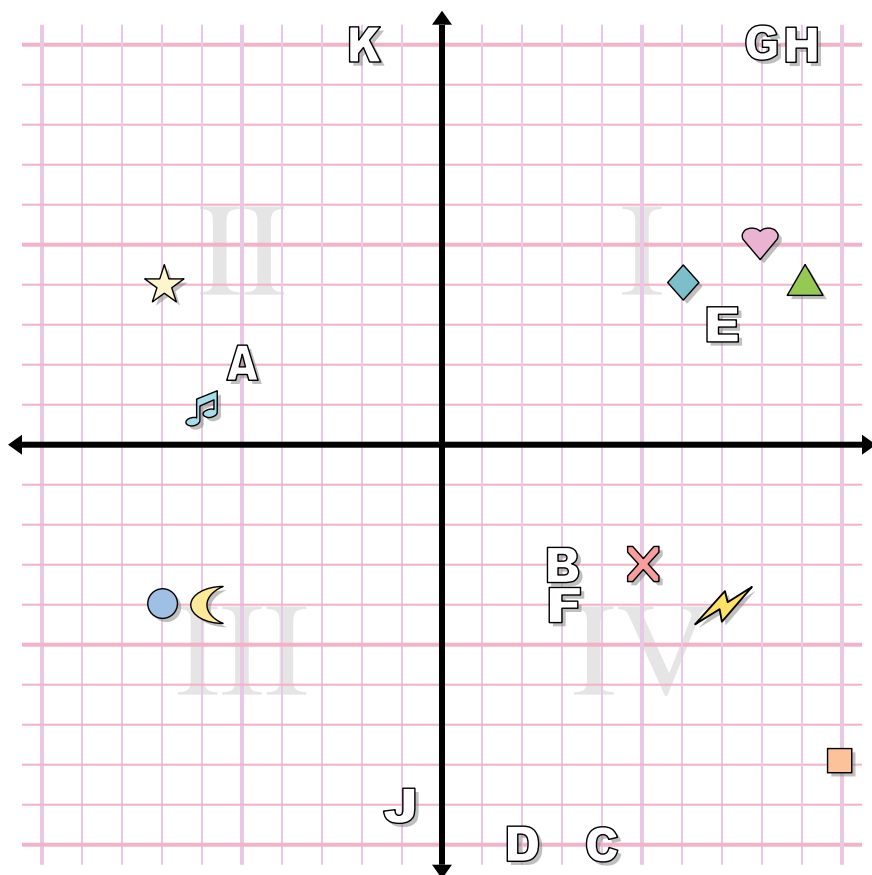
1. _____
2. _____
3. _____
4. _____
5. _____
6. _____
7. _____
8. _____
9. _____
10. _____
11. _____
12. _____
13. _____
14. _____
15. _____
16. _____
17. _____
18. _____
19. _____
20. _____

Determina le coordinate di ogni figura.

- | | |
|---------------|------------|
| 1) circle | 2) diamond |
| 3) square | 4) heart |
| 5) music note | 6) cross |
| 7) lightning | 8) moon |
| 9) triangle | 10) star |

Indica quale lettera corrisponde a ciascuna coordinata.

- | | |
|---------------|---------------|
| 11) (2 . -10) | 12) (9 . 10) |
| 13) (7 . 3) | 14) (4 . -10) |
| 15) (3 . -3) | 16) (-2 . 10) |
| 17) (-5 . 2) | 18) (8 . 10) |
| 19) (-1 . -9) | 20) (3 . -4) |



Risposte

1. (-7 . -4)
2. (6 . 4)
3. (10 . -8)
4. (8 . 5)
5. (-6 . 1)
6. (5 . -3)
7. (7 . -4)
8. (-6 . -4)
9. (9 . 4)
10. (-7 . 4)
11. **D**
12. **H**
13. **E**
14. **C**
15. **B**
16. **K**
17. **A**
18. **G**
19. **J**
20. **F**

Determina le coordinate di ogni figura.

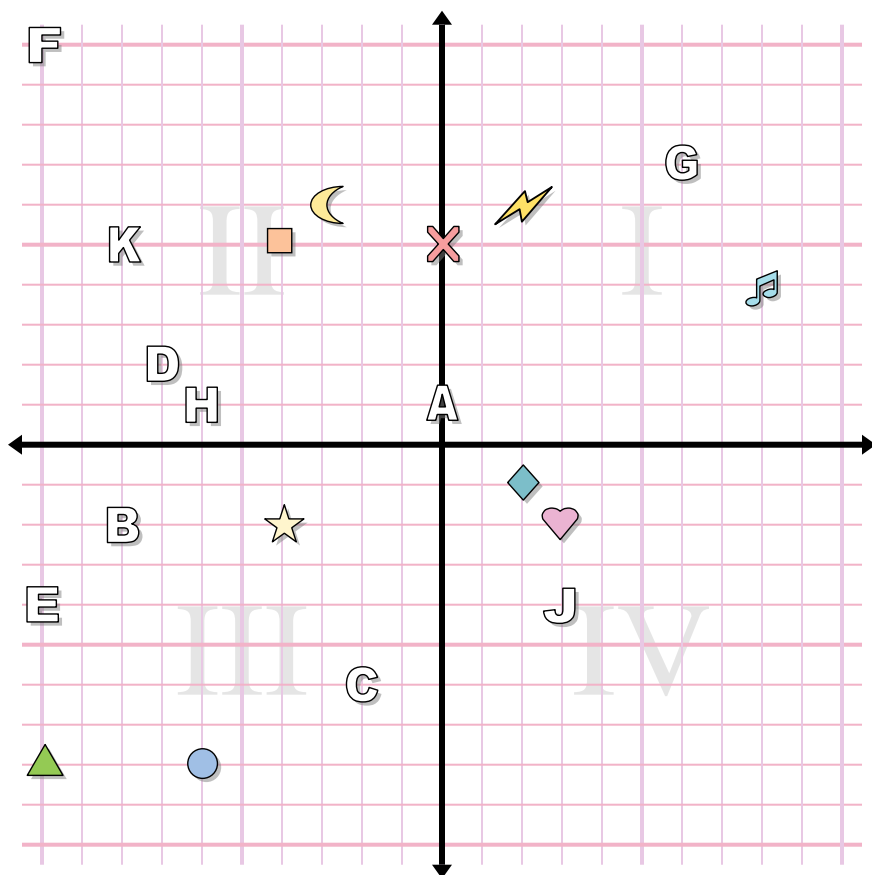
- | | |
|---------------|------------|
| 1) circle | 2) diamond |
| 3) square | 4) heart |
| 5) music note | 6) cross |
| 7) lightning | 8) moon |
| 9) triangle | 10) star |

Indica quale lettera corrisponde a ciascuna coordinata.

- | | |
|---------------|---------------|
| 11) (2 . -10) | 12) (9 . 10) |
| 13) (7 . 3) | 14) (4 . -10) |
| 15) (3 . -3) | 16) (-2 . 10) |
| 17) (-5 . 2) | 18) (8 . 10) |
| 19) (-1 . -9) | 20) (3 . -4) |



Risposte



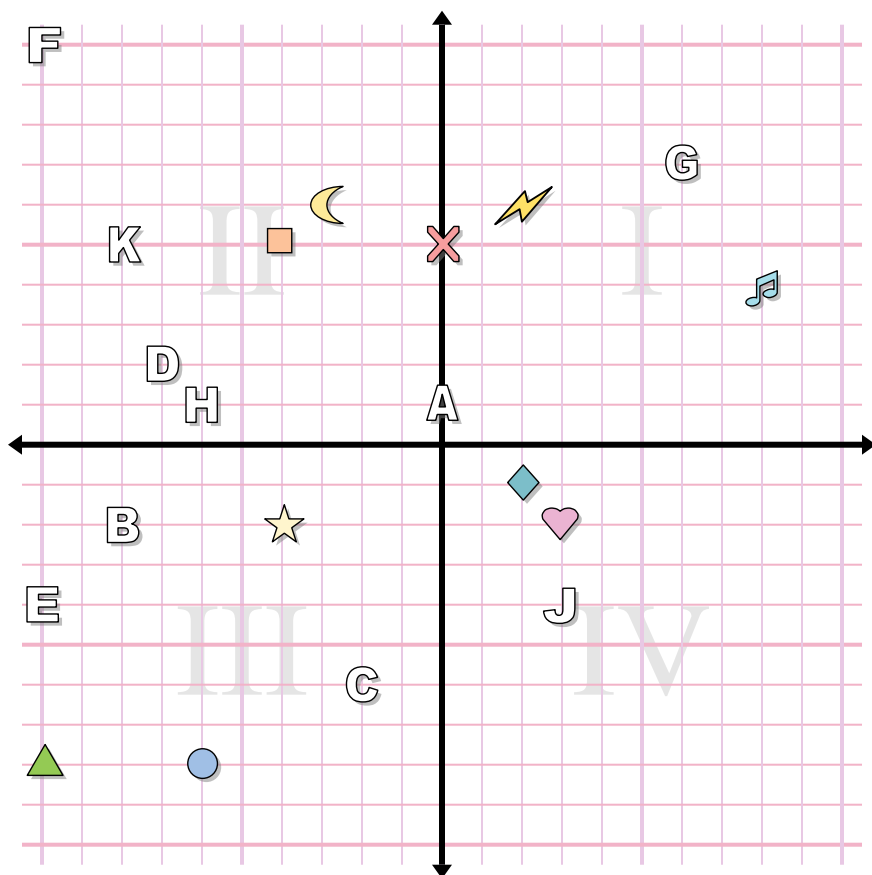
Determina le coordinate di ogni figura.

- | | |
|---------------|--------------|
| 1) triangle | 2) moon |
| 3) square | 4) heart |
| 5) star | 6) circle |
| 7) music note | 8) lightning |
| 9) cross | 10) diamond |

Indica quale lettera corrisponde a ciascuna coordinata.

- | | |
|---------------|----------------|
| 11) (3 . -4) | 12) (-6 . 1) |
| 13) (-2 . -6) | 14) (-8 . 5) |
| 15) (0 . 1) | 16) (-10 . 10) |
| 17) (6 . 7) | 18) (-7 . 2) |
| 19) (-8 . -2) | 20) (-10 . -4) |

1. _____
2. _____
3. _____
4. _____
5. _____
6. _____
7. _____
8. _____
9. _____
10. _____
11. _____
12. _____
13. _____
14. _____
15. _____
16. _____
17. _____
18. _____
19. _____
20. _____



Risposte

1. **(-10 . -8)**
2. **(-3 . 6)**
3. **(-4 . 5)**
4. **(3 . -2)**
5. **(-4 . -2)**
6. **(-6 . -8)**
7. **(8 . 4)**
8. **(2 . 6)**
9. **(0 . 5)**
10. **(2 . -1)**
11. **J**
12. **H**
13. **C**
14. **K**
15. **A**
16. **F**
17. **G**
18. **D**
19. **B**
20. **E**

Determina le coordinate di ogni figura.

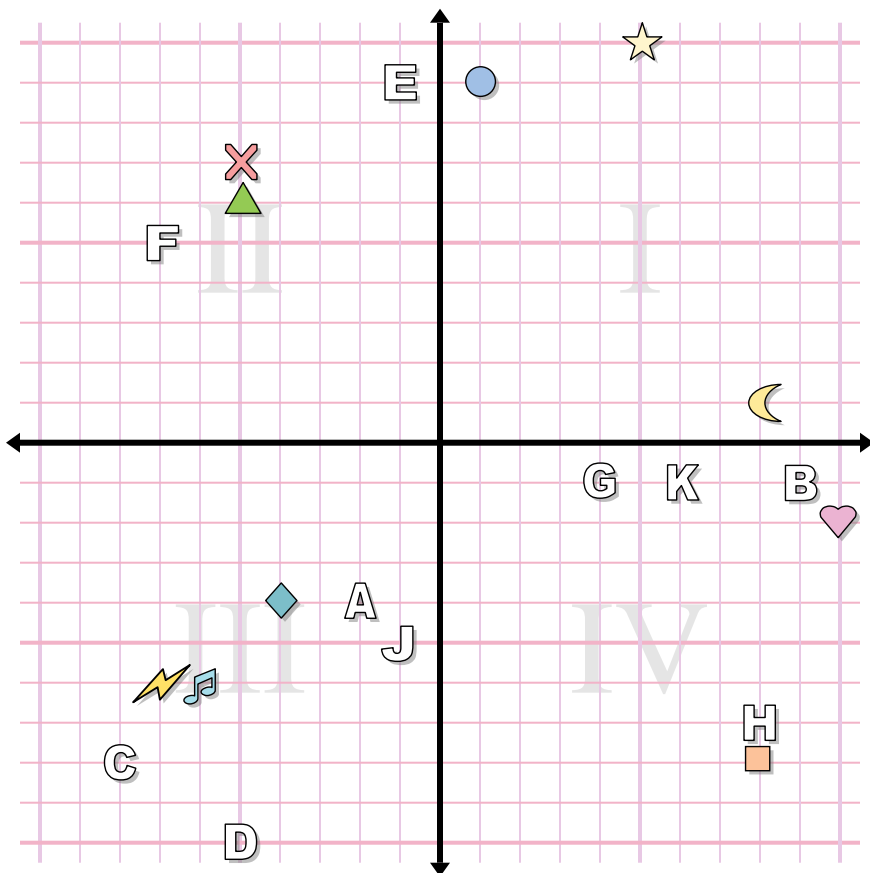
- | | |
|---------------|--------------|
| 1) triangle | 2) moon |
| 3) square | 4) heart |
| 5) star | 6) circle |
| 7) music note | 8) lightning |
| 9) cross | 10) diamond |

Indica quale lettera corrisponde a ciascuna coordinata.

- | | |
|---------------|----------------|
| 11) (3 . -4) | 12) (-6 . 1) |
| 13) (-2 . -6) | 14) (-8 . 5) |
| 15) (0 . 1) | 16) (-10 . 10) |
| 17) (6 . 7) | 18) (-7 . 2) |
| 19) (-8 . -2) | 20) (-10 . -4) |



Risposte



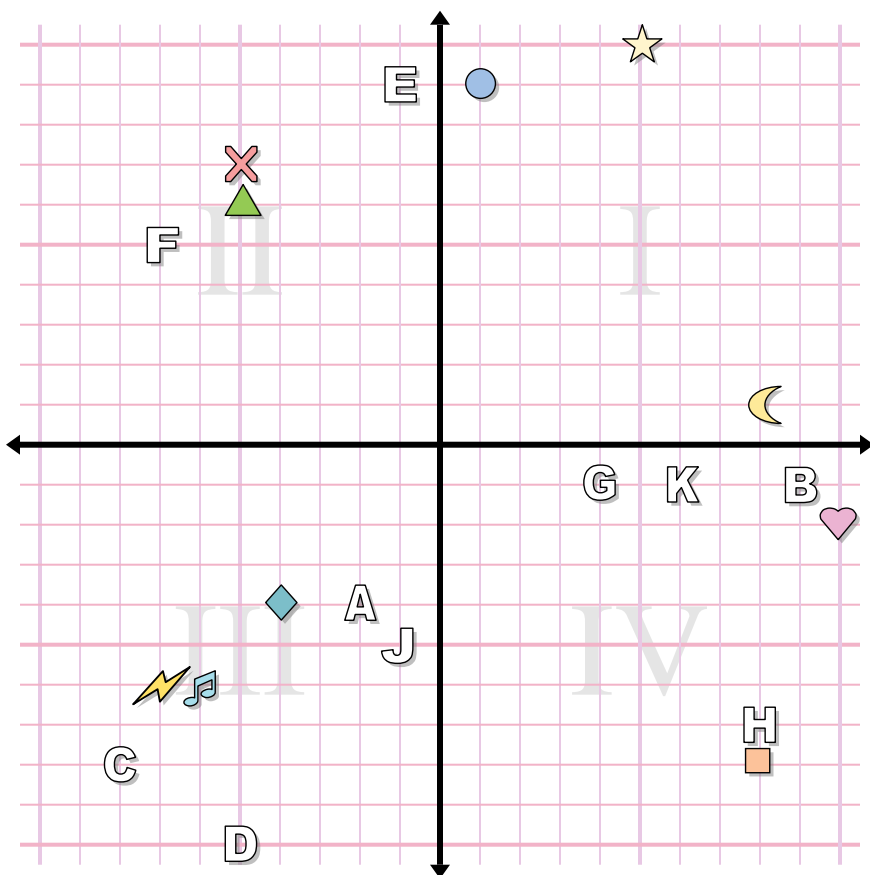
1. _____
2. _____
3. _____
4. _____
5. _____
6. _____
7. _____
8. _____
9. _____
10. _____
11. _____
12. _____
13. _____
14. _____
15. _____
16. _____
17. _____
18. _____
19. _____
20. _____

Determina le coordinate di ogni figura.

- | | |
|------------|---------------|
| 1) cross | 2) music note |
| 3) star | 4) circle |
| 5) square | 6) heart |
| 7) diamond | 8) lightning |
| 9) moon | 10) triangle |

Indica quale lettera corrisponde a ciascuna coordinata.

- | | |
|---------------|----------------|
| 11) (-2 . -4) | 12) (-1 . -5) |
| 13) (8 . -7) | 14) (-1 . 9) |
| 15) (6 . -1) | 16) (-8 . -8) |
| 17) (9 . -1) | 18) (4 . -1) |
| 19) (-7 . 5) | 20) (-5 . -10) |



Risposte

1. **(-5 . 7)**
2. **(-6 . -6)**
3. **(5 . 10)**
4. **(1 . 9)**
5. **(8 . -8)**
6. **(10 . -2)**
7. **(-4 . -4)**
8. **(-7 . -6)**
9. **(8 . 1)**
10. **(-5 . 6)**
11. **A**
12. **J**
13. **H**
14. **E**
15. **K**
16. **C**
17. **B**
18. **G**
19. **F**
20. **D**

Determina le coordinate di ogni figura.

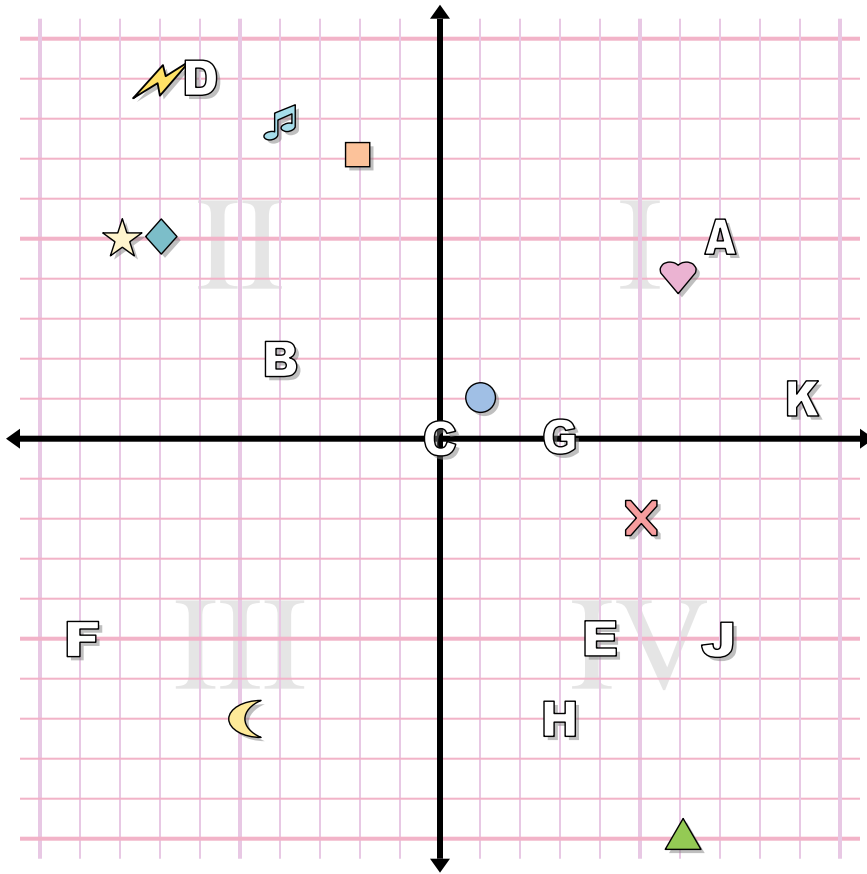
- | | |
|------------|---------------|
| 1) cross | 2) music note |
| 3) star | 4) circle |
| 5) square | 6) heart |
| 7) diamond | 8) lightning |
| 9) moon | 10) triangle |

Indica quale lettera corrisponde a ciascuna coordinata.

- | | |
|---------------|----------------|
| 11) (-2 . -4) | 12) (-1 . -5) |
| 13) (8 . -7) | 14) (-1 . 9) |
| 15) (6 . -1) | 16) (-8 . -8) |
| 17) (9 . -1) | 18) (4 . -1) |
| 19) (-7 . 5) | 20) (-5 . -10) |



Risposte



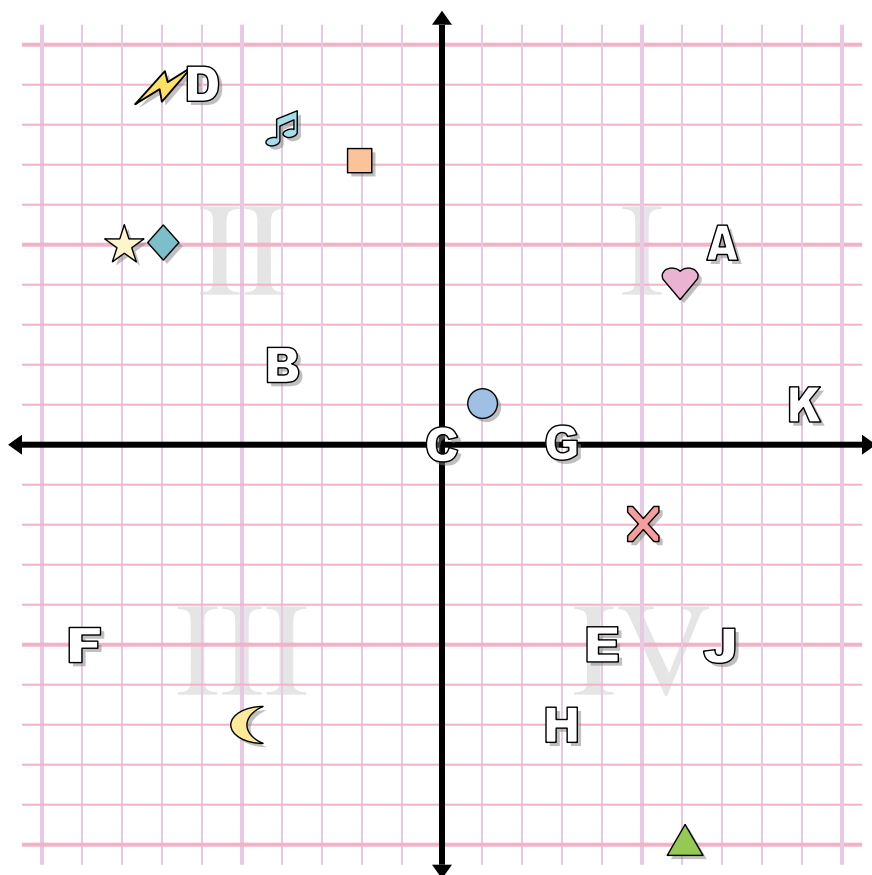
1. _____
2. _____
3. _____
4. _____
5. _____
6. _____
7. _____
8. _____
9. _____
10. _____
11. _____
12. _____
13. _____
14. _____
15. _____
16. _____
17. _____
18. _____
19. _____
20. _____

Determina le coordinate di ogni figura.

- | | |
|---------------|--------------|
| 1) cross | 2) square |
| 3) music note | 4) moon |
| 5) circle | 6) heart |
| 7) triangle | 8) lightning |
| 9) diamond | 10) star |

Indica quale lettera corrisponde a ciascuna coordinata.

- | | |
|---------------|--------------|
| 11) (-4 . 2) | 12) (7 . -5) |
| 13) (0 . 0) | 14) (3 . 0) |
| 15) (3 . -7) | 16) (4 . -5) |
| 17) (7 . 5) | 18) (-6 . 9) |
| 19) (-9 . -5) | 20) (9 . 1) |



Risposte

1. **(5 . -2)**
2. **(-2 . 7)**
3. **(-4 . 8)**
4. **(-5 . -7)**
5. **(1 . 1)**
6. **(6 . 4)**
7. **(6 . -10)**
8. **(-7 . 9)**
9. **(-7 . 5)**
10. **(-8 . 5)**
11. **B**
12. **J**
13. **C**
14. **G**
15. **H**
16. **E**
17. **A**
18. **D**
19. **F**
20. **K**

Determina le coordinate di ogni figura.

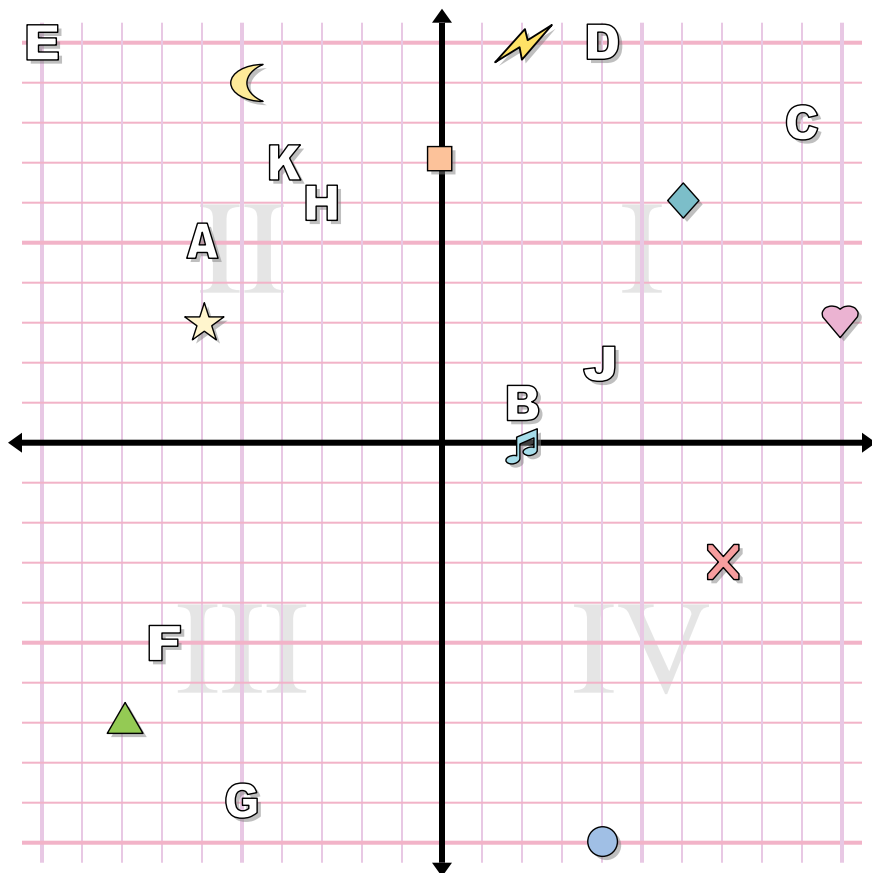
- | | |
|---------------|--------------|
| 1) cross | 2) square |
| 3) music note | 4) moon |
| 5) circle | 6) heart |
| 7) triangle | 8) lightning |
| 9) diamond | 10) star |

Indica quale lettera corrisponde a ciascuna coordinata.

- | | |
|---------------|--------------|
| 11) (-4 . 2) | 12) (7 . -5) |
| 13) (0 . 0) | 14) (3 . 0) |
| 15) (3 . -7) | 16) (4 . -5) |
| 17) (7 . 5) | 18) (-6 . 9) |
| 19) (-9 . -5) | 20) (9 . 1) |



Risposte



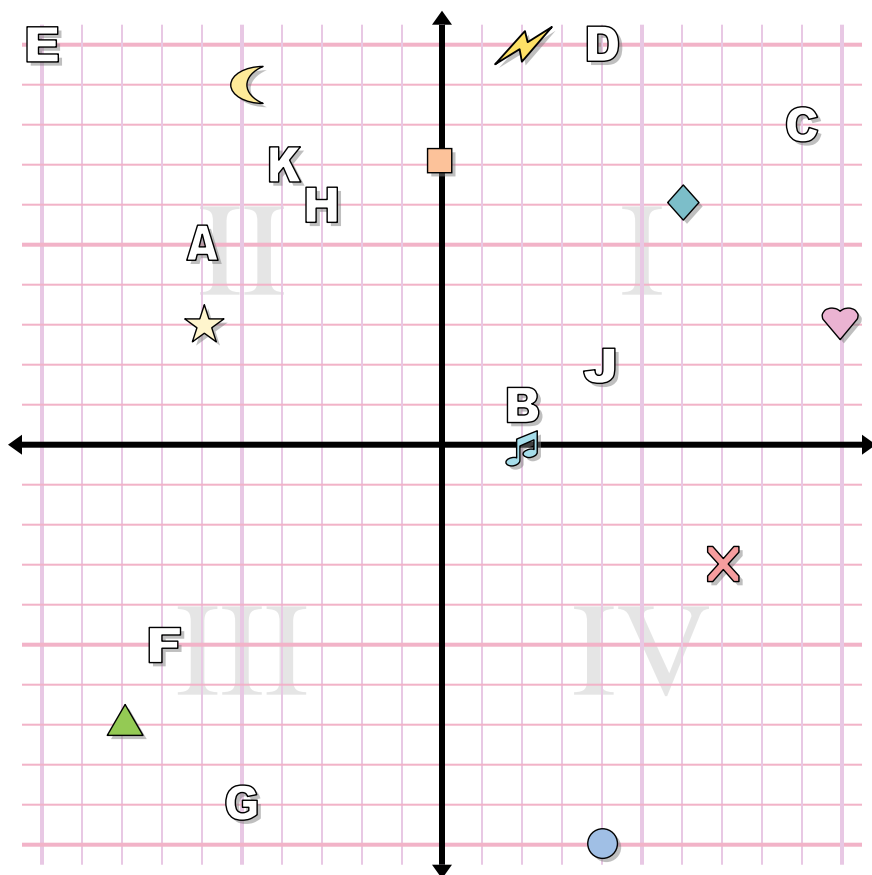
1. _____
2. _____
3. _____
4. _____
5. _____
6. _____
7. _____
8. _____
9. _____
10. _____
11. _____
12. _____
13. _____
14. _____
15. _____
16. _____
17. _____
18. _____
19. _____
20. _____

Determina le coordinate di ogni figura.

- | | |
|--------------|---------------|
| 1) star | 2) moon |
| 3) heart | 4) diamond |
| 5) lightning | 6) triangle |
| 7) circle | 8) music note |
| 9) square | 10) cross |

Indica quale lettera corrisponde a ciascuna coordinata.

- | | |
|---------------|----------------|
| 11) (-3 . 6) | 12) (-4 . 7) |
| 13) (-5 . -9) | 14) (-7 . -5) |
| 15) (-6 . 5) | 16) (9 . 8) |
| 17) (4 . 10) | 18) (4 . 2) |
| 19) (2 . 1) | 20) (-10 . 10) |



Risposte

1. **(-6 . 3)**
2. **(-5 . 9)**
3. **(10 . 3)**
4. **(6 . 6)**
5. **(2 . 10)**
6. **(-8 . -7)**
7. **(4 . -10)**
8. **(2 . 0)**
9. **(0 . 7)**
10. **(7 . -3)**
11. **H**
12. **K**
13. **G**
14. **F**
15. **A**
16. **C**
17. **D**
18. **J**
19. **B**
20. **E**

Determina le coordinate di ogni figura.

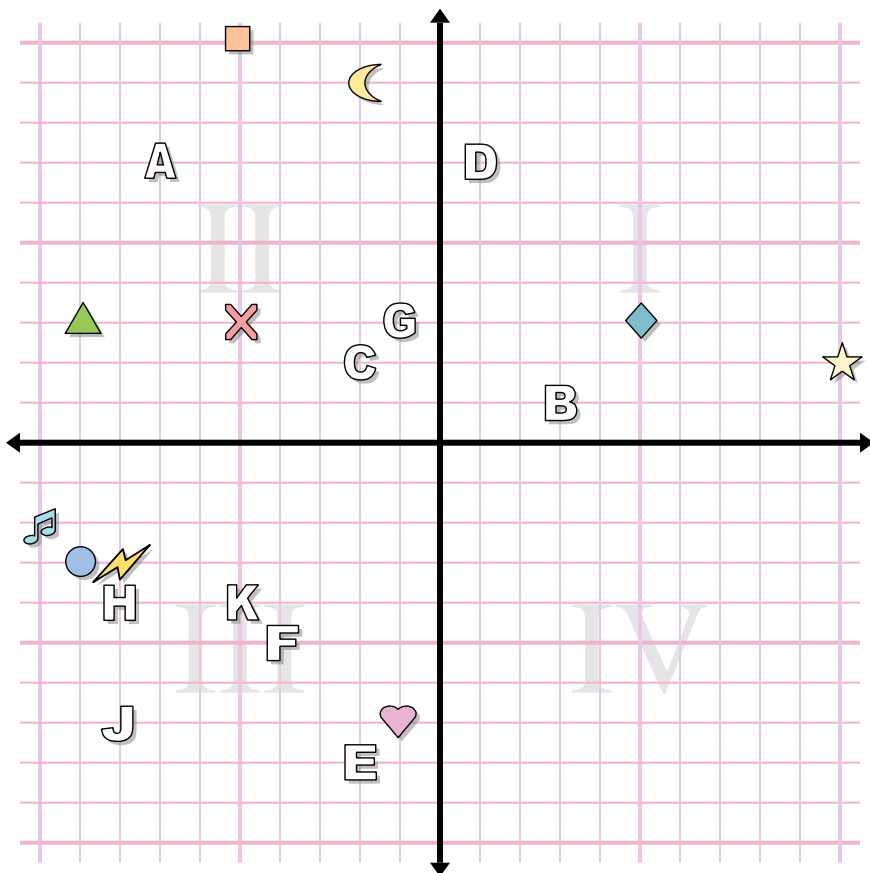
- | | |
|--------------|---------------|
| 1) star | 2) moon |
| 3) heart | 4) diamond |
| 5) lightning | 6) triangle |
| 7) circle | 8) music note |
| 9) square | 10) cross |

Indica quale lettera corrisponde a ciascuna coordinata.

- | | |
|---------------|----------------|
| 11) (-3 . 6) | 12) (-4 . 7) |
| 13) (-5 . -9) | 14) (-7 . -5) |
| 15) (-6 . 5) | 16) (9 . 8) |
| 17) (4 . 10) | 18) (4 . 2) |
| 19) (2 . 1) | 20) (-10 . 10) |



Risposte



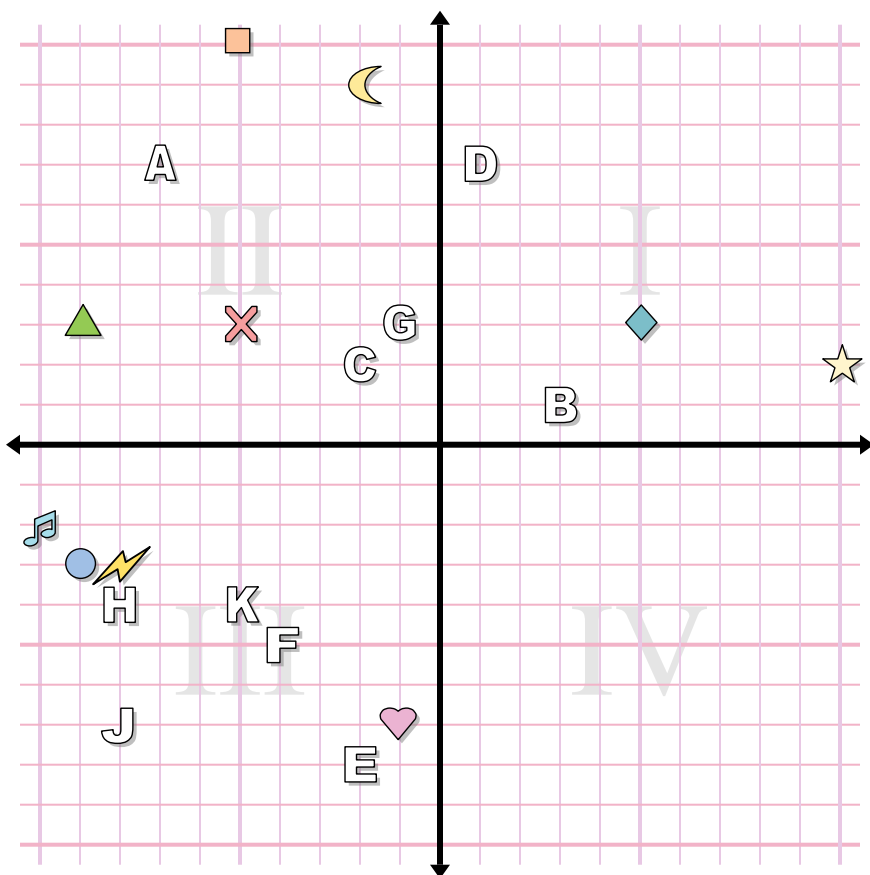
1. _____
2. _____
3. _____
4. _____
5. _____
6. _____
7. _____
8. _____
9. _____
10. _____
11. _____
12. _____
13. _____
14. _____
15. _____
16. _____
17. _____
18. _____
19. _____
20. _____

Determina le coordinate di ogni figura.

- | | |
|---------------|--------------|
| 1) diamond | 2) star |
| 3) triangle | 4) moon |
| 5) music note | 6) lightning |
| 7) square | 8) heart |
| 9) circle | 10) cross |

Indica quale lettera corrisponde a ciascuna coordinata.

- | | |
|---------------|---------------|
| 11) (-7 . 7) | 12) (-4 . -5) |
| 13) (-8 . -4) | 14) (-2 . -8) |
| 15) (-8 . -7) | 16) (-1 . 3) |
| 17) (-5 . -4) | 18) (3 . 1) |
| 19) (-2 . 2) | 20) (1 . 7) |



Risposte

1. (5 . 3)
2. (10 . 2)
3. (-9 . 3)
4. (-2 . 9)
5. (-10 . -2)
6. (-8 . -3)
7. (-5 . 10)
8. (-1 . -7)
9. (-9 . -3)
10. (-5 . 3)
11. A
12. F
13. H
14. E
15. J
16. G
17. K
18. B
19. C
20. D

Determina le coordinate di ogni figura.

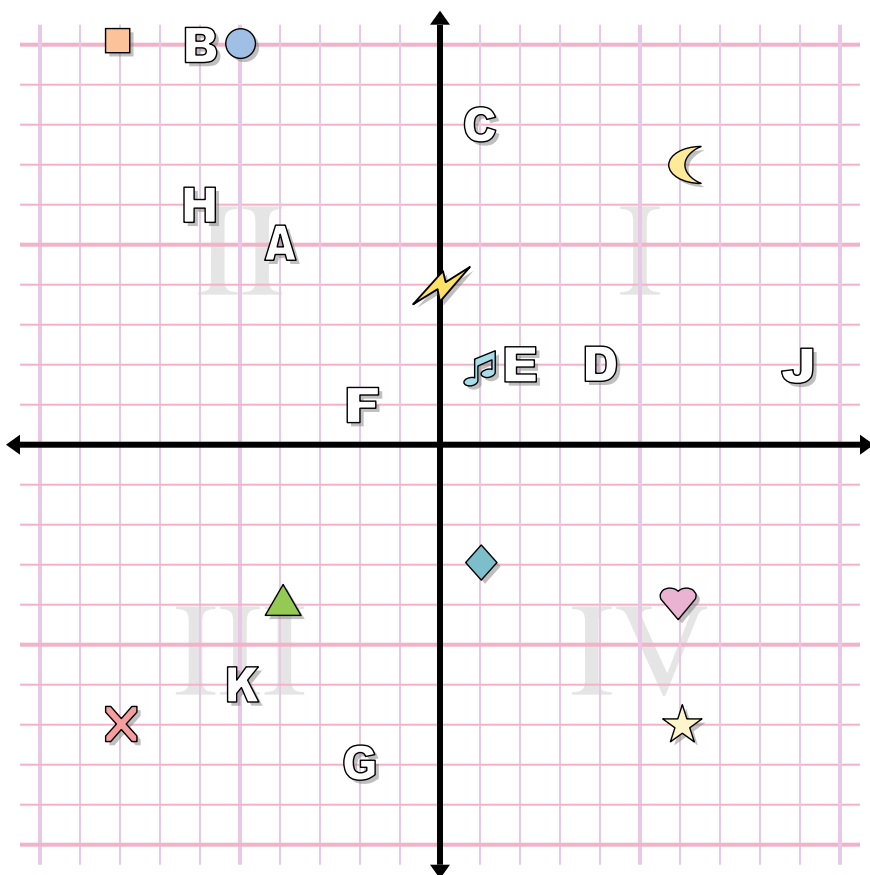
- | | |
|---------------|--------------|
| 1) diamond | 2) star |
| 3) triangle | 4) moon |
| 5) music note | 6) lightning |
| 7) square | 8) heart |
| 9) circle | 10) cross |

Indica quale lettera corrisponde a ciascuna coordinata.

- | | |
|---------------|---------------|
| 11) (-7 . 7) | 12) (-4 . -5) |
| 13) (-8 . -4) | 14) (-2 . -8) |
| 15) (-8 . -7) | 16) (-1 . 3) |
| 17) (-5 . -4) | 18) (3 . 1) |
| 19) (-2 . 2) | 20) (1 . 7) |



Risposte



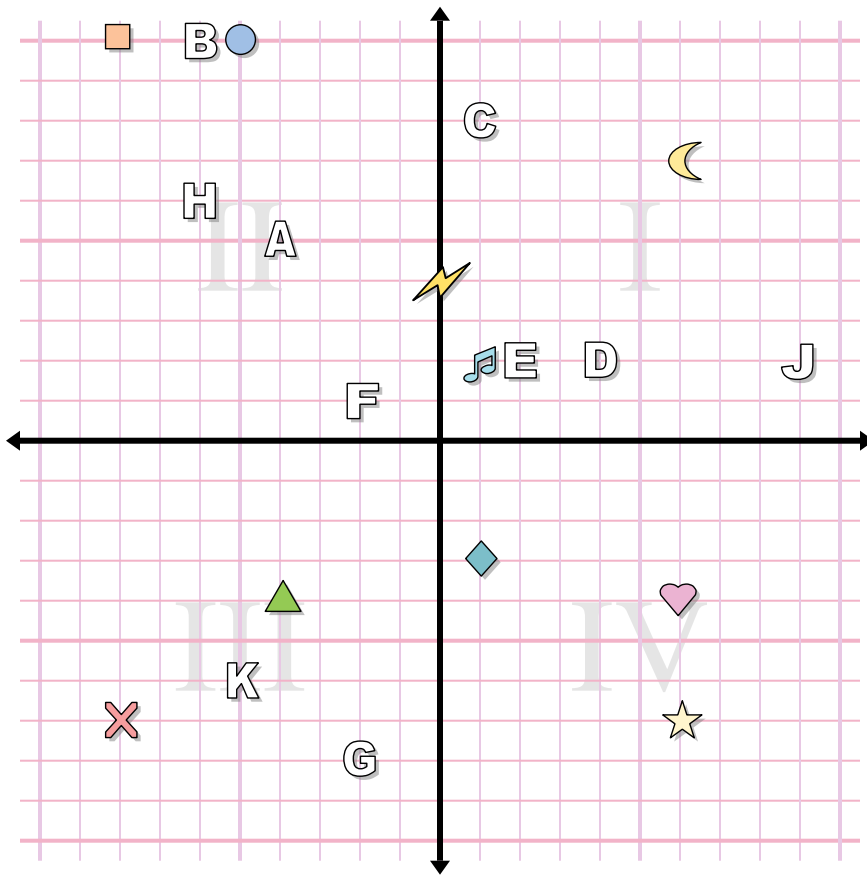
1. _____
2. _____
3. _____
4. _____
5. _____
6. _____
7. _____
8. _____
9. _____
10. _____
11. _____
12. _____
13. _____
14. _____
15. _____
16. _____
17. _____
18. _____
19. _____
20. _____

Determina le coordinate di ogni figura.

- | | |
|---------------|-------------|
| 1) star | 2) cross |
| 3) music note | 4) square |
| 5) lightning | 6) moon |
| 7) circle | 8) heart |
| 9) triangle | 10) diamond |

Indica quale lettera corrisponde a ciascuna coordinata.

- | | |
|---------------|---------------|
| 11) (-4 . 5) | 12) (-2 . 1) |
| 13) (-5 . -6) | 14) (-6 . 6) |
| 15) (9 . 2) | 16) (4 . 2) |
| 17) (1 . 8) | 18) (-6 . 10) |
| 19) (2 . 2) | 20) (-2 . -8) |



Risposte

1. (6 . -7)
2. (-8 . -7)
3. (1 . 2)
4. (-8 . 10)
5. (0 . 4)
6. (6 . 7)
7. (-5 . 10)
8. (6 . -4)
9. (-4 . -4)
10. (1 . -3)
11. A
12. F
13. K
14. H
15. J
16. D
17. C
18. B
19. E
20. G

Determina le coordinate di ogni figura.

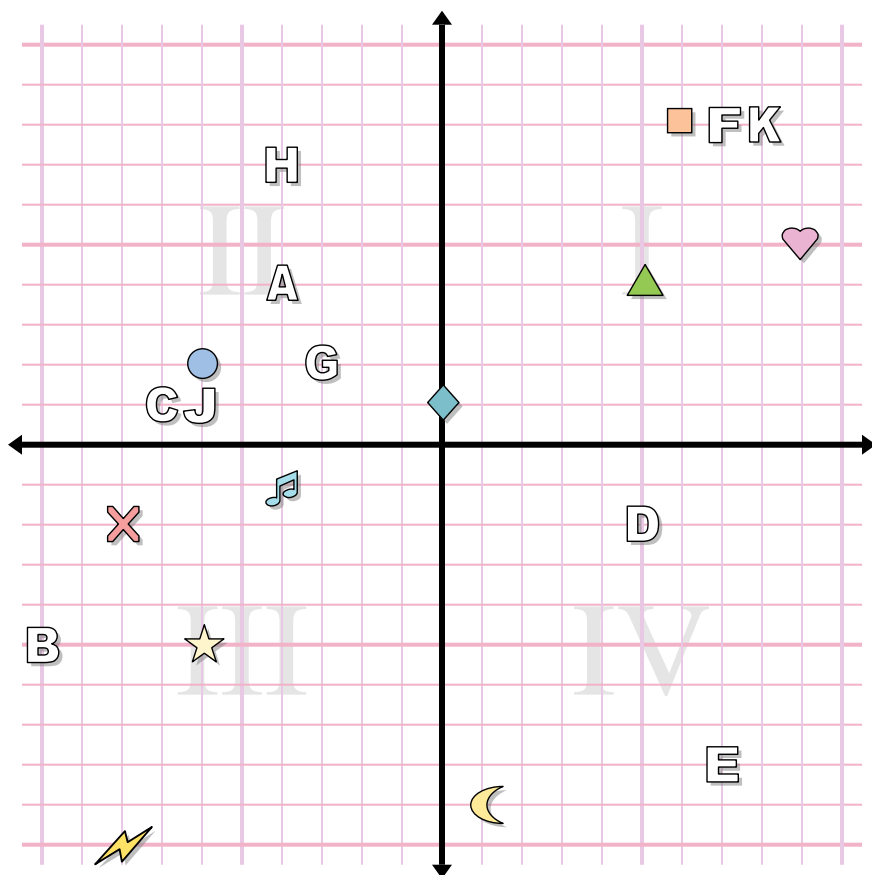
- | | |
|---------------|-------------|
| 1) star | 2) cross |
| 3) music note | 4) square |
| 5) lightning | 6) moon |
| 7) circle | 8) heart |
| 9) triangle | 10) diamond |

Indica quale lettera corrisponde a ciascuna coordinata.

- | | |
|---------------|---------------|
| 11) (-4 . 5) | 12) (-2 . 1) |
| 13) (-5 . -6) | 14) (-6 . 6) |
| 15) (9 . 2) | 16) (4 . 2) |
| 17) (1 . 8) | 18) (-6 . 10) |
| 19) (2 . 2) | 20) (-2 . -8) |



Risposte



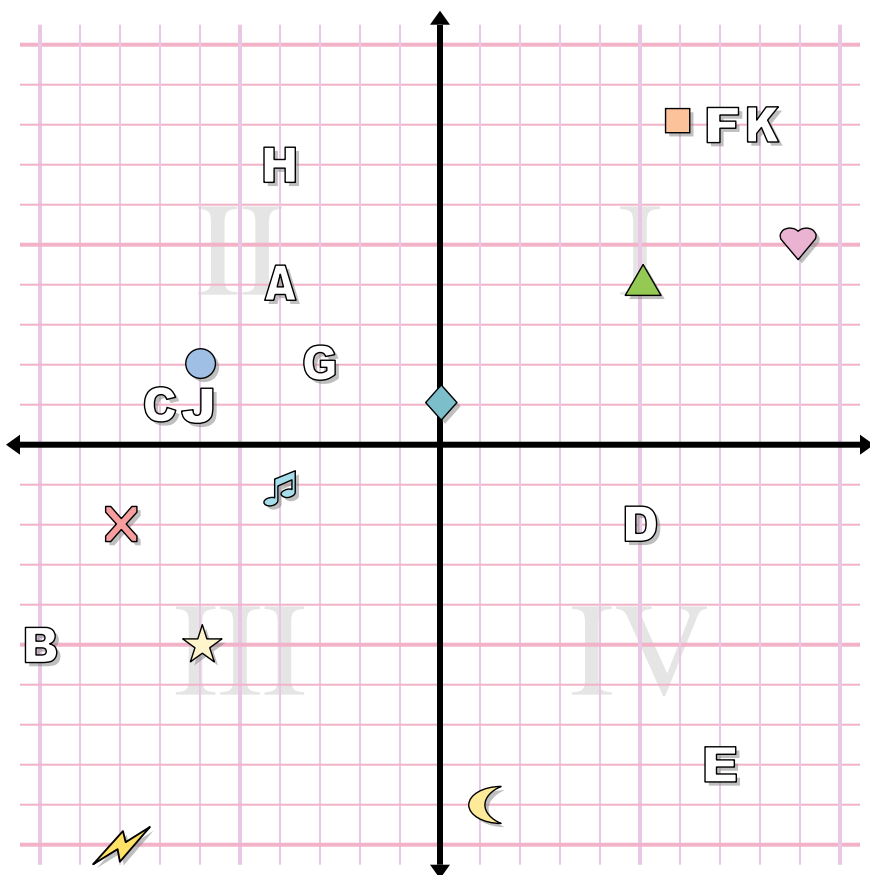
1. _____
2. _____
3. _____
4. _____
5. _____
6. _____
7. _____
8. _____
9. _____
10. _____
11. _____
12. _____
13. _____
14. _____
15. _____
16. _____
17. _____
18. _____
19. _____
20. _____

Determina le coordinate di ogni figura.

- | | |
|---------------|-------------|
| 1) music note | 2) triangle |
| 3) cross | 4) heart |
| 5) lightning | 6) square |
| 7) circle | 8) diamond |
| 9) moon | 10) star |

Indica quale lettera corrisponde a ciascuna coordinata.

- | | |
|----------------|--------------|
| 11) (-3 . 2) | 12) (8 . 8) |
| 13) (-6 . 1) | 14) (7 . -8) |
| 15) (5 . -2) | 16) (-4 . 4) |
| 17) (-10 . -5) | 18) (-7 . 1) |
| 19) (7 . 8) | 20) (-4 . 7) |



Risposte

1. (-4 . -1)
2. (5 . 4)
3. (-8 . -2)
4. (9 . 5)
5. (-8 . -10)
6. (6 . 8)
7. (-6 . 2)
8. (0 . 1)
9. (1 . -9)
10. (-6 . -5)
11. G
12. K
13. J
14. E
15. D
16. A
17. B
18. C
19. F
20. H

Determina le coordinate di ogni figura.

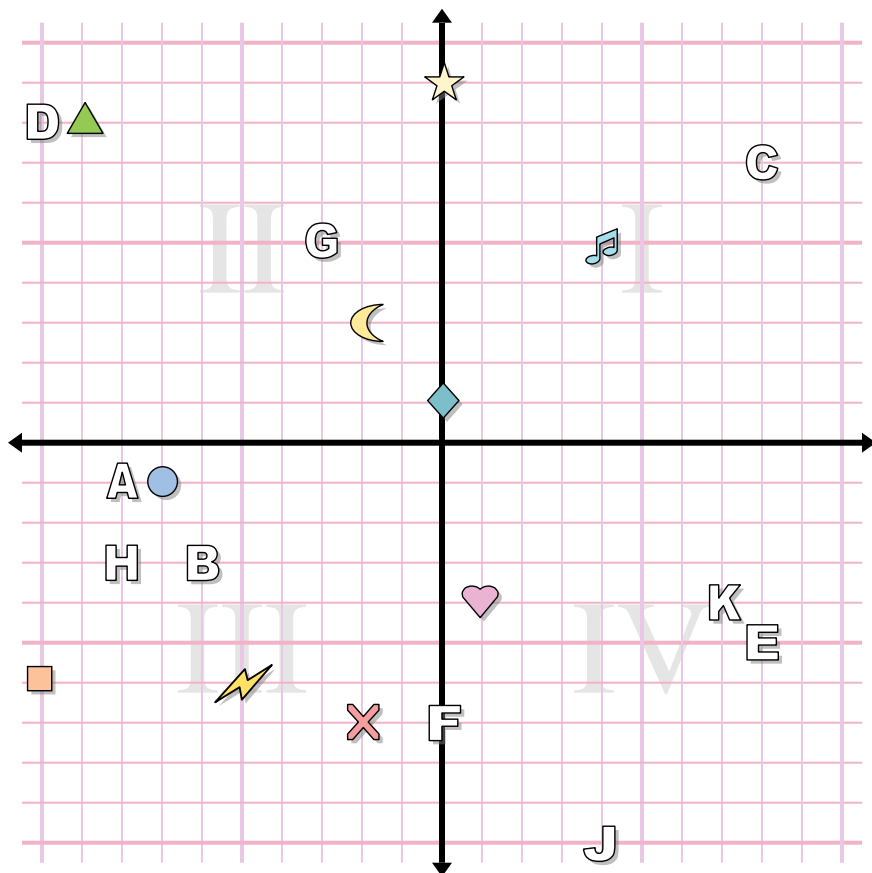
- | | |
|---------------|-------------|
| 1) music note | 2) triangle |
| 3) cross | 4) heart |
| 5) lightning | 6) square |
| 7) circle | 8) diamond |
| 9) moon | 10) star |

Indica quale lettera corrisponde a ciascuna coordinata.

- | | |
|----------------|--------------|
| 11) (-3 . 2) | 12) (8 . 8) |
| 13) (-6 . 1) | 14) (7 . -8) |
| 15) (5 . -2) | 16) (-4 . 4) |
| 17) (-10 . -5) | 18) (-7 . 1) |
| 19) (7 . 8) | 20) (-4 . 7) |



Risposte



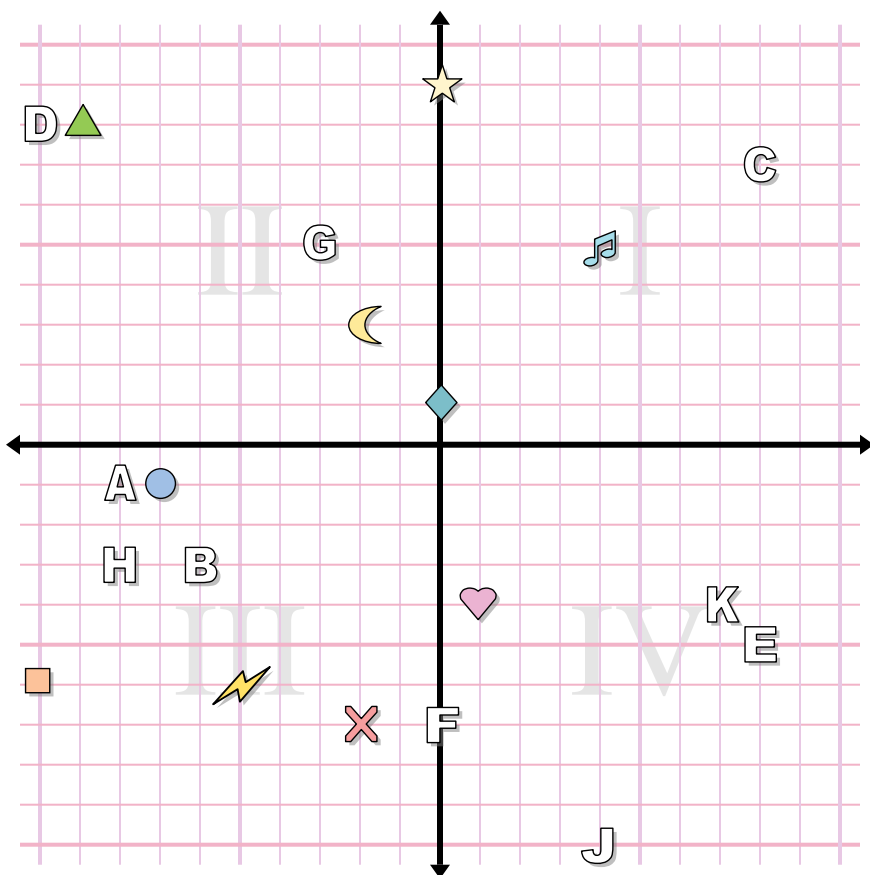
1. _____
2. _____
3. _____
4. _____
5. _____
6. _____
7. _____
8. _____
9. _____
10. _____
11. _____
12. _____
13. _____
14. _____
15. _____
16. _____
17. _____
18. _____
19. _____
20. _____

Determina le coordinate di ogni figura.

- | | |
|-------------|---------------|
| 1) moon | 2) music note |
| 3) triangle | 4) square |
| 5) circle | 6) cross |
| 7) heart | 8) diamond |
| 9) star | 10) lightning |

Indica quale lettera corrisponde a ciascuna coordinata.

- | | |
|---------------|---------------|
| 11) (-6 . -3) | 12) (-10 . 8) |
| 13) (8 . -5) | 14) (4 . -10) |
| 15) (-3 . 5) | 16) (-8 . -3) |
| 17) (0 . -7) | 18) (7 . -4) |
| 19) (-8 . -1) | 20) (8 . 7) |



Risposte

1. **(-2 . 3)**
2. **(4 . 5)**
3. **(-9 . 8)**
4. **(-10 . -6)**
5. **(-7 . -1)**
6. **(-2 . -7)**
7. **(1 . -4)**
8. **(0 . 1)**
9. **(0 . 9)**
10. **(-5 . -6)**
11. **B**
12. **D**
13. **E**
14. **J**
15. **G**
16. **H**
17. **F**
18. **K**
19. **A**
20. **C**

Determina le coordinate di ogni figura.

- | | |
|-------------|---------------|
| 1) moon | 2) music note |
| 3) triangle | 4) square |
| 5) circle | 6) cross |
| 7) heart | 8) diamond |
| 9) star | 10) lightning |

Indica quale lettera corrisponde a ciascuna coordinata.

- | | |
|---------------|---------------|
| 11) (-6 . -3) | 12) (-10 . 8) |
| 13) (8 . -5) | 14) (4 . -10) |
| 15) (-3 . 5) | 16) (-8 . -3) |
| 17) (0 . -7) | 18) (7 . -4) |
| 19) (-8 . -1) | 20) (8 . 7) |