




Misura le barre qui sotto (in centimetri) e crea un grafico a linee basandoti sulle informazioni

Risposte



- 1. _____
- 2. _____
- 3. _____
- 4. _____
- 5. _____
- 6. _____
- 7. _____
- 8. _____
- 9. _____
- 10. _____
- 11. _____
- 12. _____
- 13. _____
- 14. _____
- 15. _____

Line Plot




Misura le barre qui sotto (in centimetri) e crea un grafico a linee basandoti sulle informazioni

1)  6

2)  6

3)  9

4)  6

5)  6


6)  6

7)  6

8)  9

9)  9

10)  9

11)  6

12)  6

13)  2

14)  9

15)  3

Risposte

1. 6

2. 6

3. 9

4. 6

5. 6

6. 6

7. 6

8. 9

9. 9

10. 9

11. 6

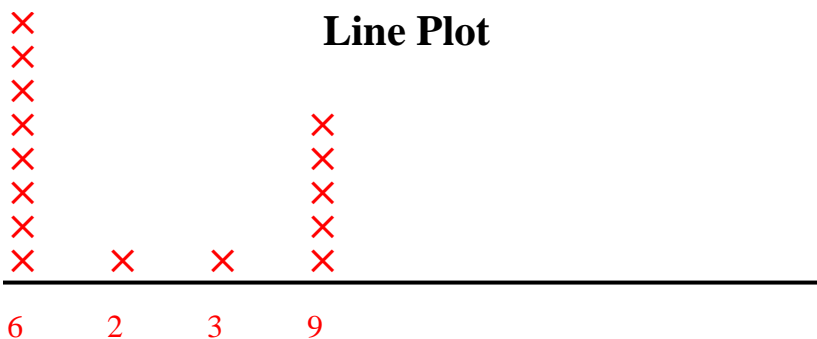
12. 6

13. 2

14. 9

15. 3

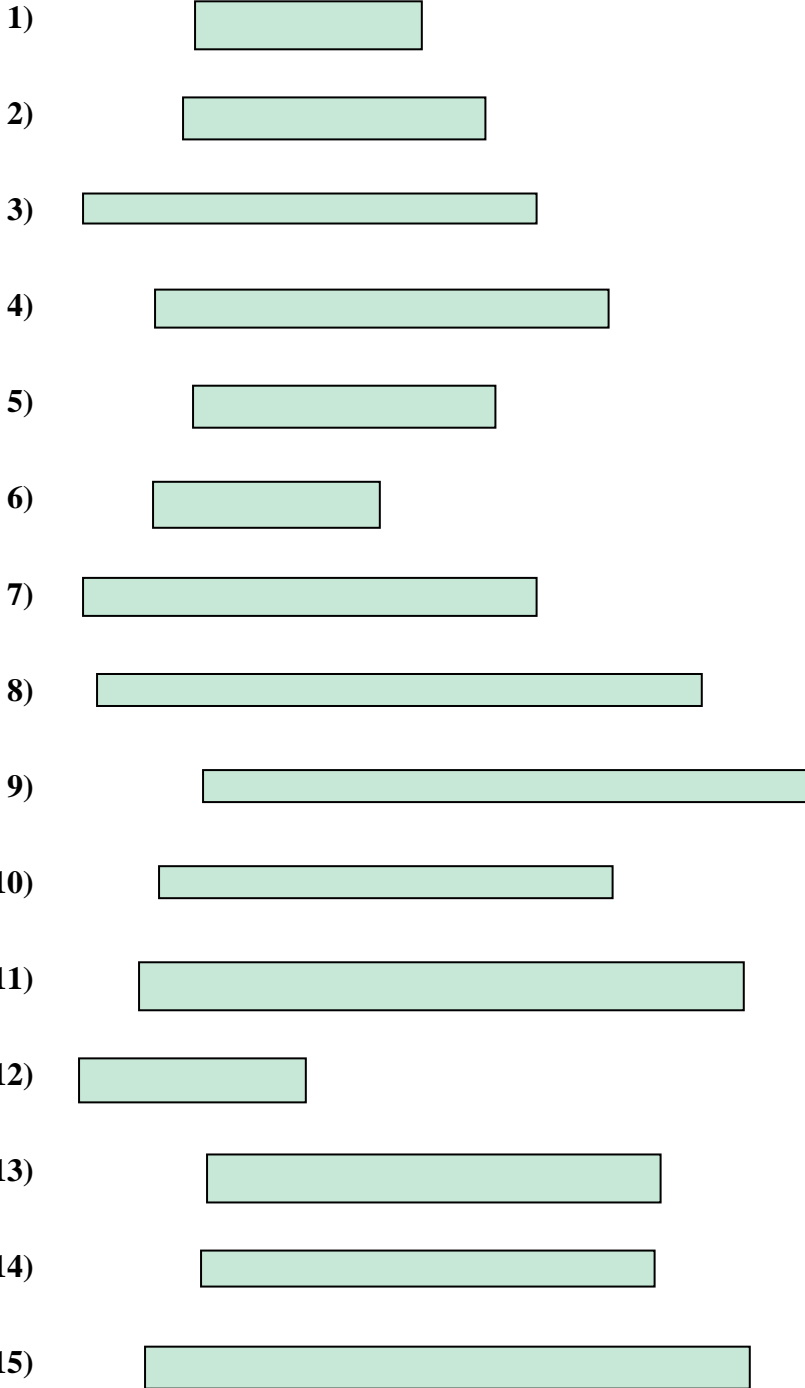
Line Plot





Misura le barre qui sotto (in centimetri) e crea un grafico a linee basandoti sulle informazioni

Risposte



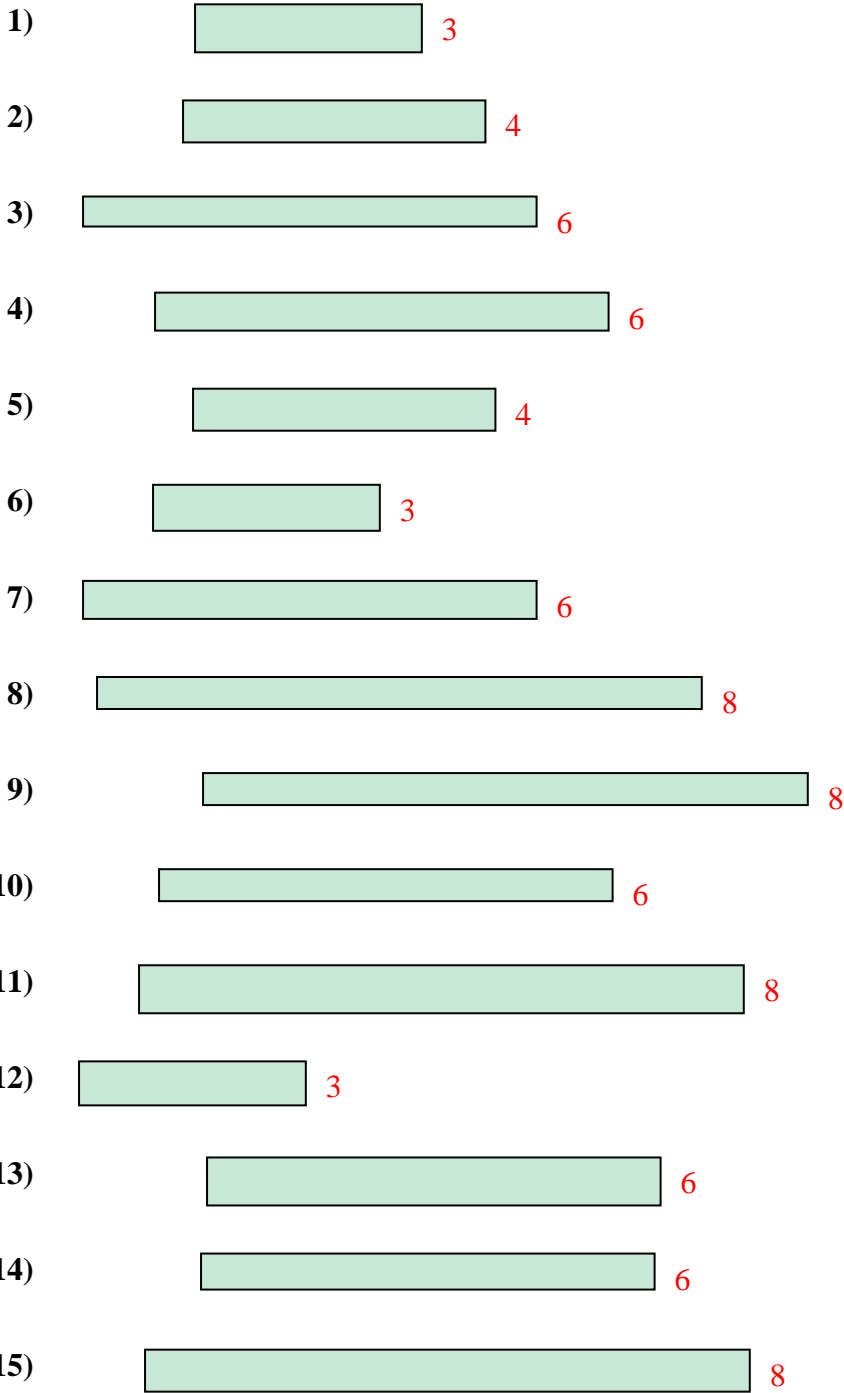
- 1. _____
- 2. _____
- 3. _____
- 4. _____
- 5. _____
- 6. _____
- 7. _____
- 8. _____
- 9. _____
- 10. _____
- 11. _____
- 12. _____
- 13. _____
- 14. _____
- 15. _____

Line Plot



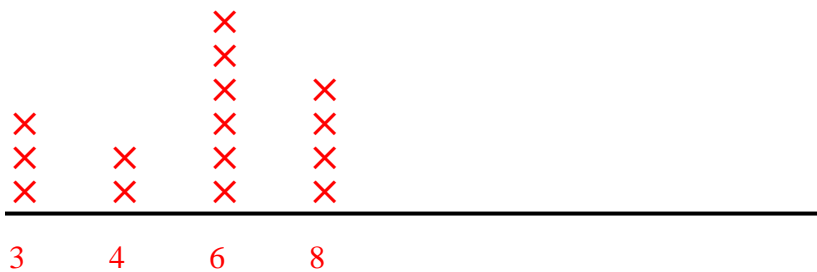
Misura le barre qui sotto (in centimetri) e crea un grafico a linee basandoti sulle informazioni

Risposte



- 1. 3
- 2. 4
- 3. 6
- 4. 6
- 5. 4
- 6. 3
- 7. 6
- 8. 8
- 9. 8
- 10. 6
- 11. 8
- 12. 3
- 13. 6
- 14. 6
- 15. 8

Line Plot






Misura le barre qui sotto (in centimetri) e crea un grafico a linee basandoti sulle informazioni


Risposte



1. _____



2. _____



3. _____



4. _____



5. _____



6. _____



7. _____



8. _____



9. _____



10. _____



11. _____



12. _____



13. _____



14. _____

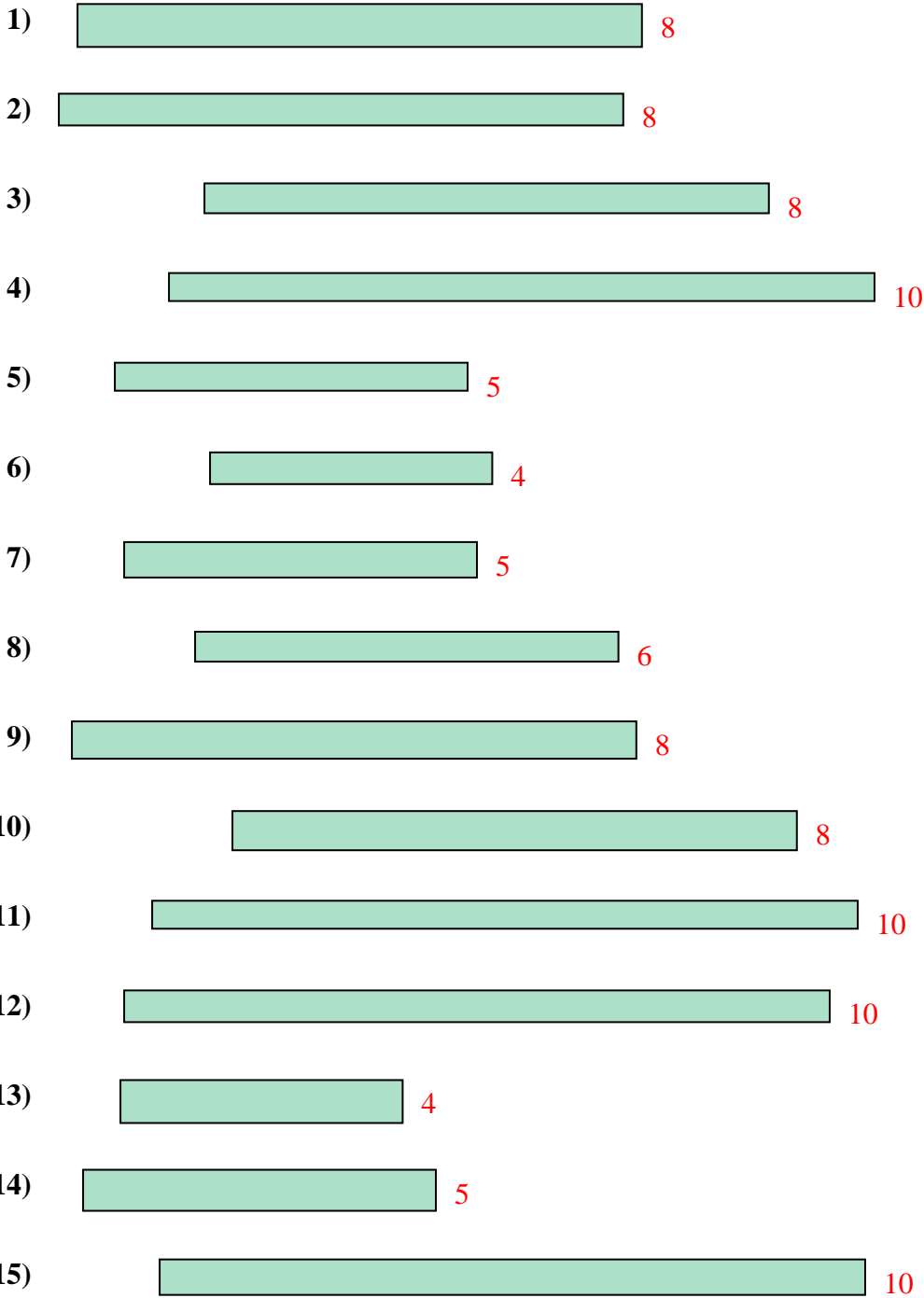


15. _____

Line Plot



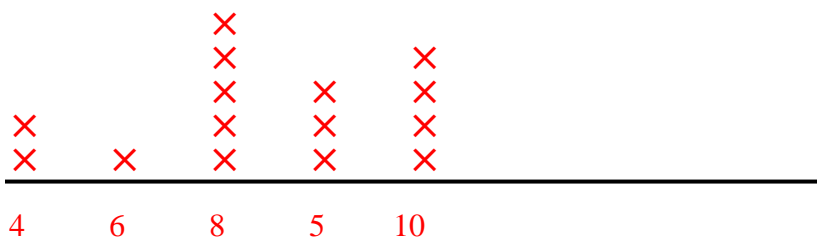
Misura le barre qui sotto (in centimetri) e crea un grafico a linee basandoti sulle informazioni



Risposte

- 1. 8
- 2. 8
- 3. 8
- 4. 10
- 5. 5
- 6. 4
- 7. 5
- 8. 6
- 9. 8
- 10. 8
- 11. 10
- 12. 10
- 13. 4
- 14. 5
- 15. 10

Line Plot





Misura le barre qui sotto (in centimetri) e crea un grafico a linee basandoti sulle informazioni

Risposte



1. _____



2. _____



3. _____




4. _____



5. _____



6. _____



7. _____



8. _____



9. _____



10. _____



11. _____



12. _____



13. _____



14. _____



15. _____

Line Plot



Misura le barre qui sotto (in centimetri) e crea un grafico a linee basandoti sulle informazioni

Risposte



1. 4



2. 2



3. 10



4. 2



5. 2



6. 4



7. 2



8. 7



9. 10



10. 7



11. 6



12. 10



13. 2

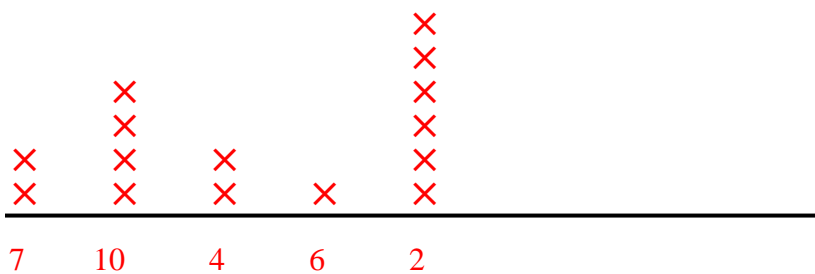


14. 10



15. 2

Line Plot





Misura le barre qui sotto (in centimetri) e crea un grafico a linee basandoti sulle informazioni

Risposte



1. _____



2. _____



3. _____



4. _____



5. _____



6. _____



7. _____



8. _____



9. _____



10. _____



11. _____



12. _____



13. _____



14. _____



15. _____

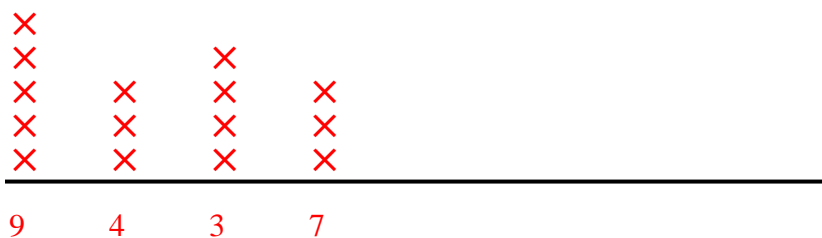
Line Plot



Misura le barre qui sotto (in centimetri) e crea un grafico a linee basandoti sulle informazioni



Line Plot



Risposte

1. 9
2. 3
3. 3
4. 3
5. 7
6. 9
7. 3
8. 9
9. 4
10. 9
11. 7
12. 7
13. 4
14. 9
15. 4



Misura le barre qui sotto (in centimetri) e crea un grafico a linee basandoti sulle informazioni

Risposte



1. _____



2. _____



3. _____



4. _____



5. _____



6. _____



7. _____



8. _____



9. _____



10. _____



11. _____



12. _____



13. _____



14. _____


















15. _____

Line Plot



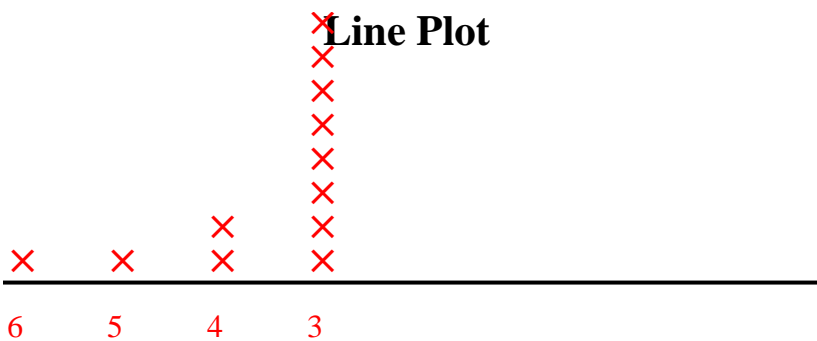
Misura le barre qui sotto (in centimetri) e crea un grafico a linee basandoti sulle informazioni

- 1)  3
- 2)  3
- 3)  3
- 4)  3
- 5)  4
- 6)  3
- 7)  3
- 8)  5
- 9)  3
- 10)  3
- 11)  6
- 12)  3
- 13)  3
- 14)  3
- 15)  4

Risposte

- 1. 3
- 2. 3
- 3. 3
- 4. 3
- 5. 4
- 6. 3
- 7. 3
- 8. 5
- 9. 3
- 10. 3
- 11. 6
- 12. 3
- 13. 3
- 14. 3
- 15. 4

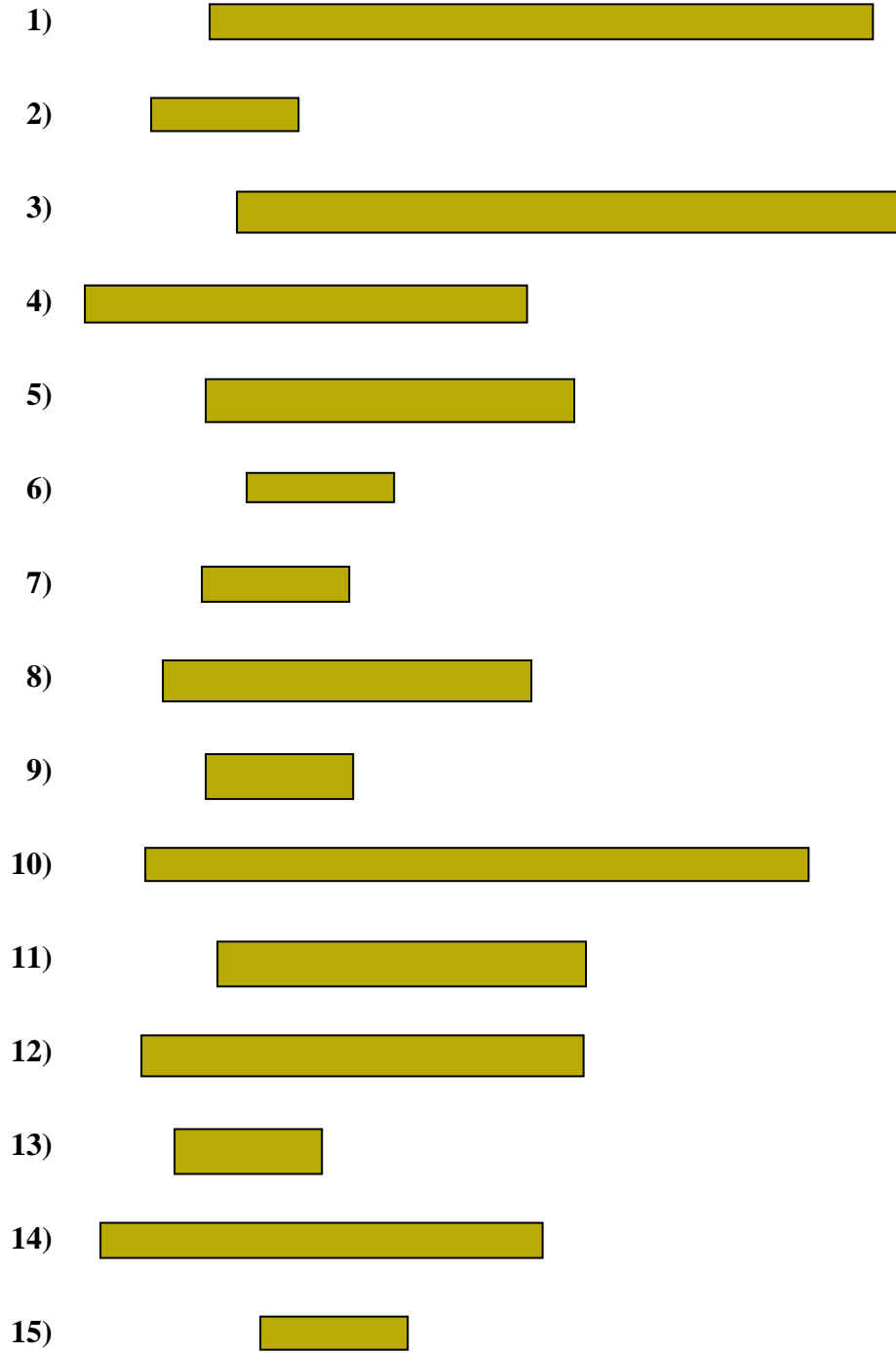
Line Plot





Misura le barre qui sotto (in centimetri) e crea un grafico a linee basandoti sulle informazioni

Risposte



1. _____

2. _____

3. _____

4. _____

5. _____

6. _____

7. _____

8. _____

9. _____

10. _____

11. _____

12. _____

13. _____

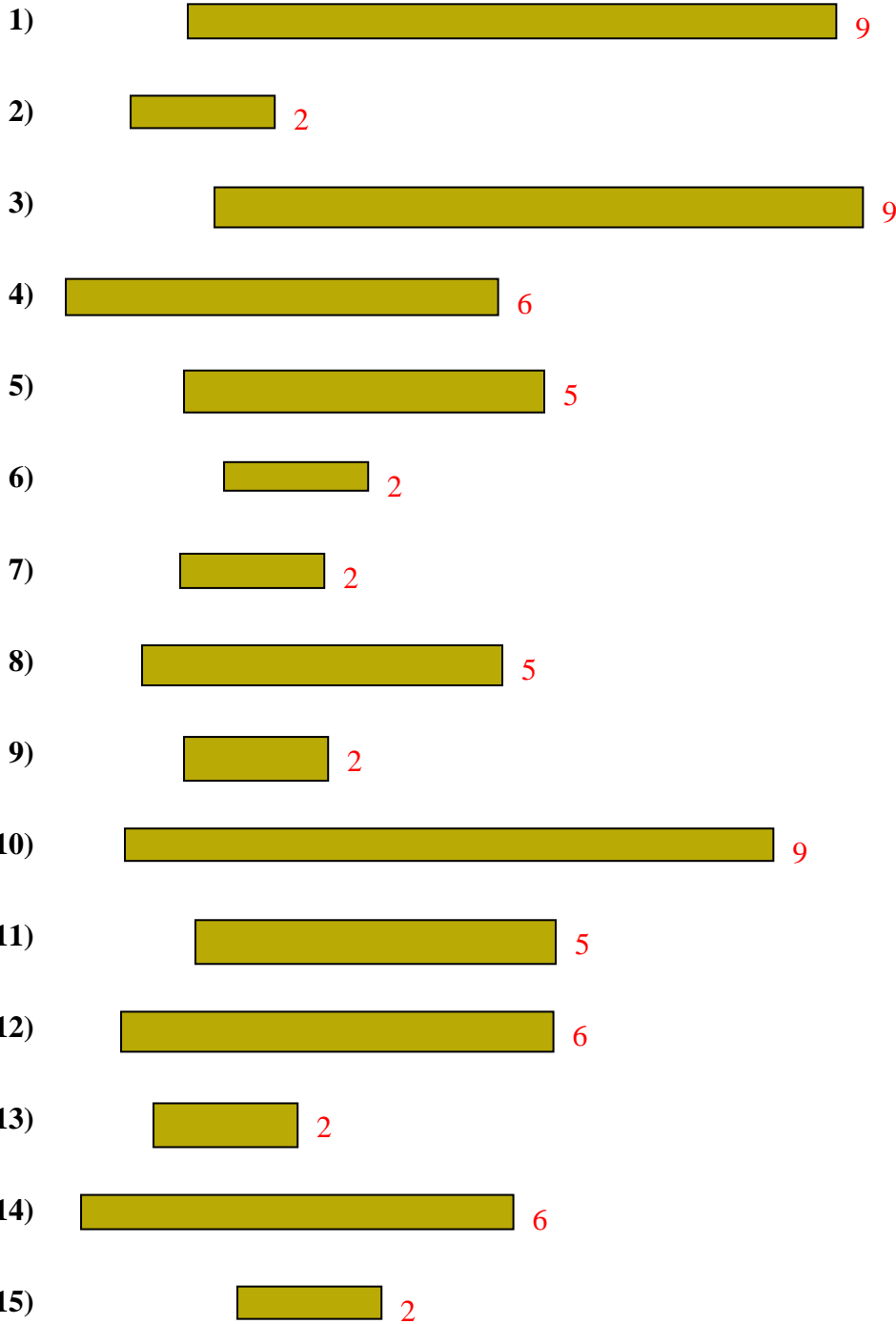
14. _____

15. _____

Line Plot



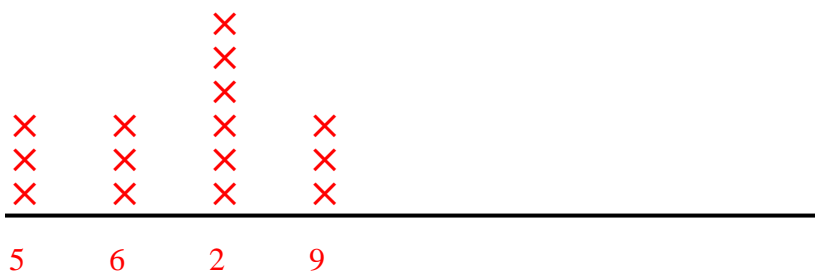
Misura le barre qui sotto (in centimetri) e crea un grafico a linee basandoti sulle informazioni



Risposte

- 1. 9
- 2. 2
- 3. 9
- 4. 6
- 5. 5
- 6. 2
- 7. 2
- 8. 5
- 9. 2
- 10. 9
- 11. 5
- 12. 6
- 13. 2
- 14. 6
- 15. 2

Line Plot






Misura le barre qui sotto (in centimetri) e crea un grafico a linee basandoti sulle informazioni

Risposte



1. _____



2. _____




3. _____




4. _____



5. _____



6. _____



7. _____



8. _____



9. _____



10. _____



11. _____



12. _____



13. _____



14. _____



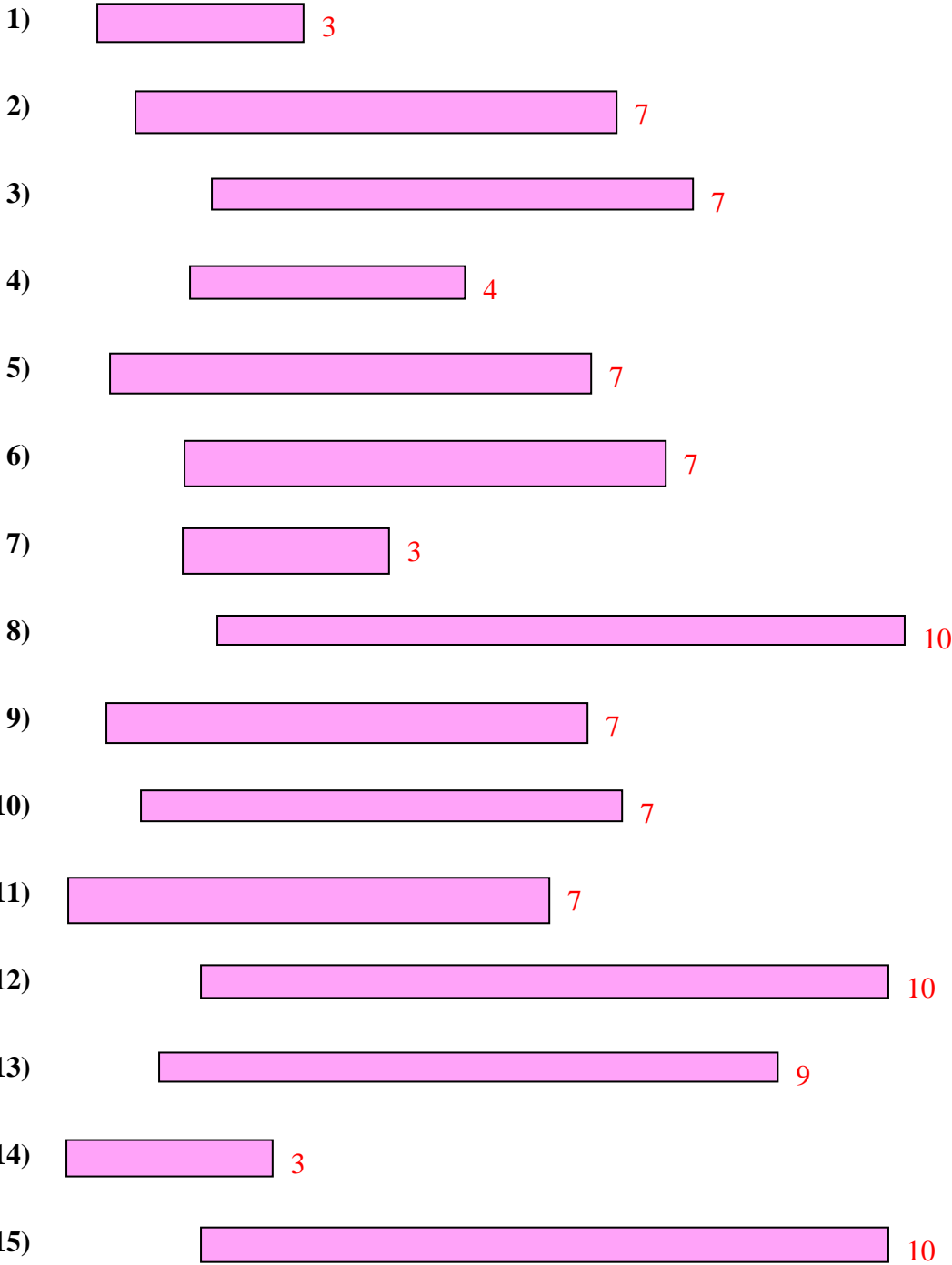
15. _____

Line Plot



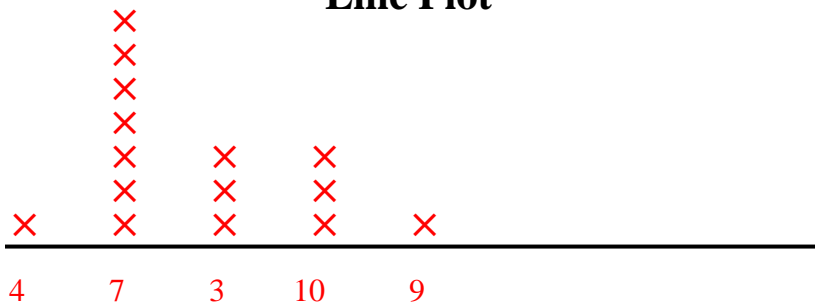
Misura le barre qui sotto (in centimetri) e crea un grafico a linee basandoti sulle informazioni

Risposte



- 1. 3
- 2. 7
- 3. 7
- 4. 4
- 5. 7
- 6. 7
- 7. 3
- 8. 10
- 9. 7
- 10. 7
- 11. 7
- 12. 10
- 13. 9
- 14. 3
- 15. 10

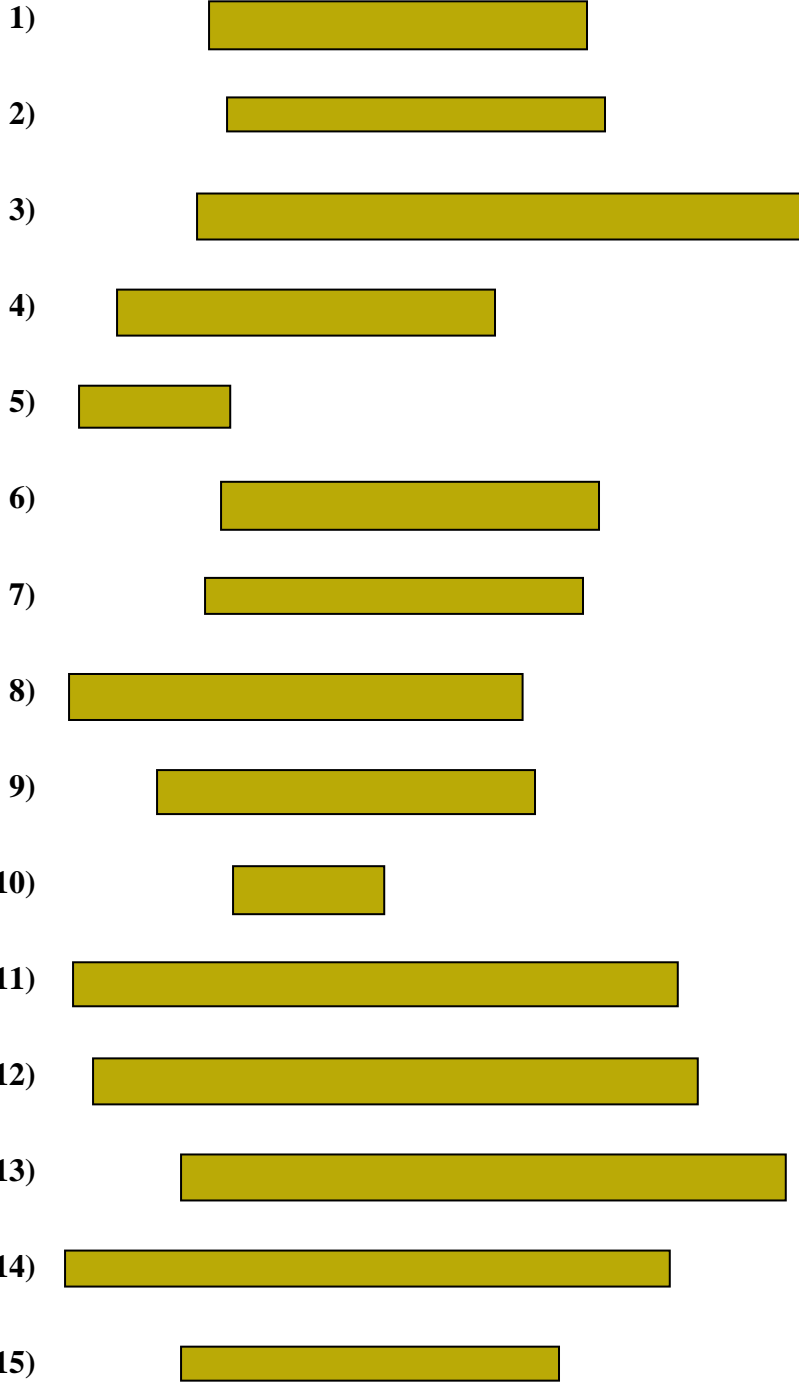
Line Plot





Misura le barre qui sotto (in centimetri) e crea un grafico a linee basandoti sulle informazioni

Risposte

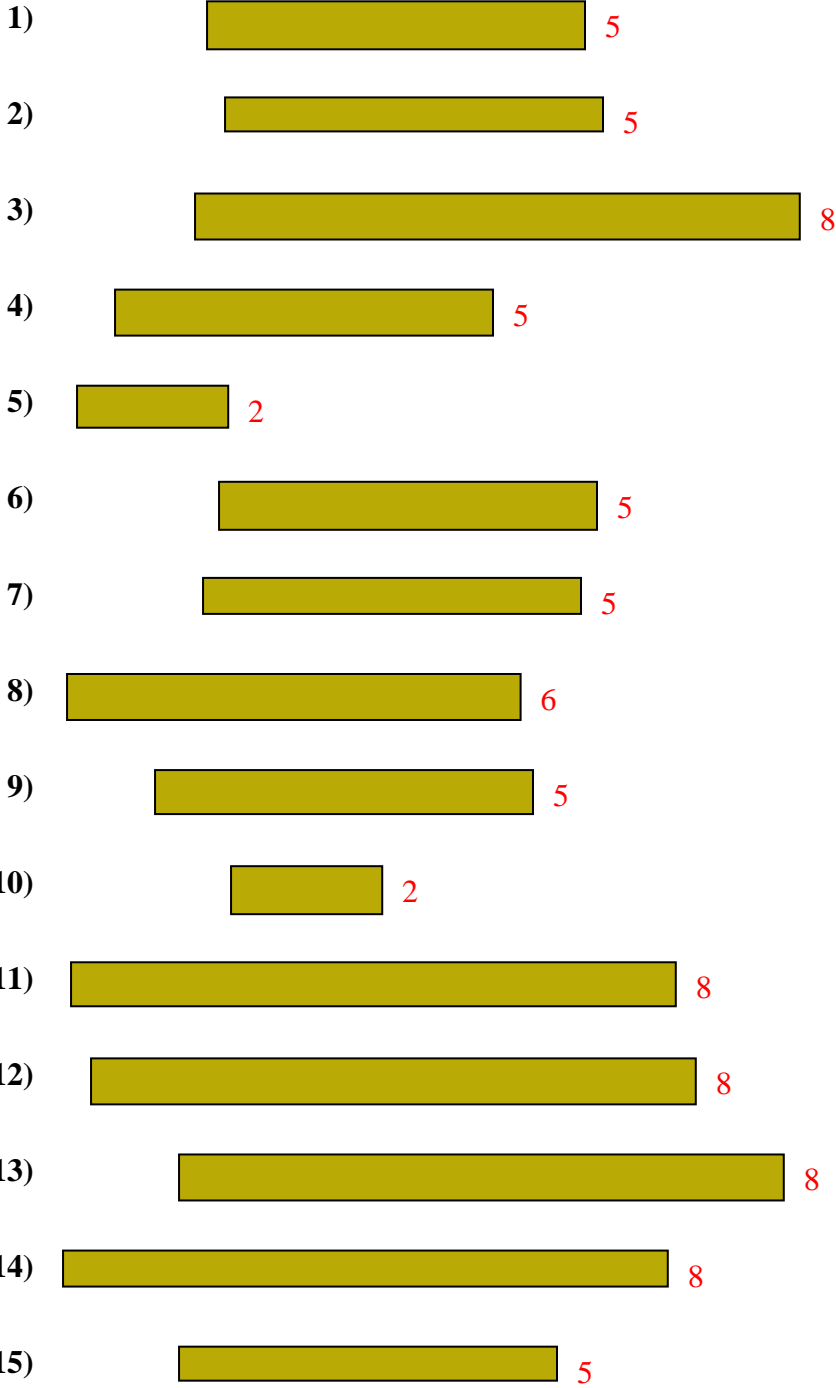


1. _____
 2. _____
 3. _____
 4. _____
 5. _____
 6. _____
 7. _____
 8. _____
 9. _____
 10. _____
 11. _____
 12. _____
 13. _____
 14. _____
 15. _____

Line Plot



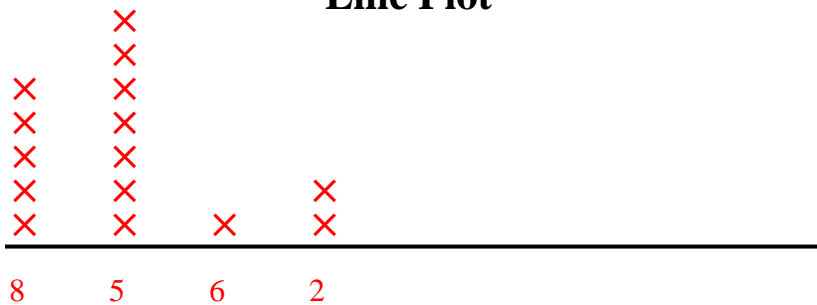
Misura le barre qui sotto (in centimetri) e crea un grafico a linee basandoti sulle informazioni



Risposte

- 1. 5
- 2. 5
- 3. 8
- 4. 5
- 5. 2
- 6. 5
- 7. 5
- 8. 6
- 9. 5
- 10. 2
- 11. 8
- 12. 8
- 13. 8
- 14. 8
- 15. 5

Line Plot






Misura le barre qui sotto (in centimetri) e crea un grafico a linee basandoti sulle informazioni

Risposte



1. _____



2. _____



3. _____



4. _____



5. _____



6. _____



7. _____



8. _____



9. _____



10. _____



11. _____



12. _____



13. _____



14. _____

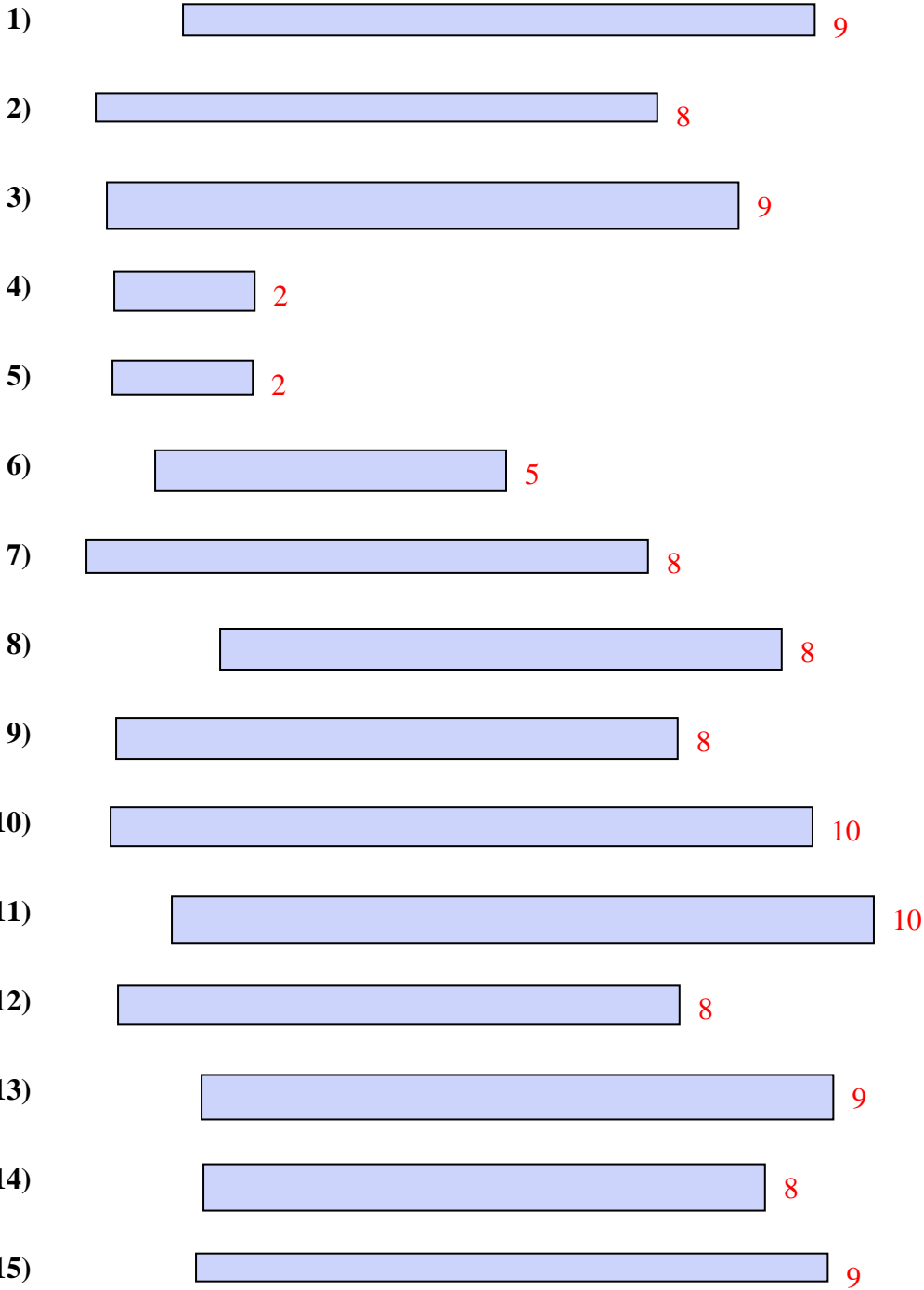


15. _____

Line Plot



Misura le barre qui sotto (in centimetri) e crea un grafico a linee basandoti sulle informazioni



Risposte

- 1. 9
- 2. 8
- 3. 9
- 4. 2
- 5. 2
- 6. 5
- 7. 8
- 8. 8
- 9. 8
- 10. 10
- 11. 10
- 12. 8
- 13. 9
- 14. 8
- 15. 9

Line Plot

