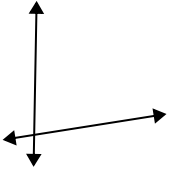




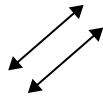
Definisci 'parallele', 'perp'(perpendicolare) o 'inter'(intersezione) per descrivere le linee.

Risposte

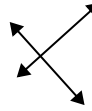
1)



2)



3)



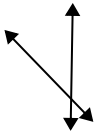
1. _____

2. _____

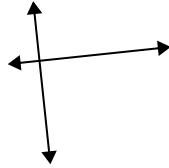
3. _____

4. _____

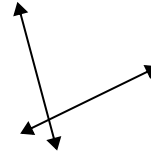
4)



5)



6)



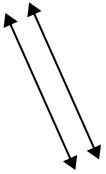
5. _____

6. _____

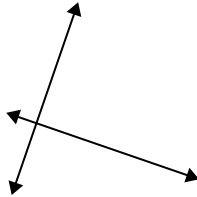
7. _____

8. _____

7)



8)



9)



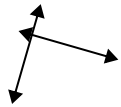
9. _____

10. _____

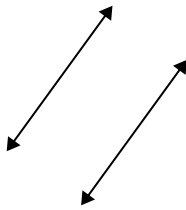
11. _____

12. _____

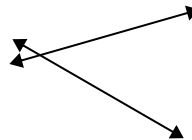
10)



11)



12)

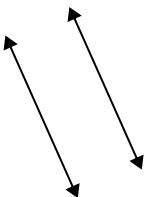


13. _____

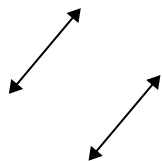
14. _____

15. _____

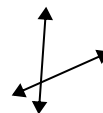
13)



14)



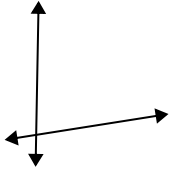
15)



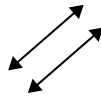


Definisci 'parallele', 'perp'(perpendicolare) o 'inter'(intersezione) per descrivere le linee.

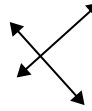
1)



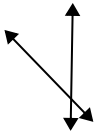
2)



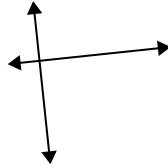
3)



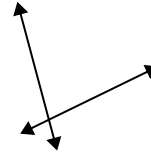
4)



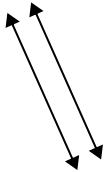
5)



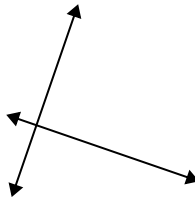
6)



7)



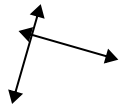
8)



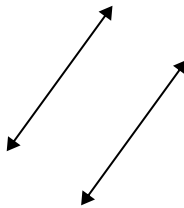
9)



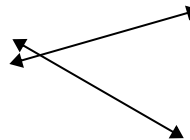
10)



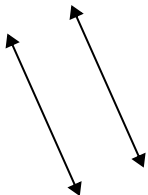
11)



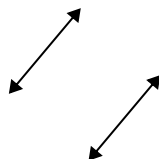
12)



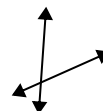
13)



14)



15)



Risposte

1. incidenti

2. parallele

3. perpendicolari e incidenti

4. incidenti

5. perpendicolari e incidenti

6. incidenti

7. parallele

8. perpendicolari e incidenti

9. perpendicolari e incidenti

10. perpendicolari e incidenti

11. parallele

12. incidenti

13. parallele

14. parallele

15. incidenti