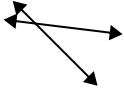


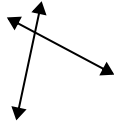


Definisci 'parallele', 'perp'(perpendicolare) o 'inter'(intersezione) per descrivere le linee.

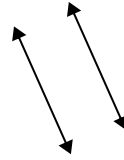
1)



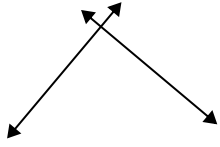
2)



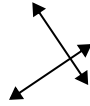
3)



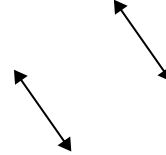
4)



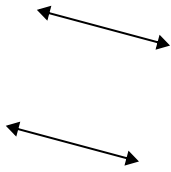
5)



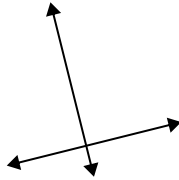
6)



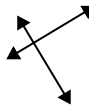
7)



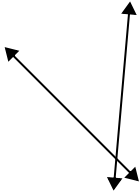
8)



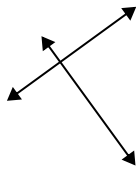
9)



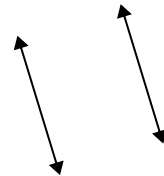
10)



11)




12)



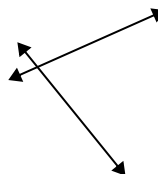
13)



14)



15)



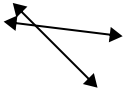
Risposte

- 1. _____
- 2. _____
- 3. _____
- 4. _____
- 5. _____
- 6. _____
- 7. _____
- 8. _____
- 9. _____
- 10. _____
- 11. _____
- 12. _____
- 13. _____
- 14. _____
- 15. _____

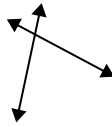


Definisci 'parallele', 'perp'(perpendicolare) o 'inter'(intersezione) per descrivere le linee.

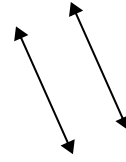
1)



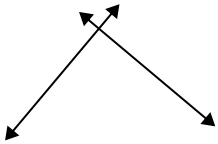
2)



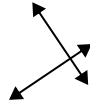
3)



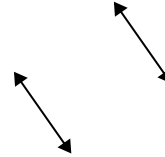
4)



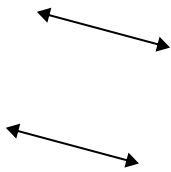
5)



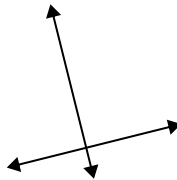
6)



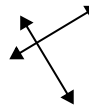
7)



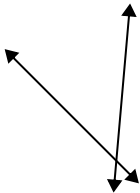
8)



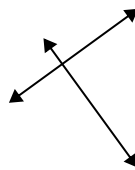
9)



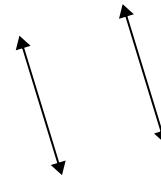
10)



11)




12)



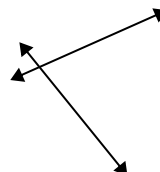
13)



14)



15)



Risposte

1. incidenti

2. incidenti

3. parallele

4. perpendicolari e incidenti

5. perpendicolari e incidenti

6. parallele

7. parallele

8. perpendicolari e incidenti

9. perpendicolari e incidenti

10. incidenti

11. perpendicolari e incidenti

12. parallele

13. incidenti

14. parallele

15. incidenti