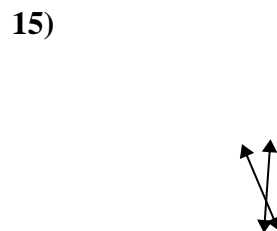
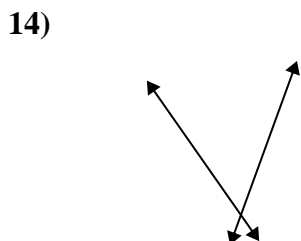
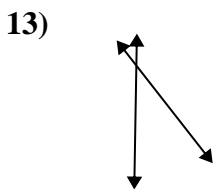
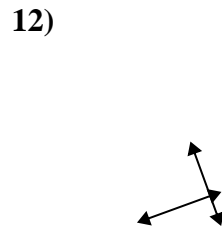
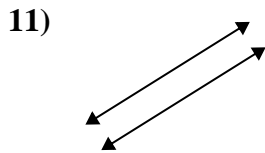
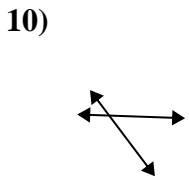
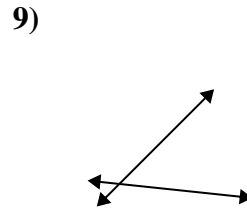
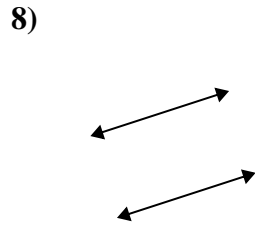
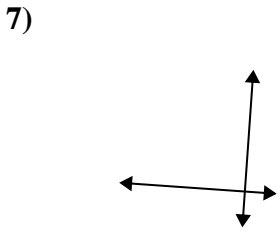
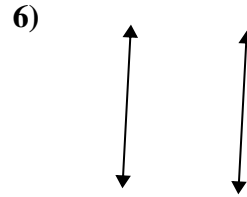
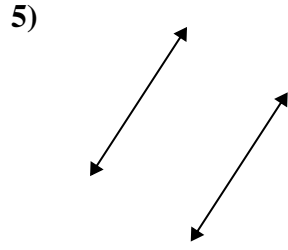
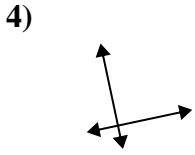
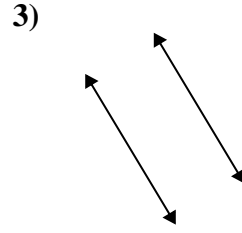
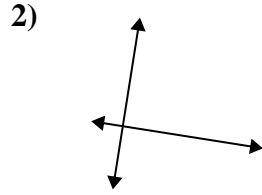
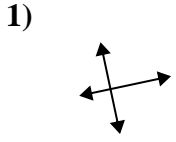




Definisci 'parallele', 'perp'(perpendicolare) o 'inter'(intersezione) per descrivere le linee.

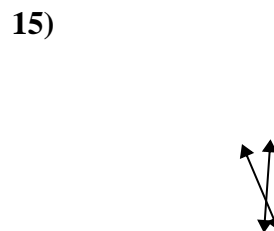
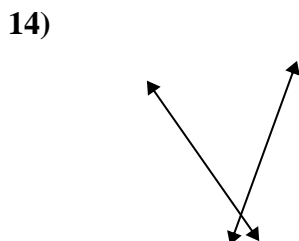
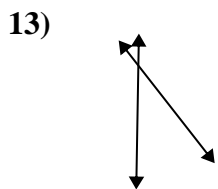
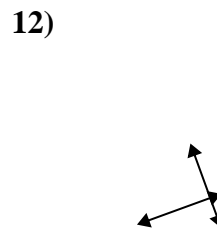
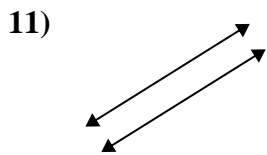
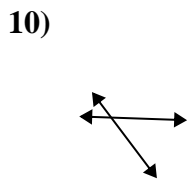
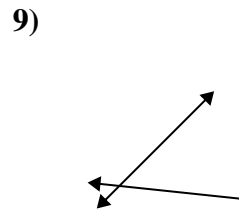
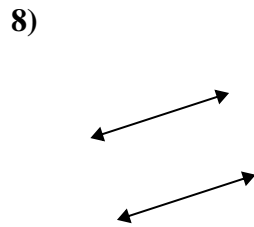
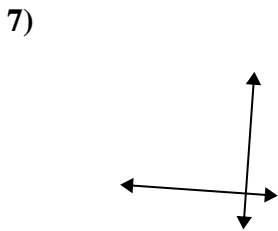
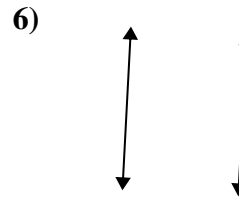
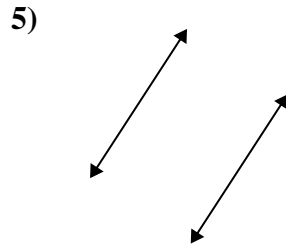
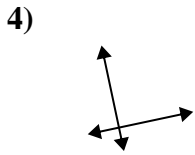
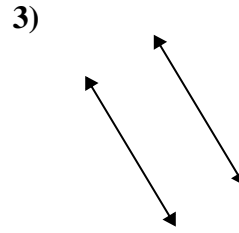
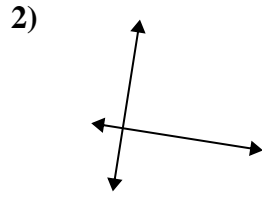
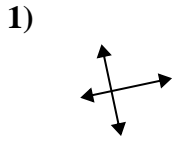
**Risposte**



1. \_\_\_\_\_
2. \_\_\_\_\_
3. \_\_\_\_\_
4. \_\_\_\_\_
5. \_\_\_\_\_
6. \_\_\_\_\_
7. \_\_\_\_\_
8. \_\_\_\_\_
9. \_\_\_\_\_
10. \_\_\_\_\_
11. \_\_\_\_\_
12. \_\_\_\_\_
13. \_\_\_\_\_
14. \_\_\_\_\_
15. \_\_\_\_\_



Definisci 'parallele', 'perp'(perpendicolare) o 'inter'(intersezione) per descrivere le linee.



**Risposte**

1. perpendicolari e incidenti

2. perpendicolari e incidenti

3. parallele

4. perpendicolari e incidenti

5. parallele

6. parallele

7. perpendicolari e incidenti

8. parallele

9. incidenti

10. incidenti

11. parallele

12. perpendicolari e incidenti

13. incidenti

14. incidenti

15. incidenti