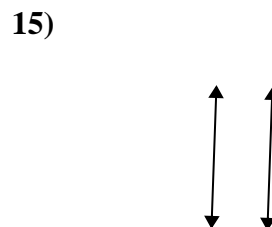
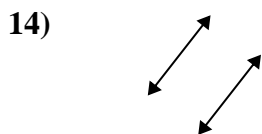
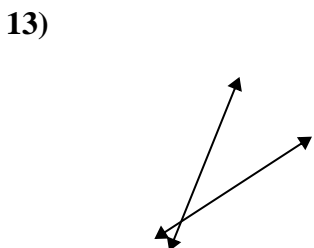
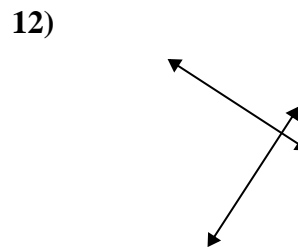
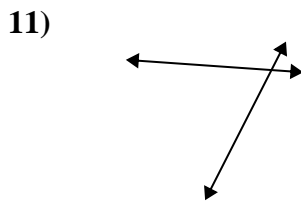
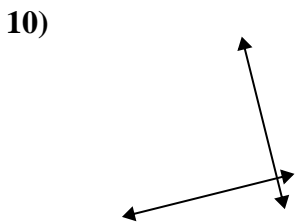
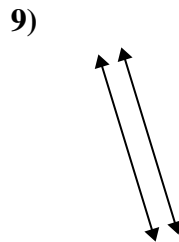
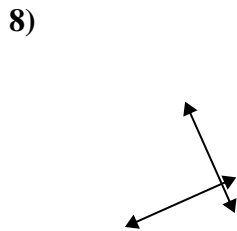
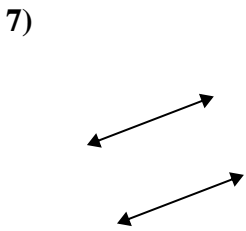
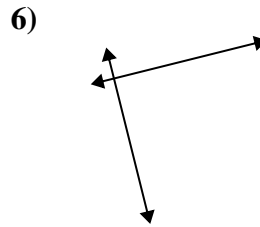
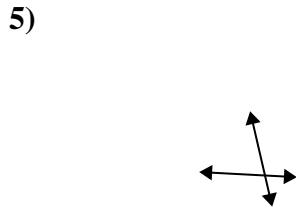
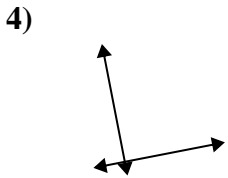
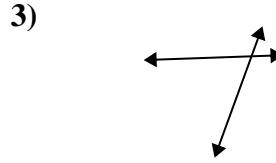
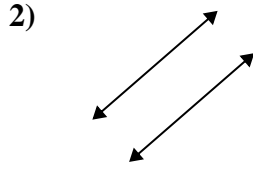
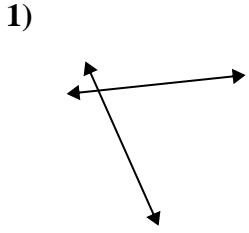




Definisci 'parallele', 'perp'(perpendicolare) o 'inter'(intersezione) per descrivere le linee.

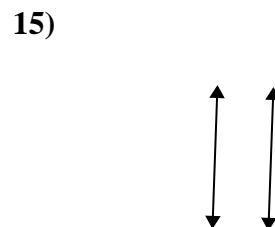
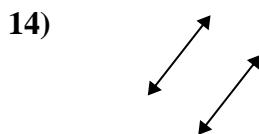
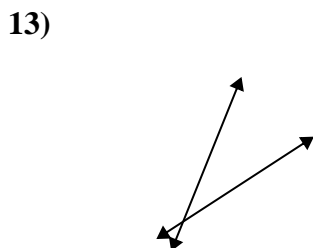
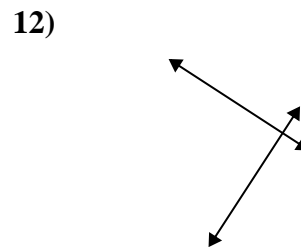
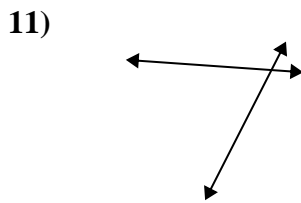
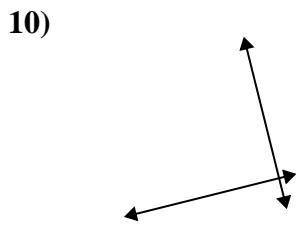
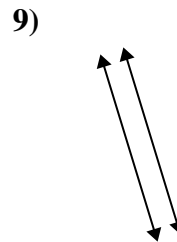
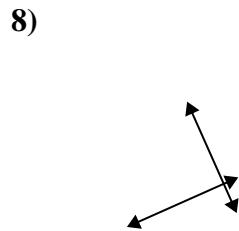
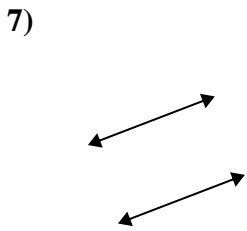
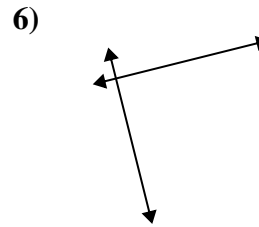
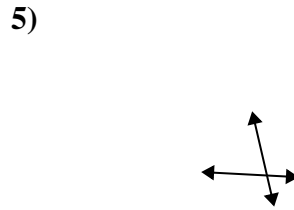
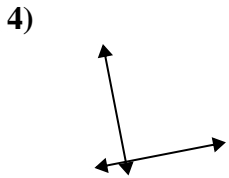
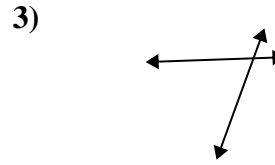
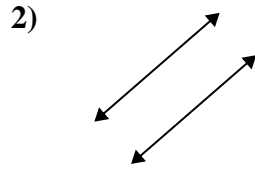
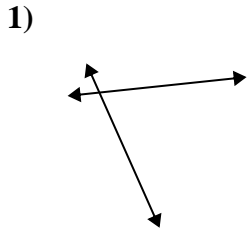
**Risposte**



1. \_\_\_\_\_
2. \_\_\_\_\_
3. \_\_\_\_\_
4. \_\_\_\_\_
5. \_\_\_\_\_
6. \_\_\_\_\_
7. \_\_\_\_\_
8. \_\_\_\_\_
9. \_\_\_\_\_
10. \_\_\_\_\_
11. \_\_\_\_\_
12. \_\_\_\_\_
13. \_\_\_\_\_
14. \_\_\_\_\_
15. \_\_\_\_\_



Definisci 'parallele', 'perp'(perpendicolare) o 'inter'(intersezione) per descrivere le linee.



**Risposte**

1. incidenti

2. parallele

3. incidenti

4. perpendicolari e incidenti

5. incidenti

6. perpendicolari e incidenti

7. parallele

8. perpendicolari e incidenti

9. parallele

10. perpendicolari e incidenti

11. incidenti

12. perpendicolari e incidenti

13. incidenti

14. parallele

15. parallele