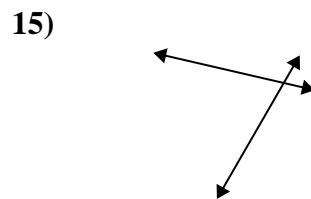
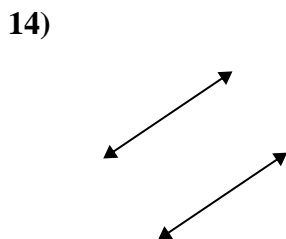
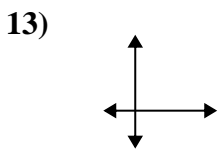
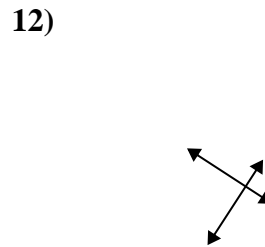
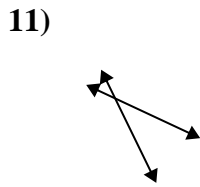
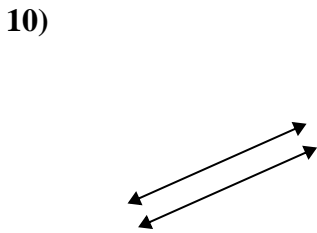
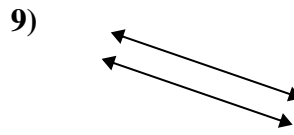
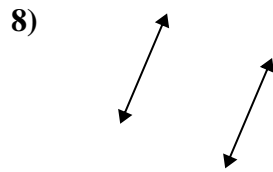
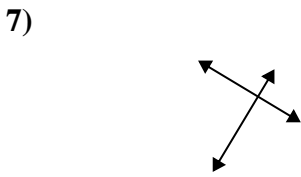
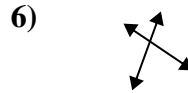
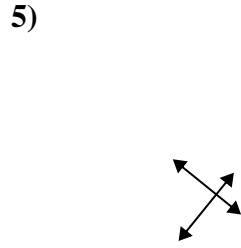
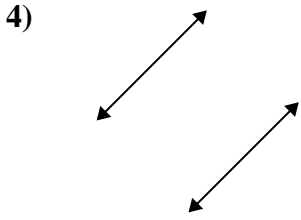
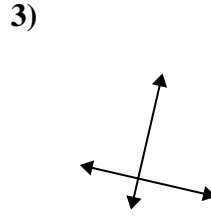
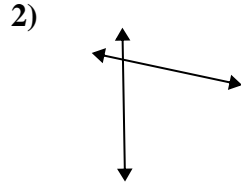
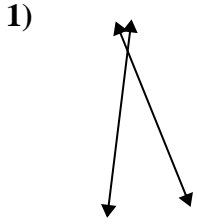




Definisci 'parallele', 'perp'(perpendicolare) o 'inter'(intersezione) per descrivere le linee.

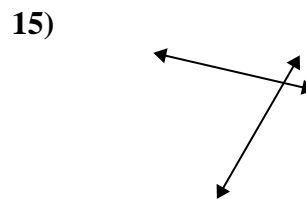
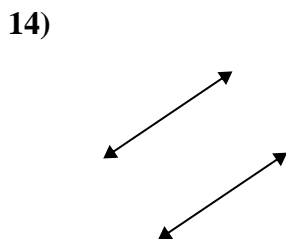
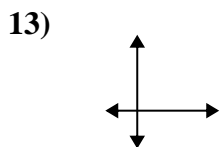
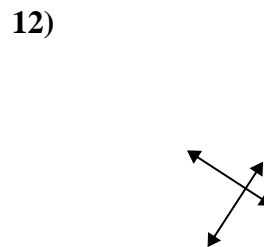
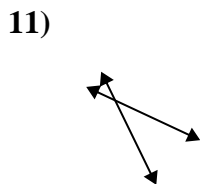
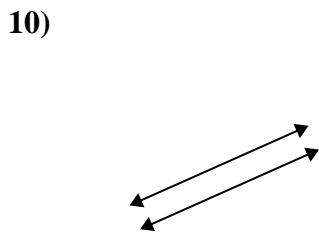
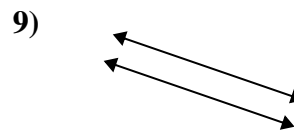
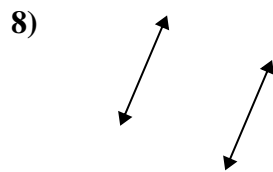
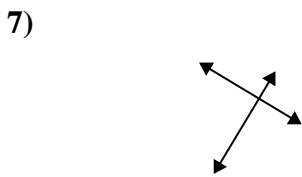
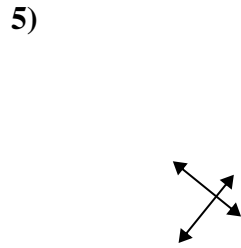
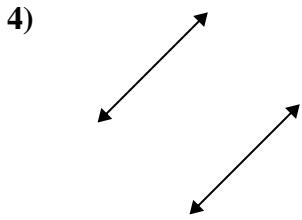
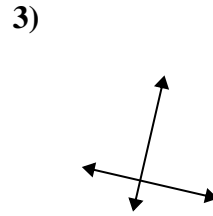
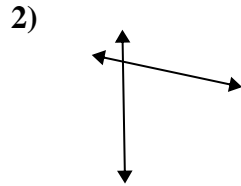
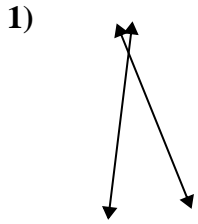
Risposte



1. _____
2. _____
3. _____
4. _____
5. _____
6. _____
7. _____
8. _____
9. _____
10. _____
11. _____
12. _____
13. _____
14. _____
15. _____



Definisci 'parallele', 'perp'(perpendicolare) o 'inter'(intersezione) per descrivere le linee.



Risposte

1. incidenti

2. incidenti

3. perpendicolari e incidenti

4. parallele

5. perpendicolari e incidenti

6. incidenti

7. perpendicolari e incidenti

8. parallele

9. parallele

10. parallele

11. incidenti

12. perpendicolari e incidenti

13. perpendicolari e incidenti

14. parallele

15. incidenti