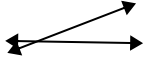




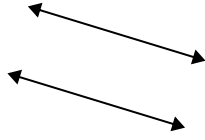
Definisci 'parallele', 'perp'(perpendicolare) o 'inter'(intersezione) per descrivere le linee.

**Risposte**

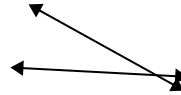
1)



2)



3)



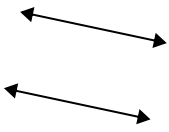
1. \_\_\_\_\_

2. \_\_\_\_\_

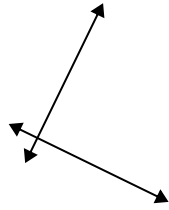
3. \_\_\_\_\_

4. \_\_\_\_\_

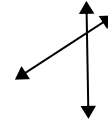
4)



5)



6)



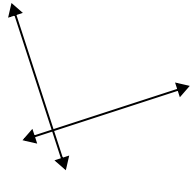
5. \_\_\_\_\_

6. \_\_\_\_\_

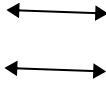
7. \_\_\_\_\_

8. \_\_\_\_\_

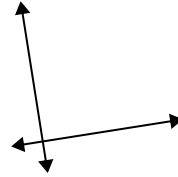
7)



8)



9)



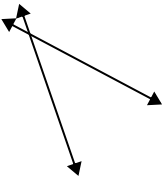
9. \_\_\_\_\_

10. \_\_\_\_\_

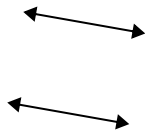
11. \_\_\_\_\_

12. \_\_\_\_\_

10)



11)



12)

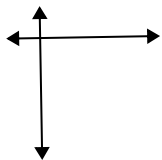


13. \_\_\_\_\_

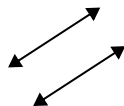
14. \_\_\_\_\_

15. \_\_\_\_\_

13)



14)




15)



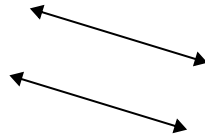


Definisci 'parallele', 'perp'(perpendicolare) o 'inter'(intersezione) per descrivere le linee.

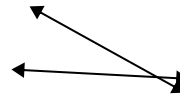
1)



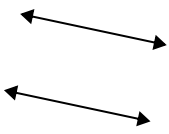
2)



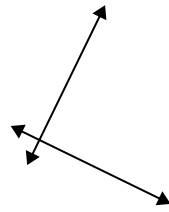
3)



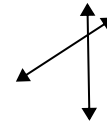
4)



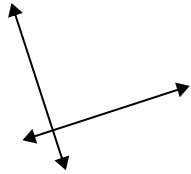
5)



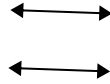
6)



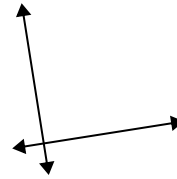
7)



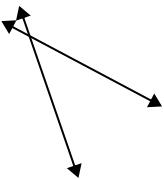
8)



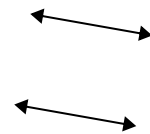
9)



10)



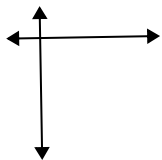
11)



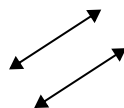
12)



13)



14)



15)



**Risposte**

1. incidenti

2. parallele

3. incidenti

4. parallele

5. perpendicolari e incidenti

6. incidenti

7. perpendicolari e incidenti

8. parallele

9. perpendicolari e incidenti

10. incidenti

11. parallele

12. incidenti

13. perpendicolari e incidenti

14. parallele

15. perpendicolari e incidenti