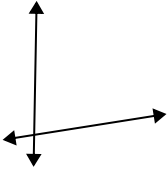




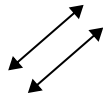
Definisci 'parallele', 'perp'(perpendicolare) o 'inter'(intersezione) per descrivere le linee.

Risposte

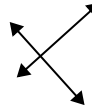
1)



2)



3)



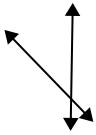
1. _____

2. _____

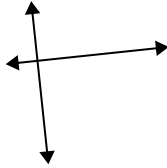
3. _____

4. _____

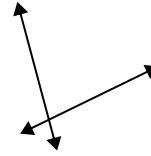
4)



5)



6)



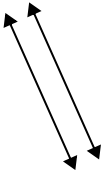
5. _____

6. _____

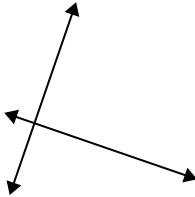
7. _____

8. _____

7)



8)



9)



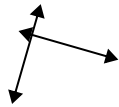
9. _____

10. _____

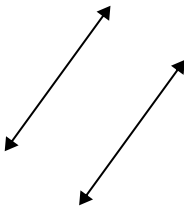
11. _____

12. _____

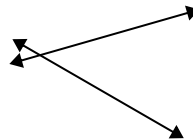
10)



11)



12)

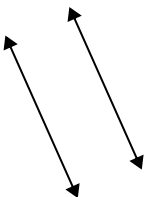


13. _____

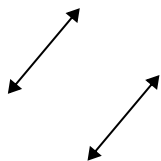
14. _____

15. _____

13)



14)



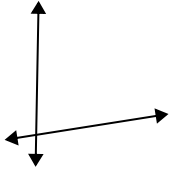
15)



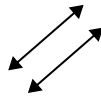


Definisci 'parallele', 'perp'(perpendicolare) o 'inter'(intersezione) per descrivere le linee.

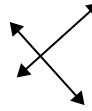
1)



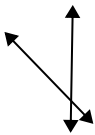
2)



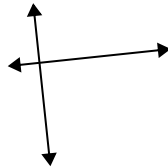
3)



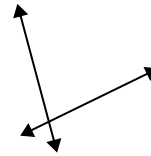
4)



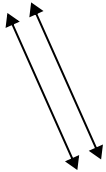
5)



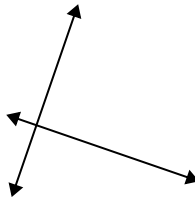
6)



7)



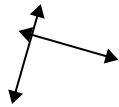
8)



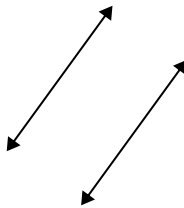
9)



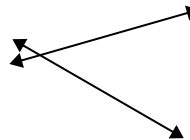
10)



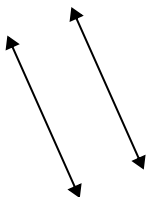
11)



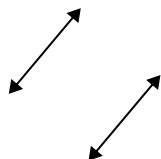
12)



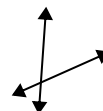
13)



14)



15)



Risposte

1. incidenti

2. parallele

3. perpendicolari e incidenti

4. incidenti

5. perpendicolari e incidenti

6. incidenti

7. parallele

8. perpendicolari e incidenti

9. perpendicolari e incidenti

10. perpendicolari e incidenti

11. parallele

12. incidenti

13. parallele

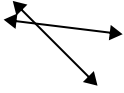
14. parallele

15. incidenti

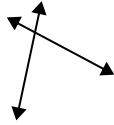


Definisci 'parallele', 'perp'(perpendicolare) o 'inter'(intersezione) per descrivere le linee.

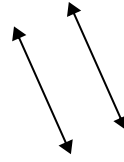
1)



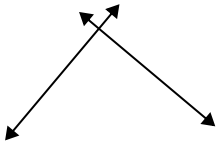
2)



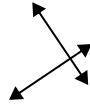
3)



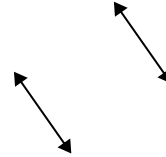
4)



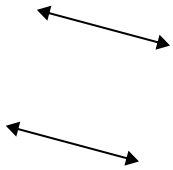
5)



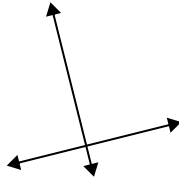
6)



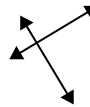
7)



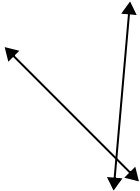
8)



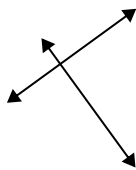
9)



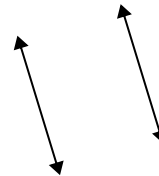
10)



11)




12)



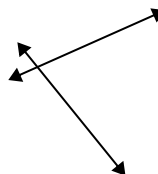
13)



14)



15)



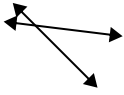
Risposte

1. _____
2. _____
3. _____
4. _____
5. _____
6. _____
7. _____
8. _____
9. _____
10. _____
11. _____
12. _____
13. _____
14. _____
15. _____

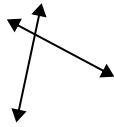


Definisci 'parallele', 'perp'(perpendicolare) o 'inter'(intersezione) per descrivere le linee.

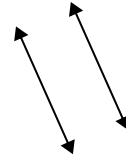
1)



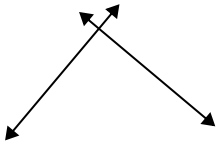
2)



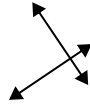
3)



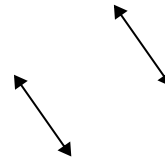
4)



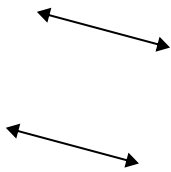
5)



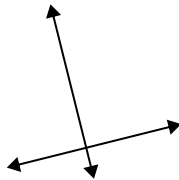
6)



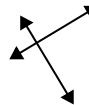
7)



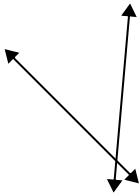
8)



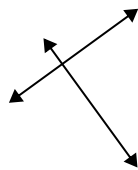
9)



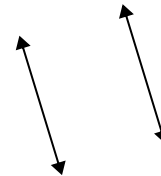
10)



11)




12)



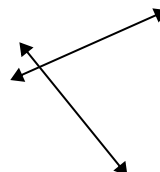
13)



14)



15)



Risposte

1. incidenti

2. incidenti

3. parallele

4. perpendicolari e incidenti

5. perpendicolari e incidenti

6. parallele

7. parallele

8. perpendicolari e incidenti

9. perpendicolari e incidenti

10. incidenti

11. perpendicolari e incidenti

12. parallele

13. incidenti

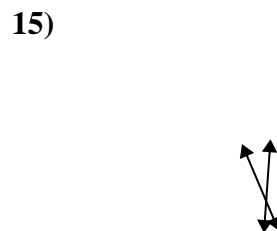
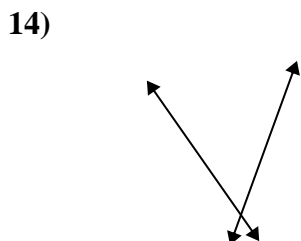
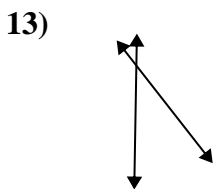
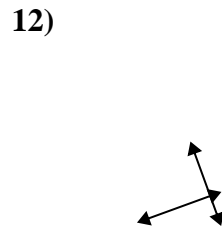
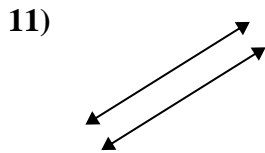
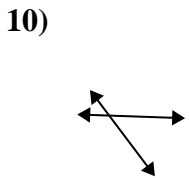
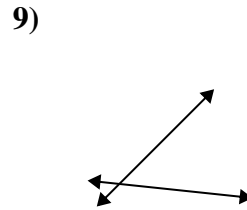
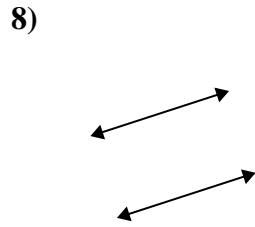
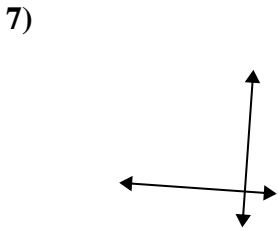
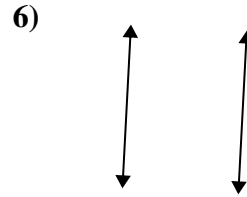
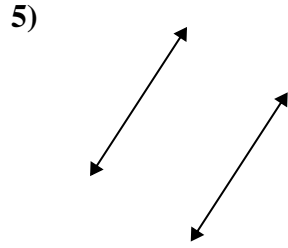
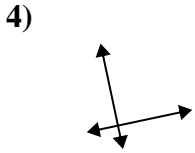
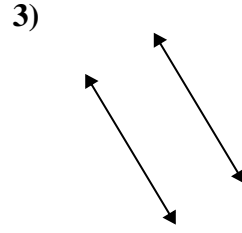
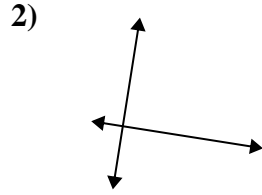
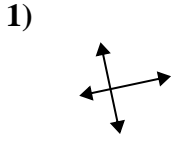
14. parallele

15. incidenti



Definisci 'parallele', 'perp'(perpendicolare) o 'inter'(intersezione) per descrivere le linee.

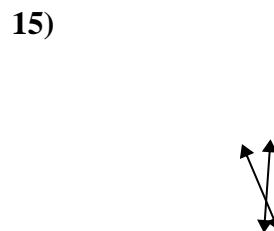
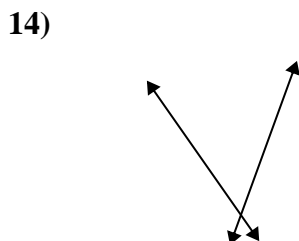
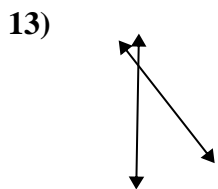
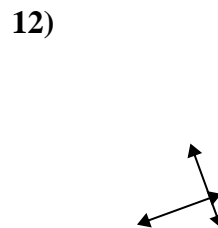
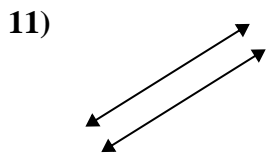
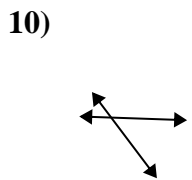
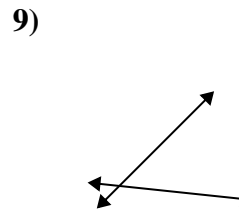
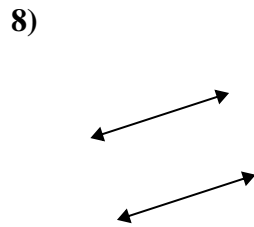
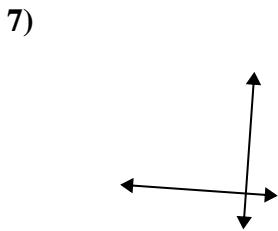
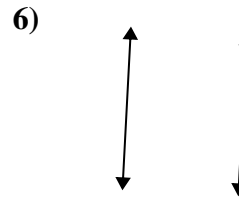
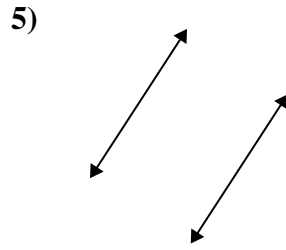
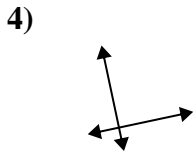
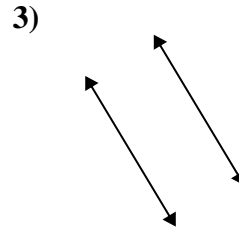
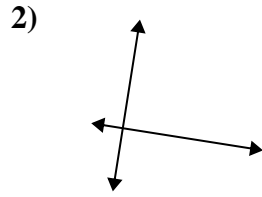
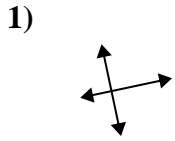
Risposte



1. _____
2. _____
3. _____
4. _____
5. _____
6. _____
7. _____
8. _____
9. _____
10. _____
11. _____
12. _____
13. _____
14. _____
15. _____



Definisci 'parallele', 'perp'(perpendicolare) o 'inter'(intersezione) per descrivere le linee.



Risposte

1. perpendicolari e incidenti

2. perpendicolari e incidenti

3. parallele

4. perpendicolari e incidenti

5. parallele

6. parallele

7. perpendicolari e incidenti

8. parallele

9. incidenti

10. incidenti

11. parallele

12. perpendicolari e incidenti

13. incidenti

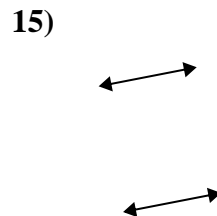
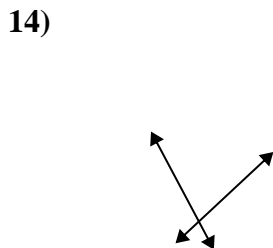
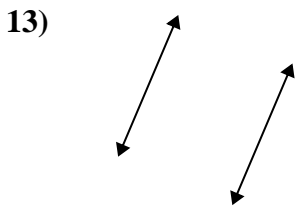
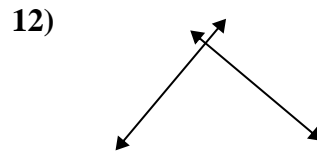
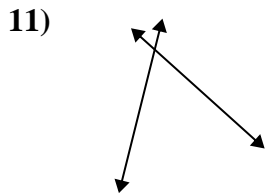
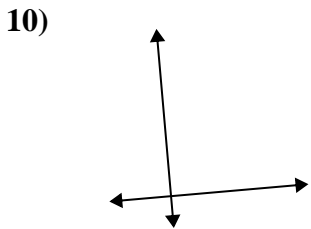
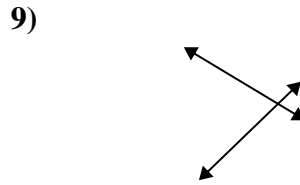
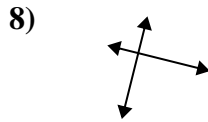
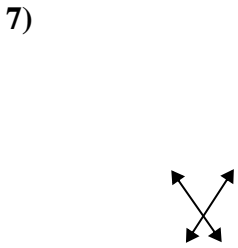
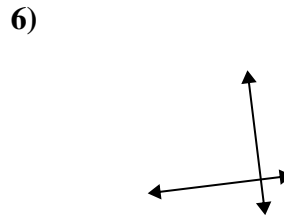
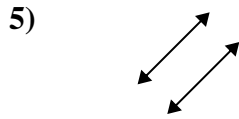
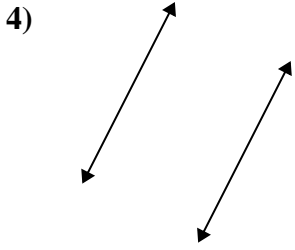
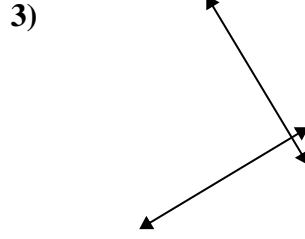
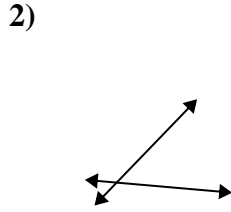
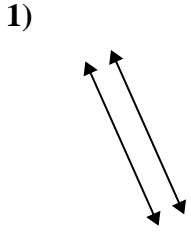
14. incidenti

15. incidenti



Definisci 'parallele', 'perp'(perpendicolare) o 'inter'(intersezione) per descrivere le linee.

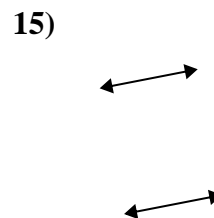
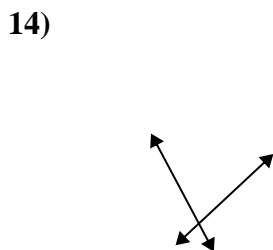
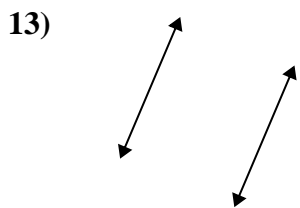
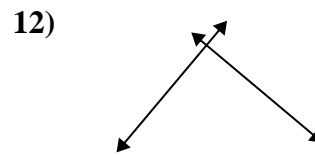
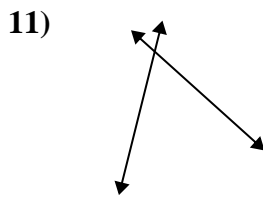
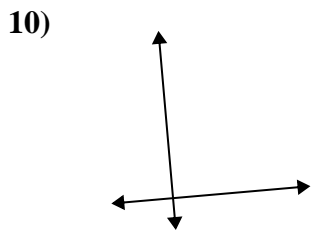
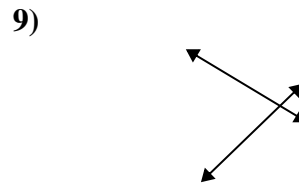
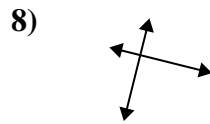
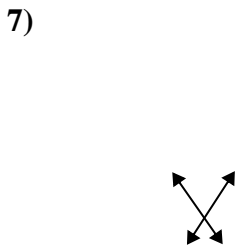
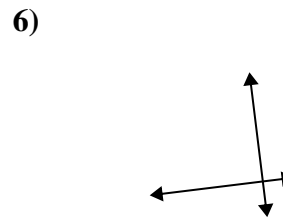
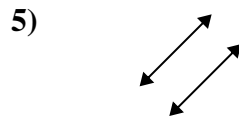
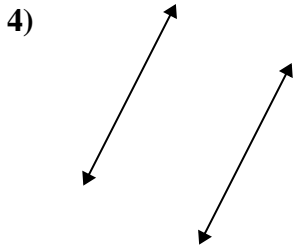
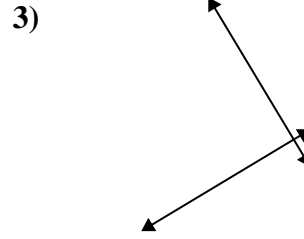
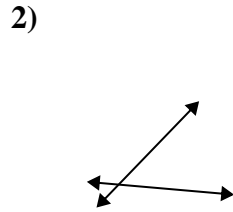
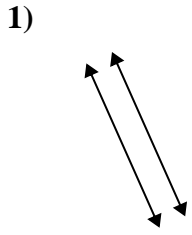
Risposte



1. _____
2. _____
3. _____
4. _____
5. _____
6. _____
7. _____
8. _____
9. _____
10. _____
11. _____
12. _____
13. _____
14. _____
15. _____



Definisci 'parallele', 'perp'(perpendicolare) o 'inter'(intersezione) per descrivere le linee.



Risposte

1. parallele

2. incidenti

3. perpendicolari e incidenti

4. parallele

5. parallele

6. perpendicolari e incidenti

7. incidenti

8. perpendicolari e incidenti

9. incidenti

10. perpendicolari e incidenti

11. incidenti

12. perpendicolari e incidenti

13. parallele

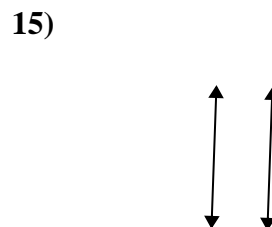
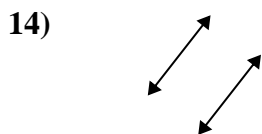
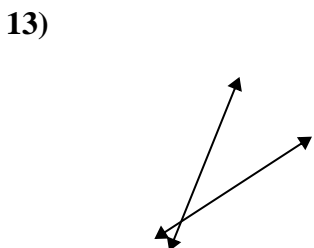
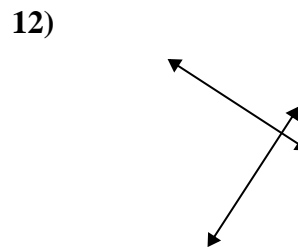
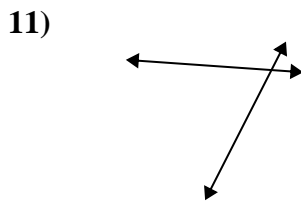
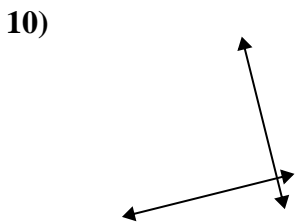
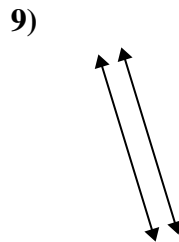
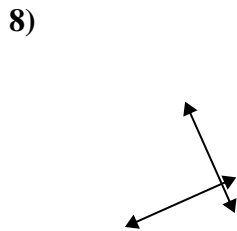
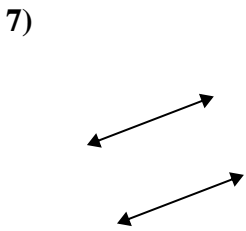
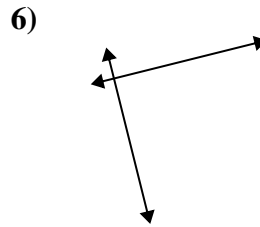
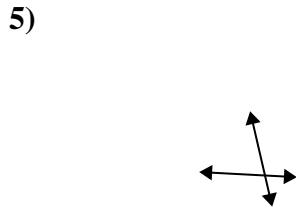
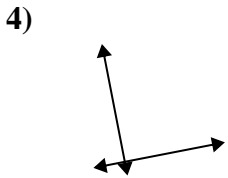
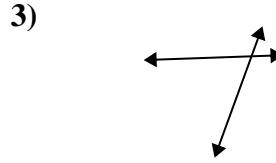
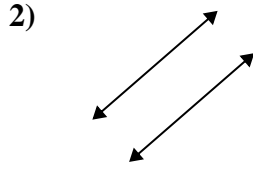
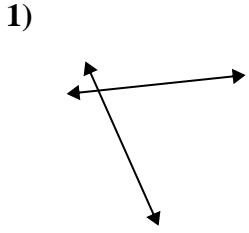
14. incidenti

15. parallele



Definisci 'parallele', 'perp'(perpendicolare) o 'inter'(intersezione) per descrivere le linee.

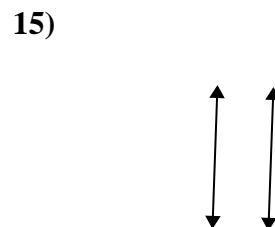
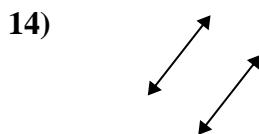
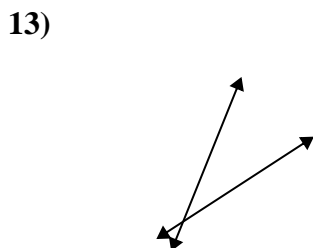
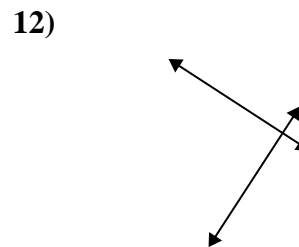
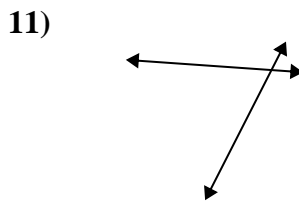
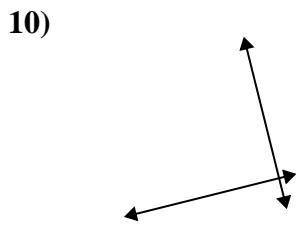
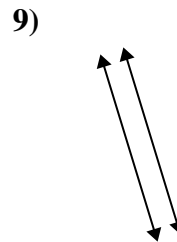
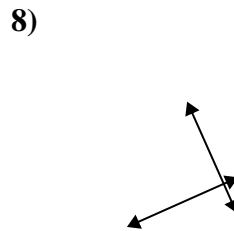
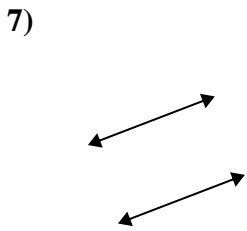
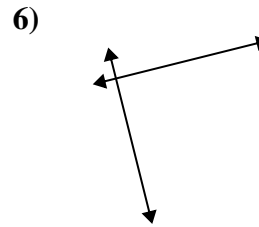
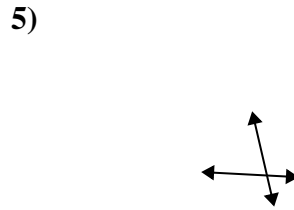
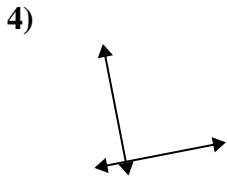
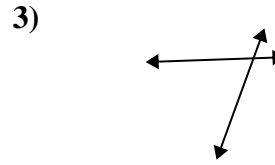
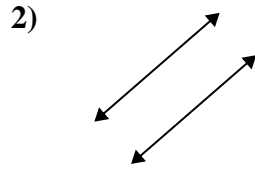
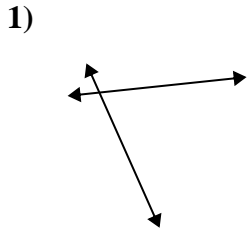
Risposte



1. _____
2. _____
3. _____
4. _____
5. _____
6. _____
7. _____
8. _____
9. _____
10. _____
11. _____
12. _____
13. _____
14. _____
15. _____



Definisci 'parallele', 'perp'(perpendicolare) o 'inter'(intersezione) per descrivere le linee.



Risposte

1. incidenti

2. parallele

3. incidenti

4. perpendicolari e incidenti

5. incidenti

6. perpendicolari e incidenti

7. parallele

8. perpendicolari e incidenti

9. parallele

10. perpendicolari e incidenti

11. incidenti

12. perpendicolari e incidenti

13. incidenti

14. parallele

15. parallele



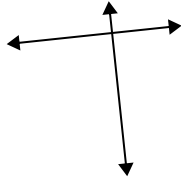
Definisci 'parallele', 'perp'(perpendicolare) o 'inter'(intersezione) per descrivere le linee.

Risposte

1)



2)



3)



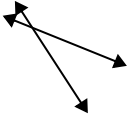
1. _____

2. _____

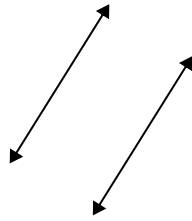
3. _____

4. _____

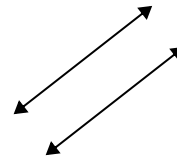
4)



5)



6)



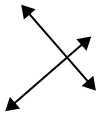
5. _____

6. _____

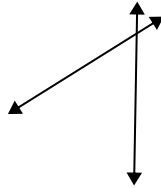
7. _____

8. _____

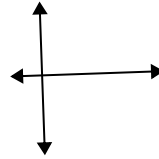
7)



8)



9)



9. _____

10. _____

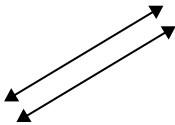
11. _____

12. _____

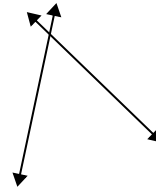
10)



11)



12)

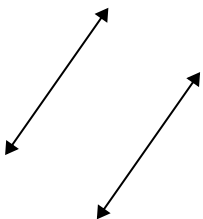


13. _____

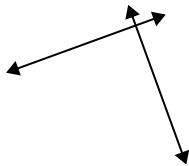
14. _____

15. _____

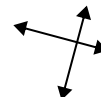
13)



14)



15)



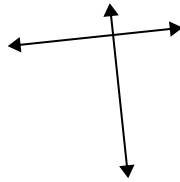


Definisci 'parallele', 'perp'(perpendicolare) o 'inter'(intersezione) per descrivere le linee.

1)



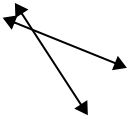
2)



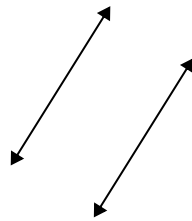
3)



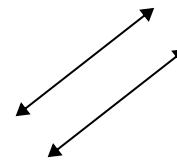
4)



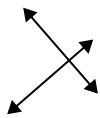
5)



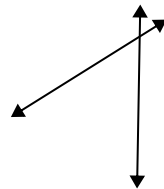
6)



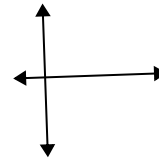
7)



8)



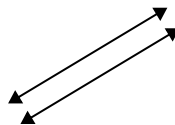
9)



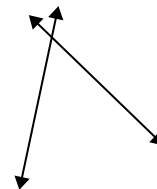
10)



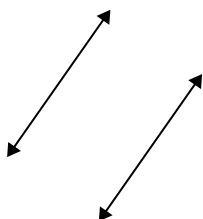
11)



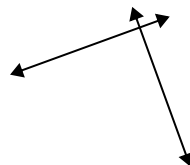
12)



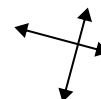
13)



14)



15)



Risposte

1. parallele

2. perpendicolari e incidenti

3. incidenti

4. incidenti

5. parallele

6. parallele

7. perpendicolari e incidenti

8. incidenti

9. perpendicolari e incidenti

10. incidenti

11. parallele

12. incidenti

13. parallele

14. perpendicolari e incidenti

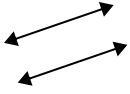
15. perpendicolari e incidenti



Definisci 'parallele', 'perp'(perpendicolare) o 'inter'(intersezione) per descrivere le linee.

Risposte

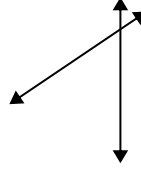
1)



2)



3)



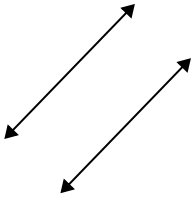
1. _____

2. _____

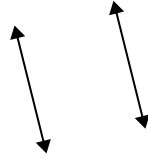
3. _____

4. _____

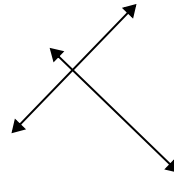
4)



5)



6)



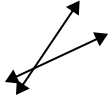
5. _____

6. _____

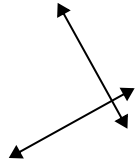
7. _____

8. _____

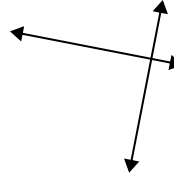
7)



8)



9)



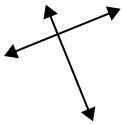
9. _____

10. _____

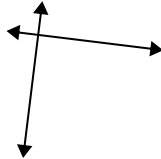
11. _____

12. _____

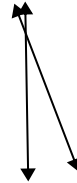
10)



11)



12)

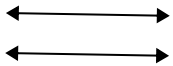


13. _____

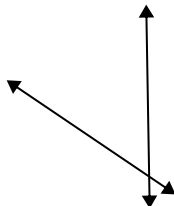
14. _____

15. _____

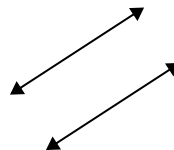
13)



14)



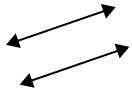
15)





Definisci 'parallele', 'perp'(perpendicolare) o 'inter'(intersezione) per descrivere le linee.

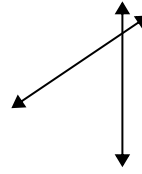
1)



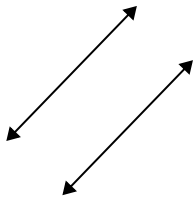
2)



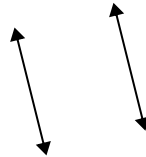
3)



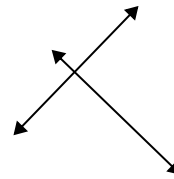
4)



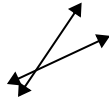
5)



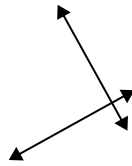
6)



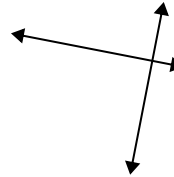
7)



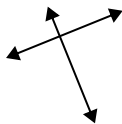
8)



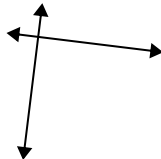
9)



10)



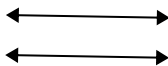
11)



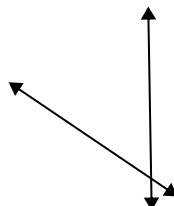
12)



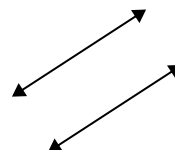
13)



14)



15)



Risposte

1. parallele

2. incidenti

3. incidenti

4. parallele

5. parallele

6. perpendicolari e incidenti

7. incidenti

8. perpendicolari e incidenti

9. perpendicolari e incidenti

10. perpendicolari e incidenti

11. perpendicolari e incidenti

12. incidenti

13. parallele

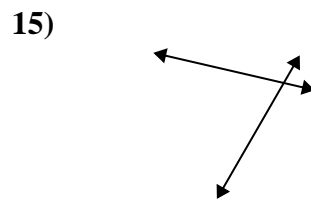
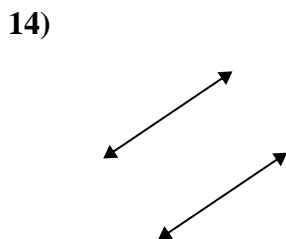
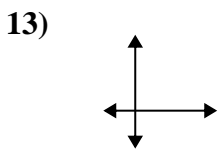
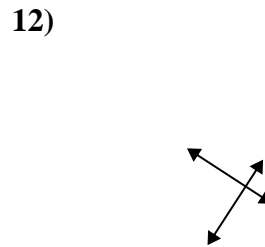
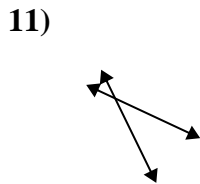
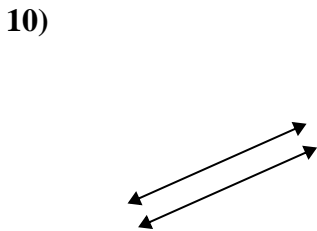
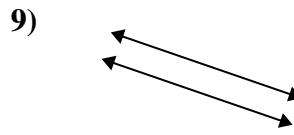
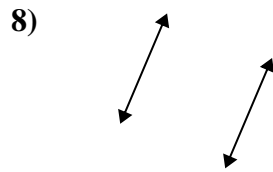
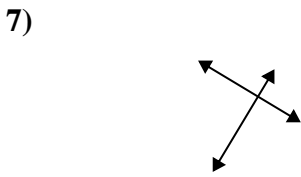
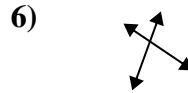
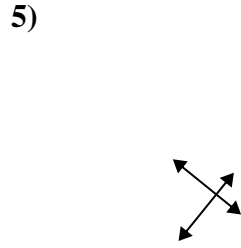
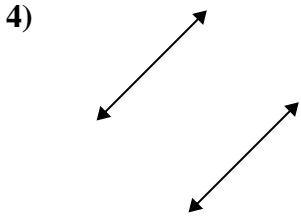
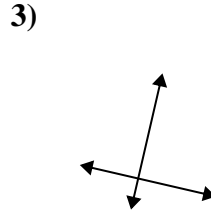
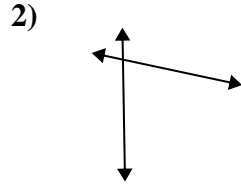
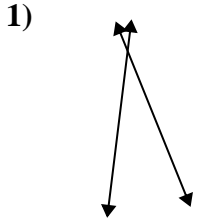
14. incidenti

15. parallele



Definisci 'parallele', 'perp'(perpendicolare) o 'inter'(intersezione) per descrivere le linee.

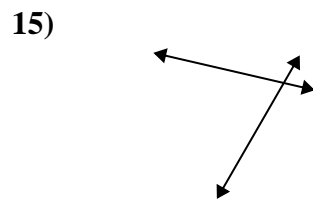
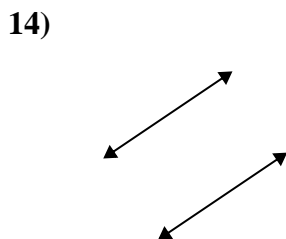
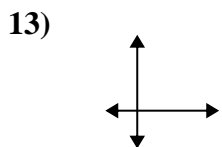
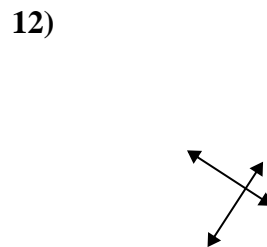
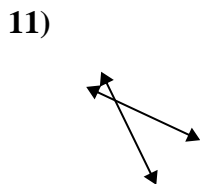
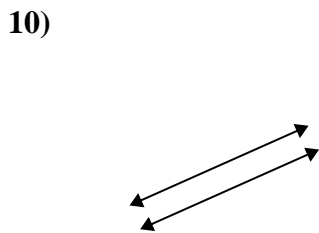
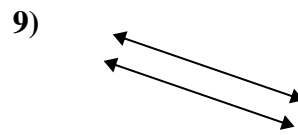
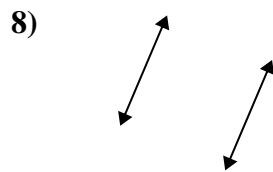
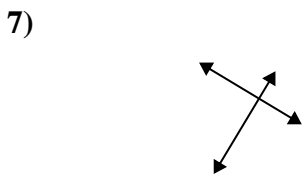
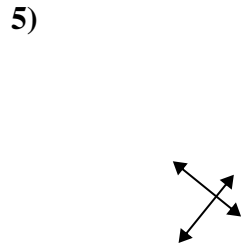
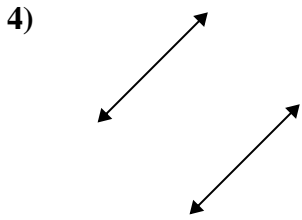
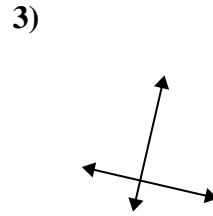
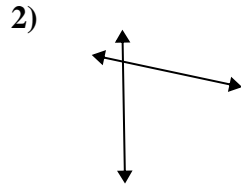
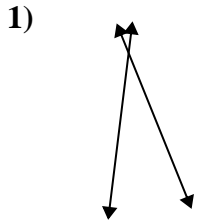
Risposte



1. _____
2. _____
3. _____
4. _____
5. _____
6. _____
7. _____
8. _____
9. _____
10. _____
11. _____
12. _____
13. _____
14. _____
15. _____



Definisci 'parallele', 'perp'(perpendicolare) o 'inter'(intersezione) per descrivere le linee.



Risposte

1. incidenti

2. incidenti

3. perpendicolari e incidenti

4. parallele

5. perpendicolari e incidenti

6. incidenti

7. perpendicolari e incidenti

8. parallele

9. parallele

10. parallele

11. incidenti

12. perpendicolari e incidenti

13. perpendicolari e incidenti

14. parallele

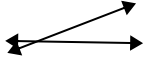
15. incidenti



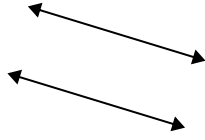
Definisci 'parallele', 'perp'(perpendicolare) o 'inter'(intersezione) per descrivere le linee.

Risposte

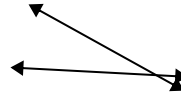
1)



2)



3)



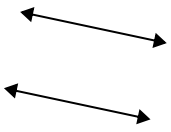
1. _____

2. _____

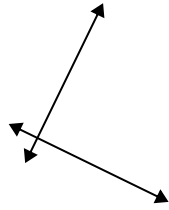
3. _____

4. _____

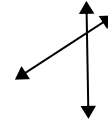
4)



5)



6)



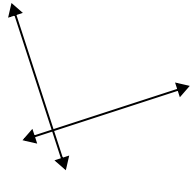
5. _____

6. _____

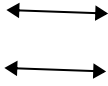
7. _____

8. _____

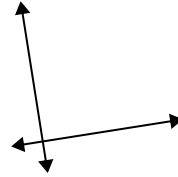
7)



8)



9)



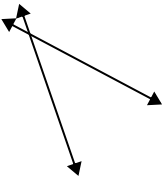
9. _____

10. _____

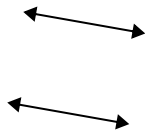
11. _____

12. _____

10)



11)



12)

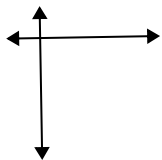


13. _____

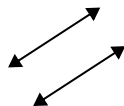
14. _____

15. _____

13)



14)




15)



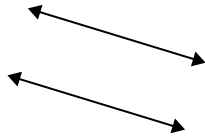


Definisci 'parallele', 'perp'(perpendicolare) o 'inter'(intersezione) per descrivere le linee.

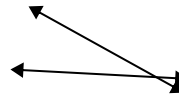
1)



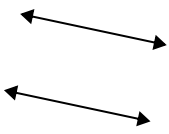
2)



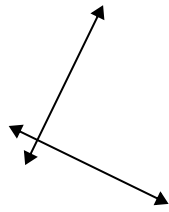
3)



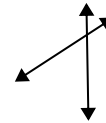
4)



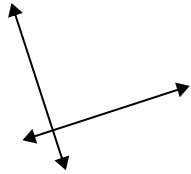
5)



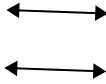
6)



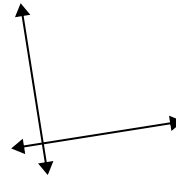
7)



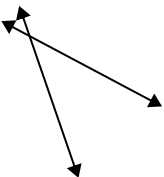
8)



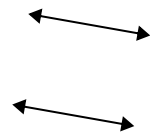
9)



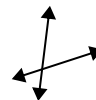
10)



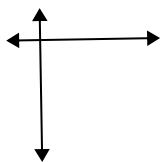
11)



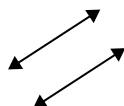
12)



13)



14)



15)



Risposte

1. incidenti

2. parallele

3. incidenti

4. parallele

5. perpendicolari e incidenti

6. incidenti

7. perpendicolari e incidenti

8. parallele

9. perpendicolari e incidenti

10. incidenti

11. parallele

12. incidenti

13. perpendicolari e incidenti

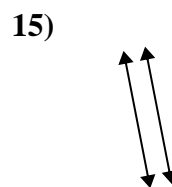
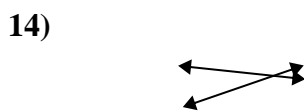
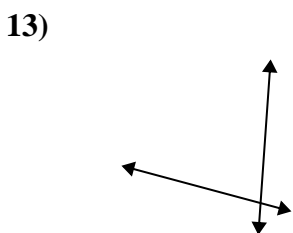
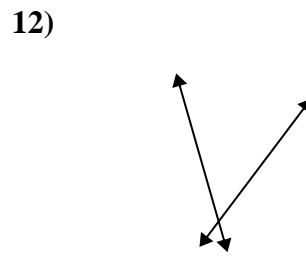
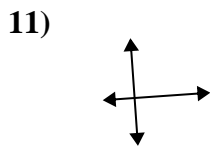
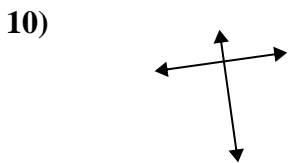
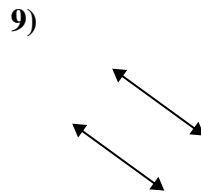
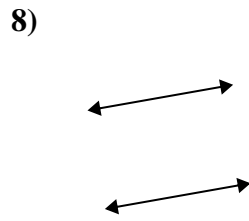
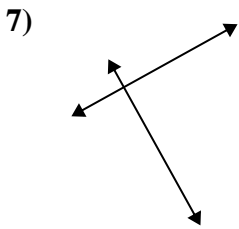
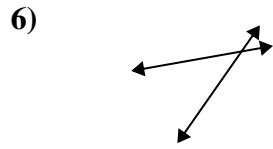
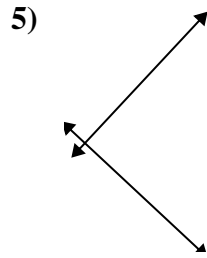
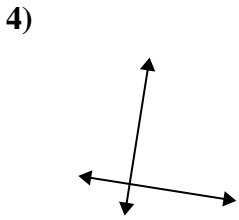
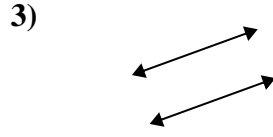
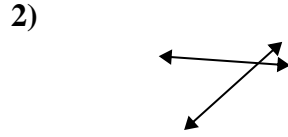
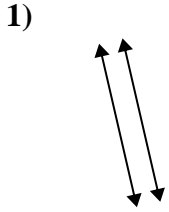
14. parallele

15. perpendicolari e incidenti



Definisci 'parallele', 'perp'(perpendicolare) o 'inter'(intersezione) per descrivere le linee.

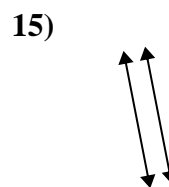
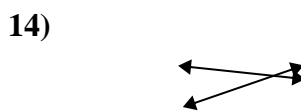
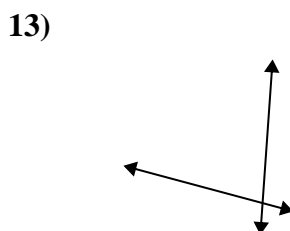
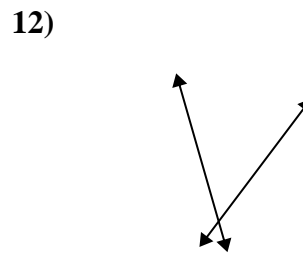
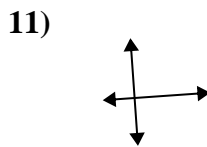
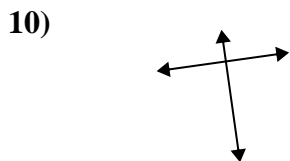
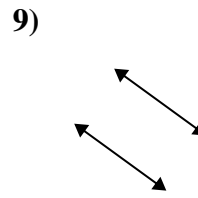
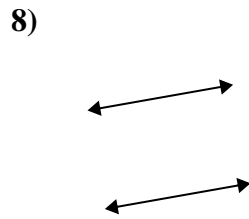
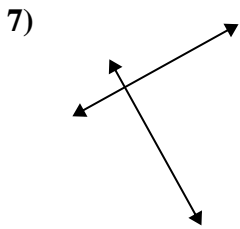
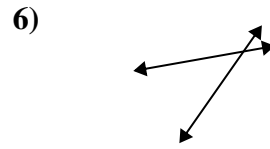
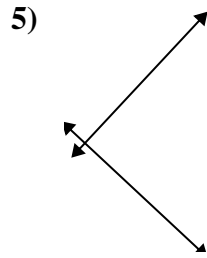
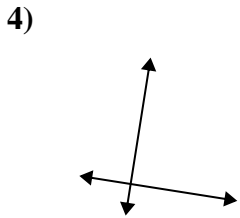
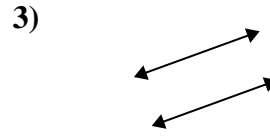
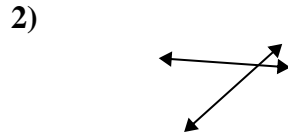
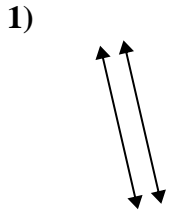
Risposte



1. _____
2. _____
3. _____
4. _____
5. _____
6. _____
7. _____
8. _____
9. _____
10. _____
11. _____
12. _____
13. _____
14. _____
15. _____



Definisci 'parallele', 'perp'(perpendicolare) o 'inter'(intersezione) per descrivere le linee.



Risposte

1. parallele

2. incidenti

3. parallele

4. perpendicolari e incidenti

5. perpendicolari e incidenti

6. incidenti

7. perpendicolari e incidenti

8. parallele

9. parallele

10. perpendicolari e incidenti

11. perpendicolari e incidenti

12. incidenti

13. incidenti

14. incidenti

15. parallele