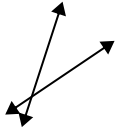




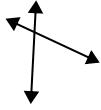
Definisci 'parallele', 'perp'(perpendicolare) o 'inter'(intersezione) per descrivere le linee.

Risposte

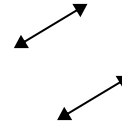
1)



2)



3)



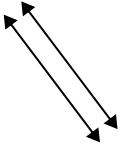
1. _____

2. _____

3. _____

4. _____

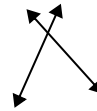
4)



5)



6)



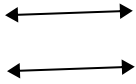
5. _____

6. _____

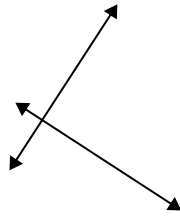
7. _____

8. _____

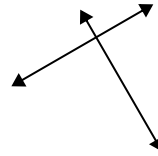
7)



8)



9)



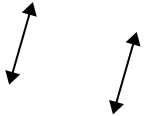
9. _____

10. _____

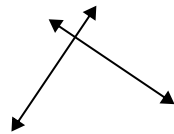
11. _____

12. _____

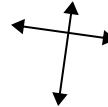
10)



11)



12)

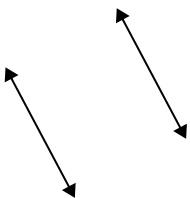


13. _____

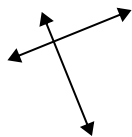
14. _____

15. _____

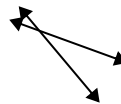
13)



14)



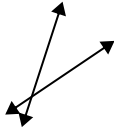
15)



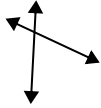


Definisci 'parallele', 'perp'(perpendicolare) o 'inter'(intersezione) per descrivere le linee.

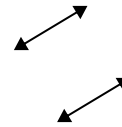
1)



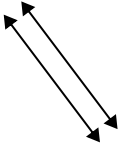
2)



3)



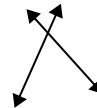
4)



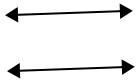
5)



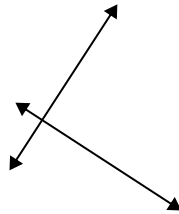
6)



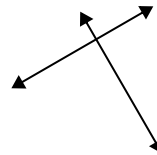
7)



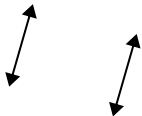
8)



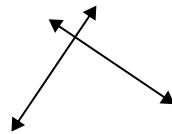
9)



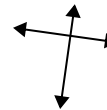
10)



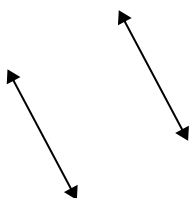
11)



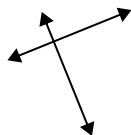
12)



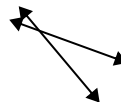
13)



14)



15)



Risposte

1. incidenti

2. incidenti

3. parallele

4. parallele

5. incidenti

6. incidenti

7. parallele

8. perpendicolari e incidenti

9. perpendicolari e incidenti

10. parallele

11. perpendicolari e incidenti

12. perpendicolari e incidenti

13. parallele

14. perpendicolari e incidenti

15. incidenti