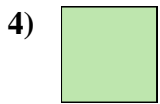





Misura la lunghezza di ogni barra sia in centimetri che in pollici.



**Risposte**

Es. 1 2-3

1. \_\_\_\_\_

2. \_\_\_\_\_

3. \_\_\_\_\_

4. \_\_\_\_\_

5. \_\_\_\_\_

6. \_\_\_\_\_

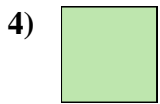

7. \_\_\_\_\_

8. \_\_\_\_\_

9. \_\_\_\_\_



Misura la lunghezza di ogni barra sia in centimetri che in pollici.



**Risposte**

- |     |              |                |
|-----|--------------|----------------|
| Es. | <u>1</u>     | <u>2 - 3</u>   |
| 1.  | <u>1 1/2</u> | <u>3 - 4</u>   |
| 2.  | <u>5</u>     | <u>12 - 13</u> |
| 3.  | <u>5 1/2</u> | <u>13 - 14</u> |
| 4.  | <u>0 1/2</u> | <u>1 - 2</u>   |
| 5.  | <u>3</u>     | <u>7 - 8</u>   |
| 6.  | <u>2</u>     | <u>5 - 6</u>   |
| 7.  | <u>4</u>     | <u>10 - 11</u> |
| 8.  | <u>4 1/2</u> | <u>11 - 12</u> |
| 9.  | <u>3 1/2</u> | <u>8 - 9</u>   |