




Misura la lunghezza e l'altezza di ogni rettangolo in pollici e in centimetri

Es)



1)




2)



3)



4)



Risposte

Es. $4\frac{1}{2}$ **1** 11,4 2,5

1. _____

2. _____

3. _____

4. _____




Misura la lunghezza e l'altezza di ogni rettangolo in pollici e in centimetri

Es)



1)



2)



3)



4)



Risposte

Es. 4 1/2 **1** 11,4 2,5

1. 5 1/2 1 1/2 **14** **3,8**

2. **1** 0 1/2 **2,5** **1,3**

3. 1 1/2 0 1/2 **3,8** **1,3**

4. **4** 1 1/2 10,2 **3,8**