



Misura la lunghezza e l'altezza di ogni rettangolo in pollici e in centimetri

Es)



**Risposte**

Es. 3 0 1/2 7,6 1,3

1. \_\_\_\_\_

2. \_\_\_\_\_


3. \_\_\_\_\_

4. \_\_\_\_\_

1)




2)



3)



4)






Misura la lunghezza e l'altezza di ogni rettangolo in pollici e in centimetri

Es)



1)




2)



3)



4)



**Risposte**

Es. 3 0 1/2 7,6 1,3

1. 1 1/2 1 3,8 2,5

2. 0 1/2 1 1,3 2,5

3. 5 1/2 1 14 2,5

4. 1 1 1/2 2,5 3,8