



Misura la lunghezza e l'altezza di ogni rettangolo in pollici e in centimetri

Es)



Risposte

Es. 5 1/2 0 1/2 **14** **1,3**


1. _____

2. _____


3. _____

4. _____


1)




2)



3)



4)





Misura la lunghezza e l'altezza di ogni rettangolo in pollici e in centimetri

Es)



Risposte

Es. 5 1/2 0 1/2 **14** **1,3**


1. 3 1/2 1 1/2 **8,9** **3,8**

2. **4** 0 1/2 **10,2** **1,3**


3. **5** **1** 12,7 2,5

4. **1** **1** 2,5 2,5


1)



2)



3)



4)

