



Misura la lunghezza e l'altezza di ogni rettangolo in pollici e in centimetri

Risposte

Es)



Es. 4 1 1/2 10,2 3,8


1. _____

2. _____

3. _____

4. _____

1)




2)



3)




4)






Misura la lunghezza e l'altezza di ogni rettangolo in pollici e in centimetri

Es)



1)



2)



3)



4)

**Risposte**Es. 4 1 1/2 10,2 3,81. 2 1 1/2 5,1 3,82. 3 0 1/2 7,6 1,33. 3 1/2 1 1/2 8,9 3,84. 0 1/2 0 1/2 1,3 1,3