



Misura la lunghezza e l'altezza di ogni rettangolo in pollici e in centimetri

Es)



Risposte

Es. 2 1/2 1 6,4 2,5


1. _____

2. _____


3. _____

4. _____


1)



2)



3)



4)






Misura la lunghezza e l'altezza di ogni rettangolo in pollici e in centimetri


Es)




1)



2)



3)




4)

**Risposte**Es. 2 1/2 1 6,4 2,51. 4 1/2 1 1/2 11,4 3,82. 3 1 7,6 2,53. 5 1 1/2 12,7 3,84. 2 0 1/2 5,1 1,3




Misura la lunghezza e l'altezza di ogni rettangolo in pollici e in centimetri


Es)



1)




2)



3)



4)



Risposte

Es. 1 1 1/2 2,5 3,8

1. _____

2. _____


3. _____

4. _____




Misura la lunghezza e l'altezza di ogni rettangolo in pollici e in centimetri


Es)



1)




2)



3)



4)



Risposte

Es. 1 1 1/2 2,5 3,8

1. 1 1/2 1 1/2 3,8 3,8

2. 5 1 12,7 2,5

3. 5 1/2 0 1/2 14 1,3

4. 0 1/2 1 1/2 1,3 3,8



Misura la lunghezza e l'altezza di ogni rettangolo in pollici e in centimetri

Es)



Risposte

Es. $4\frac{1}{2}$ **1** 11,4 2,5


1. _____

2. _____

3. _____

4. _____

1)



2)



3)



4)






Misura la lunghezza e l'altezza di ogni rettangolo in pollici e in centimetri

Es)



1)



2)



3)



4)



Risposte

Es. 4 1/2 **1** 11,4 **2,5**

1. 5 1/2 1 1/2 **14** **3,8**

2. **1** 0 1/2 **2,5** **1,3**


3. 1 1/2 0 1/2 **3,8** **1,3**

4. **4** 1 1/2 10,2 **3,8**



Misura la lunghezza e l'altezza di ogni rettangolo in pollici e in centimetri

Es)




1)



2)



3)



4)



Risposte

Es. 3 1 7,6 2,5

1. _____

2. _____


3. _____

4. _____



Misura la lunghezza e l'altezza di ogni rettangolo in pollici e in centimetri

Es)



1)



2)



3)



4)



Risposte

Es. 3 1 7,6 2,5

1. 5 0 1/2 12,7 1,3

2. 1 1/2 0 1/2 3,8 1,3

3. 0 1/2 1 1,3 2,5

4. 4 1/2 0 1/2 11,4 1,3



Misura la lunghezza e l'altezza di ogni rettangolo in pollici e in centimetri

Es)



Risposte

Es. 3 0 1/2 7,6 1,3

1. _____

2. _____


3. _____

4. _____

1)




2)



3)



4)






Misura la lunghezza e l'altezza di ogni rettangolo in pollici e in centimetri

Es)



1)




2)



3)



4)



Risposte

Es. 3 0 1/2 7,6 1,3

1. 1 1/2 1 3,8 2,5

2. 0 1/2 1 1,3 2,5

3. 5 1/2 1 14 2,5

4. 1 1 1/2 2,5 3,8



Misura la lunghezza e l'altezza di ogni rettangolo in pollici e in centimetri

Es)



Risposte

Es. $5\frac{1}{2}$ $0\frac{1}{2}$ **14** **1,3**


1. _____

2. _____


3. _____

4. _____


1)




2)



3)



4)





Misura la lunghezza e l'altezza di ogni rettangolo in pollici e in centimetri

Es)



Risposte

Es. 5 1/2 0 1/2 **14** **1,3**


1. 3 1/2 1 1/2 **8,9** **3,8**

2. **4** 0 1/2 **10,2** **1,3**


3. **5** **1** 12,7 2,5

4. **1** **1** 2,5 2,5


1)




2)



3)



4)





Misura la lunghezza e l'altezza di ogni rettangolo in pollici e in centimetri

Es)



Risposte

Es. 4 0 1/2 10,2 1,3


1. _____

2. _____

3. _____

4. _____

1)




2)



3)



4)





Misura la lunghezza e l'altezza di ogni rettangolo in pollici e in centimetri

Es)



1)




2)



3)



4)



Risposte

Es. 4 0 1/2 10,2 1,3

1. 0 1/2 1 1/2 1,3 3,8

2. 1 1/2 0 1/2 3,8 1,3

3. 5 1/2 0 1/2 14 1,3

4. 3 1 1/2 7,6 3,8



Misura la lunghezza e l'altezza di ogni rettangolo in pollici e in centimetri

Es)



Risposte

Es. 3 1/2 0 1/2 8,9 1,3


1. _____

2. _____


3. _____

4. _____


1)




2)



3)



4)





Misura la lunghezza e l'altezza di ogni rettangolo in pollici e in centimetri

Es)



Risposte

Es. 3 1/2 0 1/2 8,9 1,3


1. 1 1 1/2 2,5 3,8

2. 1 1/2 1 3,8 2,5

3. 5 1/2 1 1/2 14 3,8

4. 5 1 12,7 2,5


1)




2)



3)



4)





Misura la lunghezza e l'altezza di ogni rettangolo in pollici e in centimetri

Risposte

Es)



Es. 4 1 1/2 10,2 3,8


1. _____

2. _____

3. _____

4. _____

1)




2)



3)



4)






Misura la lunghezza e l'altezza di ogni rettangolo in pollici e in centimetri

Es)



1)




2)



3)



4)



Risposte

Es. 4 1 1/2 10,2 3,8

1. 2 1 1/2 5,1 3,8

2. 3 0 1/2 7,6 1,3

3. 3 1/2 1 1/2 8,9 3,8

4. 0 1/2 0 1/2 1,3 1,3



Misura la lunghezza e l'altezza di ogni rettangolo in pollici e in centimetri


Es)



1)



2)



3)



4)



Risposte

Es. 1 0 1/2 2,5 1,3

1. _____

2. _____

3. _____

4. _____



Misura la lunghezza e l'altezza di ogni rettangolo in pollici e in centimetri

Es)



1)



2)



3)



4)



Risposte

Es. 1 0 1/2 2,5 1,3

1. 3 1/2 0 1/2 8,9 1,3

2. 5 1/2 1 14 2,5

3. 5 1 12,7 2,5

4. 4 1/2 1 11,4 2,5