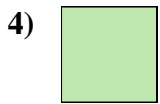





confronta la lunghezza delle coppie.



Risposte

Es. 1 2-3

1. _____

2. _____

3. _____

4. _____

5. _____

6. _____

7. _____

8. _____

9. _____



confronta la lunghezza delle coppie.

Es)



1)




2)



3)



4)



5)



6)



7)



8)



9)



Risposte

Es. 1 2 - 3

1. 1 1/2 3 - 4

2. 5 12 - 13

3. 5 1/2 13 - 14

4. 0 1/2 1 - 2

5. 3 7 - 8

6. 2 5 - 6

7. 4 10 - 11

8. 4 1/2 11 - 12

9. 3 1/2 8 - 9