



confronta la lunghezza delle coppie.



Risposte

Es. 2 1/2 6 - 7

1. _____

2. _____

3. _____

4. _____

5. _____

6. _____


7. _____

8. _____

9. _____



confronta la lunghezza delle coppie.

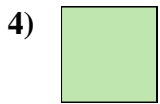



Risposte

- Es. 2 1/2 6 - 7
1. 4 1/2 11 - 12
2. 3 7 - 8
3. 5 12 - 13
4. 2 5 - 6
5. 3 1/2 8 - 9
6. 5 1/2 13 - 14
7. 0 1/2 1 - 2
8. 1 2 - 3
9. 4 10 - 11



confronta la lunghezza delle coppie.



Risposte

Es. 1 2-3

1. _____

2. _____

3. _____

4. _____

5. _____

6. _____


7. _____

8. _____

9. _____



confronta la lunghezza delle coppie.



Risposte

- Es. 1 2 - 3
1. 1 1/2 3 - 4
2. 5 12 - 13
3. 5 1/2 13 - 14
4. 0 1/2 1 - 2
5. 3 7 - 8
6. 2 5 - 6
7. 4 10 - 11
8. 4 1/2 11 - 12
9. 3 1/2 8 - 9



confronta la lunghezza delle coppie.



Risposte

Es. 4 1/2 11 - 12

1. _____

2. _____

3. _____

4. _____

5. _____

6. _____

7. _____

8. _____

9. _____



confronta la lunghezza delle coppie.



Risposte

Es. 4 1/2 11 - 12

1. 5 1/2 13 - 14

2. 1 2 - 3

3. 1 1/2 3 - 4

4. 4 10 - 11

5. 2 5 - 6

6. 2 1/2 6 - 7

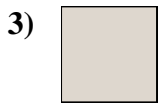
7. 3 7 - 8

8. 0 1/2 1 - 2

9. 5 12 - 13



confronta la lunghezza delle coppie.



Risposte

Es. 3 7-8

1. _____

2. _____

3. _____

4. _____

5. _____

6. _____

7. _____

8. _____

9. _____



confronta la lunghezza delle coppie.



Risposte

Es. 3 7 - 8

1. 5 12 - 13

2. 1 1/2 3 - 4

3. 0 1/2 1 - 2

4. 4 1/2 11 - 12

5. 3 1/2 8 - 9

6. 2 1/2 6 - 7

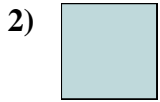
7. 5 1/2 13 - 14

8. 2 5 - 6

9. 4 10 - 11



confronta la lunghezza delle coppie.



Risposte

Es. 3 7-8

1. _____

2. _____

3. _____

4. _____

5. _____

6. _____


7. _____

8. _____

9. _____



confronta la lunghezza delle coppie.



Risposte

Es. 3 7 - 8

1. 1 1/2 3 - 4

2. 0 1/2 1 - 2

3. 5 1/2 13 - 14

4. 1 2 - 3

5. 4 1/2 11 - 12

6. 4 10 - 11


7. 5 12 - 13

8. 2 5 - 6

9. 2 1/2 6 - 7



confronta la lunghezza delle coppie.



Risposte

Es. 5 1/2 13 - 14

1. _____

2. _____

3. _____

4. _____

5. _____

6. _____


7. _____

8. _____

9. _____



confronta la lunghezza delle coppie.



Risposte

Es. 5 1/2 13 - 14

1. 3 1/2 8 - 9

2. 4 10 - 11

3. 5 12 - 13

4. 1 2 - 3

5. 3 7 - 8

6. 0 1/2 1 - 2

7. 1 1/2 3 - 4

8. 2 5 - 6

9. 4 1/2 11 - 12



confronta la lunghezza delle coppie.



Risposte

Es. 4 10 - 11

1. _____

2. _____

3. _____

4. _____

5. _____

6. _____

7. _____

8. _____

9. _____



confronta la lunghezza delle coppie.



Risposte

Es. 4 10 - 11

1. 0 1/2 1 - 2

2. 1 1/2 3 - 4

3. 5 1/2 13 - 14

4. 3 7 - 8

5. 2 1/2 6 - 7

6. 1 2 - 3

7. 2 5 - 6

8. 4 1/2 11 - 12

9. 3 1/2 8 - 9



confronta la lunghezza delle coppie.



Risposte

Es. 3 1/2 8 - 9

1. _____

2. _____

3. _____

4. _____

5. _____

6. _____

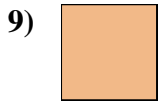
7. _____

8. _____

9. _____



confronta la lunghezza delle coppie.



Risposte

Es. 3 1/2 8 - 9

1. 1 2 - 3

2. 1 1/2 3 - 4

3. 5 1/2 13 - 14

4. 5 12 - 13

5. 2 5 - 6

6. 3 7 - 8

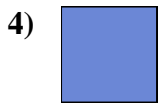
7. 4 1/2 11 - 12

8. 2 1/2 6 - 7

9. 0 1/2 1 - 2



confronta la lunghezza delle coppie.



Risposte

Es. 4 10 - 11

1. _____

2. _____

3. _____

4. _____

5. _____

6. _____

7. _____

8. _____

9. _____



confronta la lunghezza delle coppie.



Risposte

Es. 4 10 - 11

1. 2 5 - 6

2. 3 7 - 8

3. 3 1/2 8 - 9

4. 0 1/2 1 - 2

5. 1 1/2 3 - 4

6. 2 1/2 6 - 7



7. 5 12 - 13

8. 4 1/2 11 - 12

9. 5 1/2 13 - 14



confronta la lunghezza delle coppie.



Risposte

Es. 1 2-3

1. _____

2. _____

3. _____

4. _____

5. _____

6. _____


7. _____

8. _____

9. _____



confronta la lunghezza delle coppie.



Risposte

Es.	<u>1</u>	<u>2 - 3</u>
1.	<u>3 1/2</u>	<u>8 - 9</u>
2.	<u>5 1/2</u>	<u>13 - 14</u>
3.	<u>5</u>	<u>12 - 13</u>
4.	<u>4 1/2</u>	<u>11 - 12</u>
5.	<u>1 1/2</u>	<u>3 - 4</u>
6.	<u>4</u>	<u>10 - 11</u>
7.	<u>2</u>	<u>5 - 6</u>
8.	<u>3</u>	<u>7 - 8</u>
9.	<u>0 1/2</u>	<u>1 - 2</u>