




Usa le unità fornite per misurare la lunghezza delle barre.



Risposte

1. _____

2. _____

3. _____

4. _____

5. _____

6. _____

7. _____



8. _____

9. _____

10. _____



Usa le unità fornite per misurare la lunghezza delle barre.



Risposte

1. 10

2. 1

3. 9

4. 2

5. 4

6. 3

7. 12

8. 7

9. 11

10. 6