




Usa le unità fornite per misurare la lunghezza delle barre.



**Risposte**

1. \_\_\_\_\_

2. \_\_\_\_\_

3. \_\_\_\_\_

4. \_\_\_\_\_

5. \_\_\_\_\_

6. \_\_\_\_\_

7. \_\_\_\_\_


8. \_\_\_\_\_

9. \_\_\_\_\_

10. \_\_\_\_\_



Usa le unità fornite per misurare la lunghezza delle barre.



**Risposte**

1. 2

2. 1

3. 15

4. 4

5. 12

6. 9


7. 8

8. 6

9. 11




10. 14

Cut out and use the units shown to measure the bars on the previous page.





Usa le unità fornite per misurare la lunghezza delle barre.





**Risposte**

- 1. \_\_\_\_\_
- 2. \_\_\_\_\_
- 3. \_\_\_\_\_
- 4. \_\_\_\_\_
- 5. \_\_\_\_\_
- 6. \_\_\_\_\_
- 7. \_\_\_\_\_
- 8. \_\_\_\_\_
- 9. \_\_\_\_\_
- 10. \_\_\_\_\_



Usa le unità fornite per misurare la lunghezza delle barre.



**Risposte**

1. 10

2. 1

3. 9

4. 2

5. 4

6. 3


7. 12

8. 7

9. 11

10. 6

Cut out and use the units shown to measure the bars on the previous page.





Usa le unità fornite per misurare la lunghezza delle barre.



**Risposte**

1. \_\_\_\_\_

2. \_\_\_\_\_

3. \_\_\_\_\_

4. \_\_\_\_\_

5. \_\_\_\_\_

6. \_\_\_\_\_

7. \_\_\_\_\_


8. \_\_\_\_\_

9. \_\_\_\_\_

10. \_\_\_\_\_



Usa le unità fornite per misurare la lunghezza delle barre.



**Risposte**

1. 9

2. 13

3. 2

4. 4

5. 1

6. 8

7. 3


8. 5

9. 14

10. 12



Cut out and use the units shown to measure the bars on the previous page.





Usa le unità fornite per misurare la lunghezza delle barre.



**Risposte**

1. \_\_\_\_\_

2. \_\_\_\_\_

3. \_\_\_\_\_

4. \_\_\_\_\_

5. \_\_\_\_\_

6. \_\_\_\_\_

7. \_\_\_\_\_


8. \_\_\_\_\_

9. \_\_\_\_\_

10. \_\_\_\_\_



Usa le unità fornite per misurare la lunghezza delle barre.



**Risposte**

1. 8

2. 2

3. 3

4. 10

5. 7

6. 9


7. 4

8. 5

9. 1


10. 6

Cut out and use the units shown to measure the bars on the previous page.





Usa le unità fornite per misurare la lunghezza delle barre.



**Risposte**

1. \_\_\_\_\_

2. \_\_\_\_\_

3. \_\_\_\_\_

4. \_\_\_\_\_

5. \_\_\_\_\_

6. \_\_\_\_\_

7. \_\_\_\_\_


8. \_\_\_\_\_

9. \_\_\_\_\_

10. \_\_\_\_\_



Usa le unità fornite per misurare la lunghezza delle barre.



**Risposte**

1. 10

2. 1

3. 4

4. 3

5. 6

6. 8


7. 9

8. 11

9. 5


10. 13

Cut out and use the units shown to measure the bars on the previous page.





Usa le unità fornite per misurare la lunghezza delle barre.



**Risposte**

1. \_\_\_\_\_

2. \_\_\_\_\_

3. \_\_\_\_\_

4. \_\_\_\_\_

5. \_\_\_\_\_

6. \_\_\_\_\_

7. \_\_\_\_\_

8. \_\_\_\_\_

9. \_\_\_\_\_

10. \_\_\_\_\_





Usa le unità fornite per misurare la lunghezza delle barre.



**Risposte**

1. 1

2. 7

3. 11

4. 8

5. 2

6. 14


7. 12

8. 6

9. 10


10. 5

Cut out and use the units shown to measure the bars on the previous page.





Usa le unità fornite per misurare la lunghezza delle barre.



**Risposte**

1. \_\_\_\_\_

2. \_\_\_\_\_

3. \_\_\_\_\_

4. \_\_\_\_\_

5. \_\_\_\_\_

6. \_\_\_\_\_

7. \_\_\_\_\_

8. \_\_\_\_\_

9. \_\_\_\_\_

10. \_\_\_\_\_



Usa le unità fornite per misurare la lunghezza delle barre.



**Risposte**

1. 5

2. 10

3. 13

4. 1

5. 11

6. 15


7. 8

8. 14

9. 6


10. 9

Cut out and use the units shown to measure the bars on the previous page.





Usa le unità fornite per misurare la lunghezza delle barre.



**Risposte**

1. \_\_\_\_\_

2. \_\_\_\_\_

3. \_\_\_\_\_

4. \_\_\_\_\_

5. \_\_\_\_\_

6. \_\_\_\_\_

7. \_\_\_\_\_


8. \_\_\_\_\_

9. \_\_\_\_\_

10. \_\_\_\_\_



Usa le unità fornite per misurare la lunghezza delle barre.



**Risposte**

1. 5

2. 6

3. 4

4. 3

5. 10

6. 2


7. 1

8. 8

9. 7

10. 9

Cut out and use the units shown to measure the bars on the previous page.







Usa le unità fornite per misurare la lunghezza delle barre.



**Risposte**

1. \_\_\_\_\_

2. \_\_\_\_\_

3. \_\_\_\_\_

4. \_\_\_\_\_

5. \_\_\_\_\_

6. \_\_\_\_\_

7. \_\_\_\_\_

8. \_\_\_\_\_

9. \_\_\_\_\_

10. \_\_\_\_\_



Usa le unità fornite per misurare la lunghezza delle barre.



**Risposte**

1. 7

2. 3

3. 9

4. 1

5. 8

6. 10

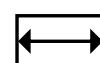
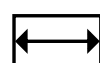
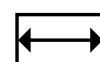
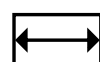
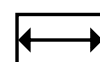
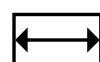
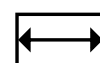
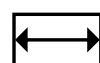
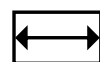
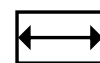
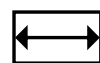
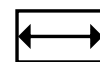
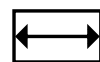
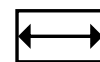
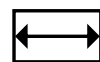
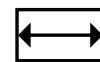
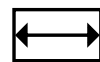
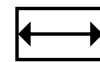
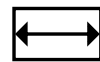
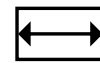
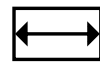
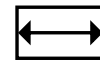
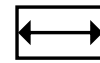
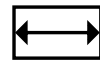
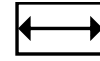
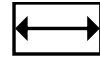
7. 4

8. 2

9. 11

10. 5

Cut out and use the units shown to measure the bars on the previous page.





Usa le unità fornite per misurare la lunghezza delle barre.



**Risposte**

- 1. \_\_\_\_\_
- 2. \_\_\_\_\_
- 3. \_\_\_\_\_
- 4. \_\_\_\_\_
- 5. \_\_\_\_\_
- 6. \_\_\_\_\_
- 7. \_\_\_\_\_
- 8. \_\_\_\_\_
- 9. \_\_\_\_\_
- 10. \_\_\_\_\_



Usa le unità fornite per misurare la lunghezza delle barre.



**Risposte**

1. 10

2. 1

3. 8

4. 7

5. 4

6. 3

7. 2

8. 9

9. 11

10. 6

Cut out and use the units shown to measure the bars on the previous page.

