




Determina la quantità di denaro indicata.

Risposte



1. _____



2. _____



3. _____



4. _____




5. _____



6. _____



7. _____



8. _____





9. _____



10. _____



Determina la quantità di denaro indicata.



Risposte

1. \$0,95

2. \$0,80

3. \$0,96

4. \$0,90

5. \$0,69

6. \$0,95

7. \$0,98

8. \$0,78

9. \$0,98

10. \$0,96