



Determina la quantità di denaro indicata.

Risposte



1. _____



2. _____



3. _____

4. _____



5. _____

6. _____



7. _____

8. _____




9. _____


10. _____








Determina la quantità di denaro indicata.


1) 


2) 


3) 


4) 


5) 

6) 

7) 

8) 

9) 

10) 

Risposte

1. \$0,96
2. \$0,91
3. \$0,71
4. \$0,88
5. \$0,95
6. \$0,85
7. \$0,88
8. \$0,90
9. \$0,97
10. \$0,99