




Determina la quantità di denaro indicata.

**Risposte**



1. \_\_\_\_\_



2. \_\_\_\_\_



3. \_\_\_\_\_



4. \_\_\_\_\_



5. \_\_\_\_\_



6. \_\_\_\_\_



7. \_\_\_\_\_



8. \_\_\_\_\_




9. \_\_\_\_\_



10. \_\_\_\_\_



Determina la quantità di denaro indicata.



**Risposte**

1. \$0,95

2. \$0,80

3. \$0,96

4. \$0,90

5. \$0,69

6. \$0,95

7. \$0,98

8. \$0,78

9. \$0,98

10. \$0,96



Determina la quantità di denaro indicata.

**Risposte**



1. \_\_\_\_\_



2. \_\_\_\_\_



3. \_\_\_\_\_




4. \_\_\_\_\_



5. \_\_\_\_\_



6. \_\_\_\_\_



7. \_\_\_\_\_



8. \_\_\_\_\_





9. \_\_\_\_\_



10. \_\_\_\_\_



Determina la quantità di denaro indicata.



**Risposte**

1. \$0,52

2. \$0,95

3. \$0,99

4. \$0,70

5. \$0,69

6. \$0,95

7. \$0,95

8. \$0,97

9. \$0,59

10. \$0,66



Determina la quantità di denaro indicata.


**Risposte**



1. \_\_\_\_\_



2. \_\_\_\_\_



3. \_\_\_\_\_



4. \_\_\_\_\_



5. \_\_\_\_\_



6. \_\_\_\_\_



7. \_\_\_\_\_



8. \_\_\_\_\_




9. \_\_\_\_\_



10. \_\_\_\_\_



Determina la quantità di denaro indicata.



**Risposte**

1. \$0,43

2. \$0,85

3. \$0,71

4. \$0,69

5. \$0,96

6. \$0,96

7. \$0,81

8. \$0,93

9. \$0,96

10. \$0,99



Determina la quantità di denaro indicata.

**Risposte**



1. \_\_\_\_\_



2. \_\_\_\_\_



3. \_\_\_\_\_



4. \_\_\_\_\_



5. \_\_\_\_\_



6. \_\_\_\_\_



7. \_\_\_\_\_



8. \_\_\_\_\_



9. \_\_\_\_\_



10. \_\_\_\_\_



Determina la quantità di denaro indicata.



**Risposte**

1. \$0,95

2. \$0,71

3. \$0,63

4. \$0,50

5. \$0,97

6. \$0,90

7. \$0,97

8. \$0,85

9. \$0,97

10. \$0,96





Determina la quantità di denaro indicata.

**Risposte**



1. \_\_\_\_\_




2. \_\_\_\_\_



3. \_\_\_\_\_



4. \_\_\_\_\_



5. \_\_\_\_\_



6. \_\_\_\_\_



7. \_\_\_\_\_



8. \_\_\_\_\_



9. \_\_\_\_\_



10. \_\_\_\_\_



Determina la quantità di denaro indicata.



**Risposte**

1. \$0,96

2. \$0,95

3. \$0,88

4. \$0,97

5. \$0,99

6. \$0,76

7. \$0,91

8. \$0,99


9. \$0,97

10. \$0,85



Determina la quantità di denaro indicata.

**Risposte**




1. \_\_\_\_\_



2. \_\_\_\_\_



3. \_\_\_\_\_



4. \_\_\_\_\_




5. \_\_\_\_\_



6. \_\_\_\_\_



7. \_\_\_\_\_



8. \_\_\_\_\_






9. \_\_\_\_\_



10. \_\_\_\_\_



Determina la quantità di denaro indicata.



**Risposte**

1. \$0,81

2. \$0,95

3. \$0,98

4. \$0,99

5. \$0,96

6. \$0,92

7. \$0,98

8. \$0,99

9. \$0,98

10. \$0,68



Determina la quantità di denaro indicata.

**Risposte**




1. \_\_\_\_\_




2. \_\_\_\_\_



3. \_\_\_\_\_



4. \_\_\_\_\_



5. \_\_\_\_\_




6. \_\_\_\_\_



7. \_\_\_\_\_



8. \_\_\_\_\_






9. \_\_\_\_\_



10. \_\_\_\_\_



Determina la quantità di denaro indicata.



**Risposte**

1. \$0,96

2. \$0,96

3. \$0,97

4. \$0,95

5. \$0,95

6. \$0,99

7. \$0,99

8. \$0,98

9. \$0,97

10. \$0,97



Determina la quantità di denaro indicata.

**Risposte**



1. \_\_\_\_\_



2. \_\_\_\_\_



3. \_\_\_\_\_

4. \_\_\_\_\_



5. \_\_\_\_\_

6. \_\_\_\_\_



7. \_\_\_\_\_

8. \_\_\_\_\_




9. \_\_\_\_\_


10. \_\_\_\_\_








Determina la quantità di denaro indicata.


1) 


2) 


3) 


4) 


5) 

6) 

7) 

8) 

9) 

10) 

**Risposte**

1. \$0,96
2. \$0,91
3. \$0,71
4. \$0,88
5. \$0,95
6. \$0,85
7. \$0,88
8. \$0,90
9. \$0,97
10. \$0,99





Determina la quantità di denaro indicata.

**Risposte**




1. \_\_\_\_\_



2. \_\_\_\_\_



3. \_\_\_\_\_



4. \_\_\_\_\_



5. \_\_\_\_\_



6. \_\_\_\_\_



7. \_\_\_\_\_



8. \_\_\_\_\_



9. \_\_\_\_\_



10. \_\_\_\_\_



Determina la quantità di denaro indicata.



**Risposte**

1. \$0,95

2. \$0,91

3. \$0,81

4. \$0,96

5. \$0,93

6. \$0,53

7. \$0,79

8. \$0,96


9. \$0,98

10. \$0,54



Determina la quantità di denaro indicata.

**Risposte**



1. \_\_\_\_\_



2. \_\_\_\_\_



3. \_\_\_\_\_

4. \_\_\_\_\_



5. \_\_\_\_\_

6. \_\_\_\_\_



7. \_\_\_\_\_

8. \_\_\_\_\_



9. \_\_\_\_\_

10. \_\_\_\_\_





Determina la quantità di denaro indicata.



**Risposte**

1. \$0,90

2. \$0,73

3. \$0,99

4. \$0,68

5. \$0,98

6. \$0,96

7. \$0,98

8. \$0,89

9. \$0,88

10. \$0,95