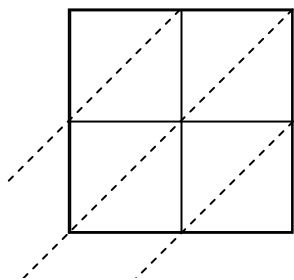


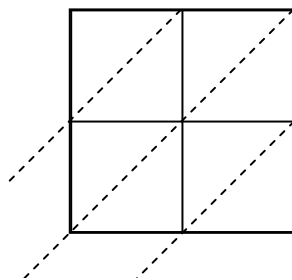


Usa la moltiplicazione del reticolo per risolvere ogni problema.

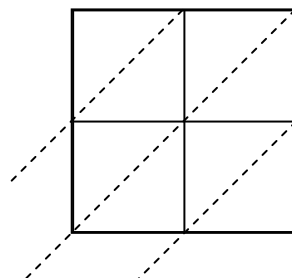
1) $71 \times 47 =$



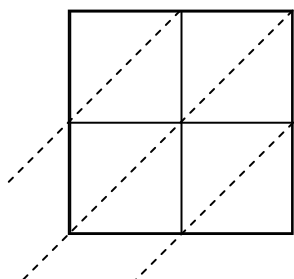
2) $48 \times 31 =$



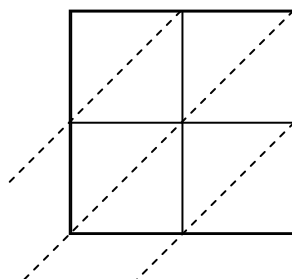
3) $76 \times 52 =$



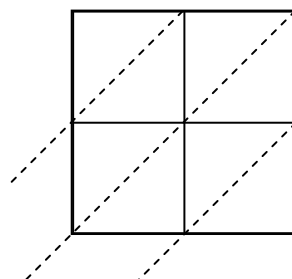
4) $36 \times 82 =$



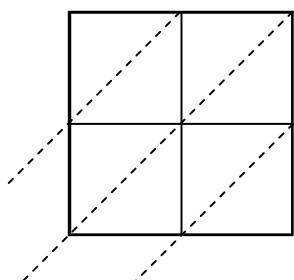
5) $40 \times 86 =$



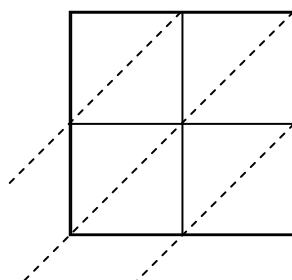
6) $62 \times 58 =$



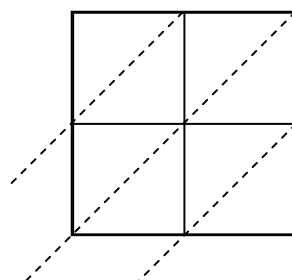
7) $88 \times 37 =$



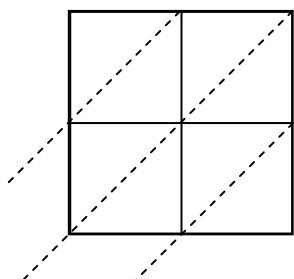
8) $85 \times 68 =$



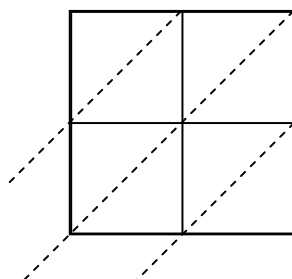
9) $91 \times 39 =$



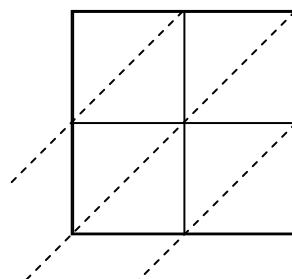
10) $44 \times 13 =$



11) $83 \times 57 =$



12) $34 \times 75 =$



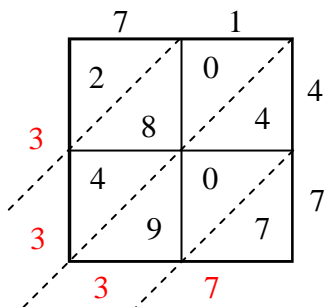
Risposte

- 1. _____
- 2. _____
- 3. _____
- 4. _____
- 5. _____
- 6. _____
- 7. _____
- 8. _____
- 9. _____
- 10. _____
- 11. _____
- 12. _____

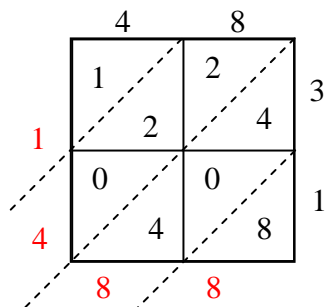


Usa la moltiplicazione del reticolo per risolvere ogni problema.

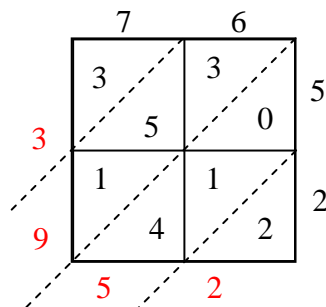
1) $71 \times 47 =$



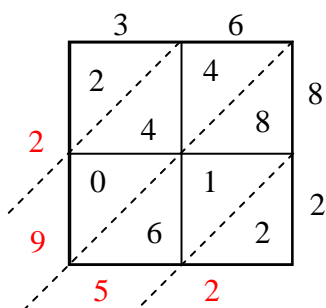
2) $48 \times 31 =$



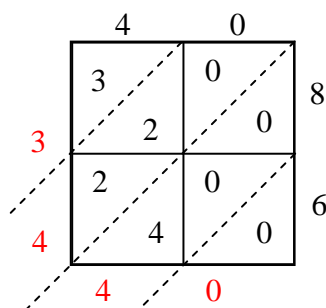
3) $76 \times 52 =$



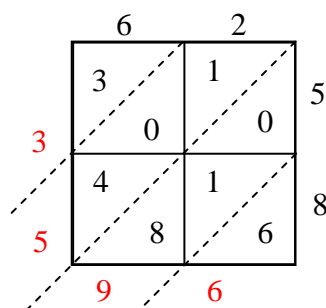
4) $36 \times 82 =$



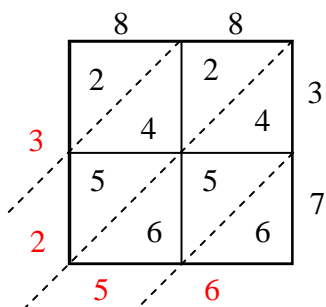
5) $40 \times 86 =$



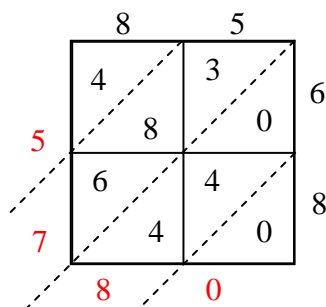
6) $62 \times 58 =$



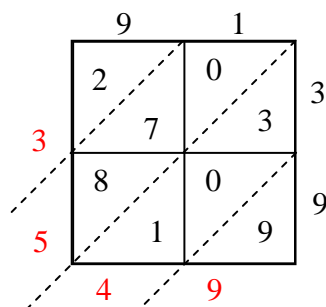
7) $88 \times 37 =$



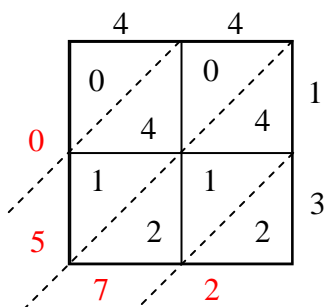
8) $85 \times 68 =$



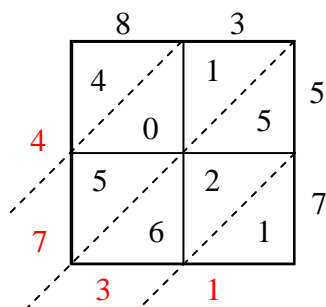
9) $91 \times 39 =$



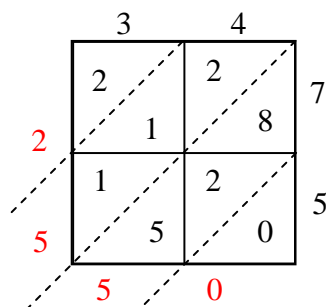
10) $44 \times 13 =$



11) $83 \times 57 =$



12) $34 \times 75 =$

**Risposte**1. **3.337**2. **1.488**3. **3.952**4. **2.952**5. **3.440**6. **3.596**7. **3.256**8. **5.780**9. **3.549**10. **572**11. **4.731**12. **2.550**