



Usa la moltiplicazione del reticolo per risolvere ogni problema.

1) $27 \times 78 =$



2) $39 \times 51 =$



3) $54 \times 95 =$



4) $79 \times 28 =$



5) $56 \times 14 =$



6) $23 \times 46 =$



7) $49 \times 10 =$



8) $49 \times 15 =$



9) $22 \times 85 =$



10) $62 \times 17 =$



11) $92 \times 41 =$



12) $85 \times 63 =$



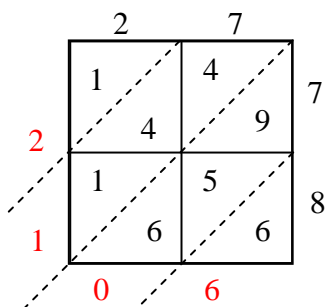
Risposte

- 1. _____
- 2. _____
- 3. _____
- 4. _____
- 5. _____
- 6. _____
- 7. _____
- 8. _____
- 9. _____
- 10. _____
- 11. _____
- 12. _____

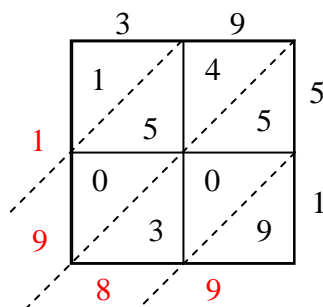


Usa la moltiplicazione del reticolo per risolvere ogni problema.

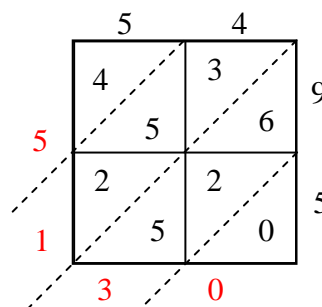
1) $27 \times 78 =$



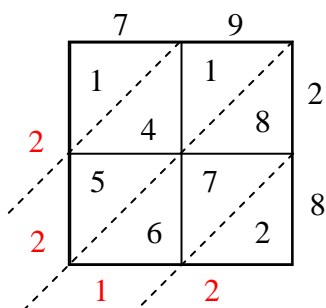
2) $39 \times 51 =$



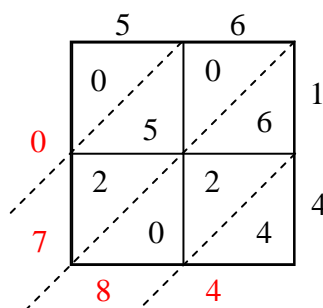
3) $54 \times 95 =$



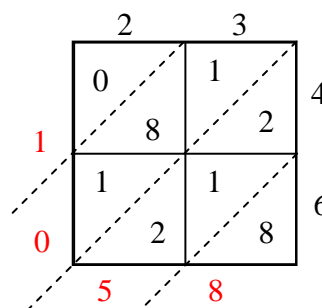
4) $79 \times 28 =$



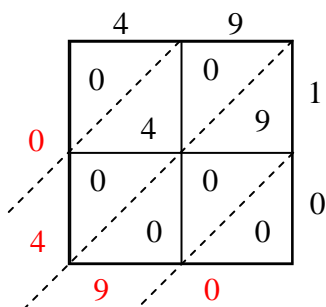
5) $56 \times 14 =$



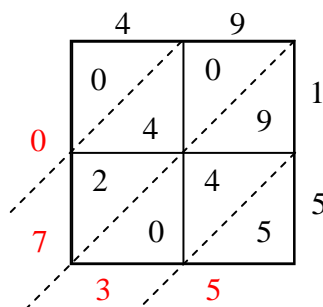
6) $23 \times 46 =$



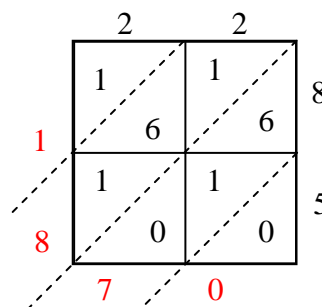
7) $49 \times 10 =$



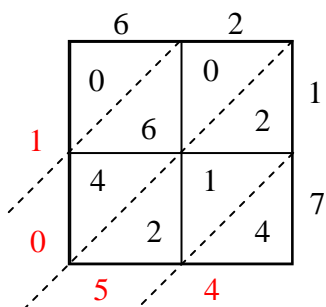
8) $49 \times 15 =$



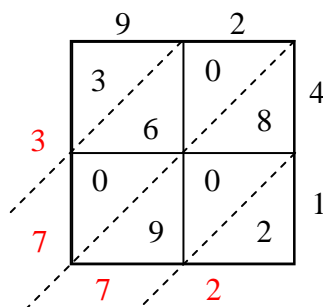
9) $22 \times 85 =$



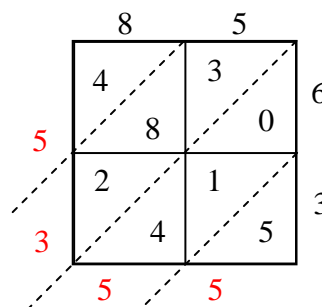
10) $62 \times 17 =$



11) $92 \times 41 =$



12) $85 \times 63 =$

**Risposte**1. **2.106**2. **1.989**3. **5.130**4. **2.212**5. **784**6. **1.058**7. **490**8. **735**9. **1.870**10. **1.054**11. **3.772**12. **5.355**