



Usa la moltiplicazione del reticolo per risolvere ogni problema.

1) $189 \times 31 =$



2) $633 \times 58 =$



3) $856 \times 16 =$



4) $254 \times 35 =$



5) $186 \times 28 =$



6) $390 \times 84 =$



7) $325 \times 37 =$



8) $493 \times 91 =$



9) $348 \times 20 =$



10) $894 \times 10 =$



11) $961 \times 10 =$



12) $317 \times 15 =$



Risposte

1. _____

2. _____

3. _____

4. _____

5. _____

6. _____

7. _____

8. _____

9. _____

10. _____

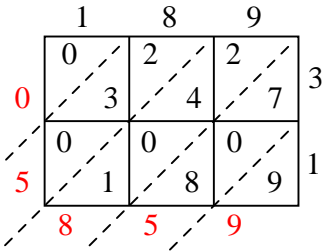
11. _____

12. _____

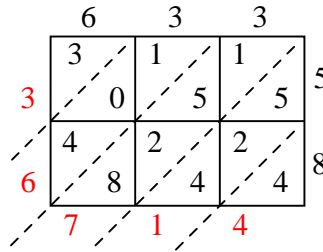


Usa la moltiplicazione del reticolo per risolvere ogni problema.

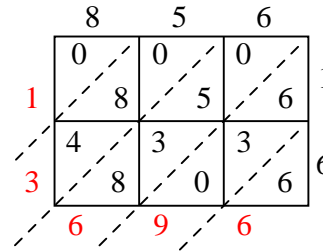
1) $189 \times 31 =$



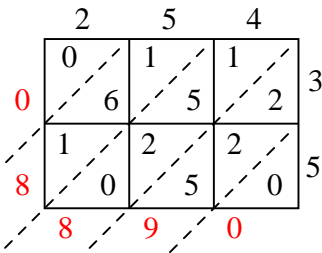
2) $633 \times 58 =$



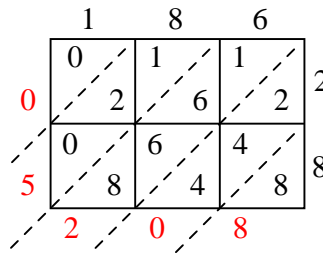
3) $856 \times 16 =$



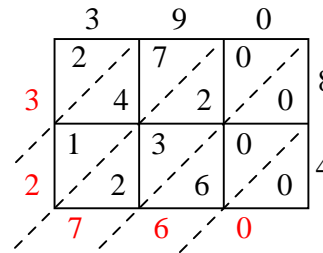
4) $254 \times 35 =$



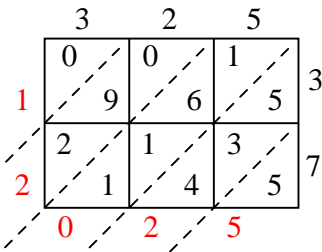
5) $186 \times 28 =$



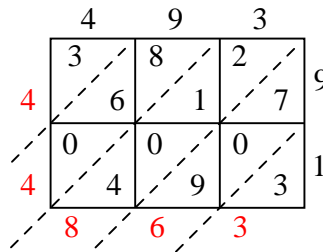
6) $390 \times 84 =$



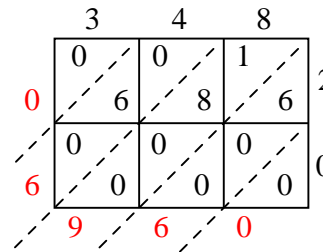
7) $325 \times 37 =$



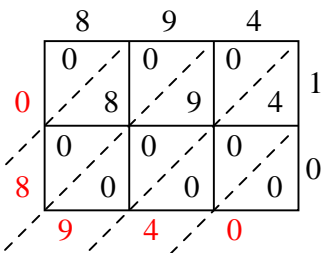
8) $493 \times 91 =$



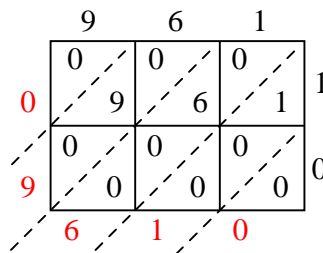
9) $348 \times 20 =$



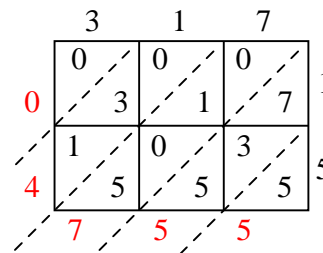
10) $894 \times 10 =$



11) $961 \times 10 =$



12) $317 \times 15 =$

**Risposte**1. **5.859**2. **36.714**3. **13.696**4. **8.890**5. **5.208**6. **32.760**7. **12.025**8. **44.863**9. **6.960**10. **8.940**11. **9.610**12. **4.755**