

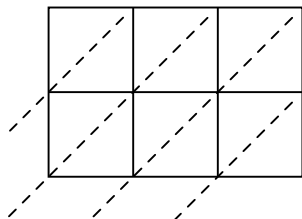


Usa la moltiplicazione del reticolo per risolvere ogni problema.

1) $341 \times 47 =$



2) $768 \times 31 =$



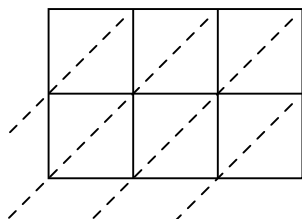
3) $166 \times 52 =$



4) $126 \times 82 =$



5) $130 \times 86 =$



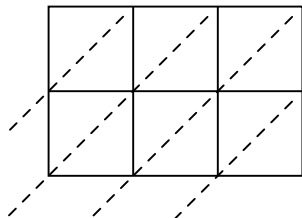
6) $692 \times 58 =$



7) $268 \times 37 =$



8) $535 \times 68 =$



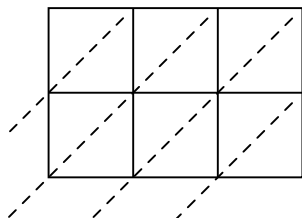
9) $631 \times 39 =$



10) $404 \times 13 =$



11) $173 \times 57 =$



12) $394 \times 75 =$

**Risposte**

1. _____

2. _____

3. _____

4. _____

5. _____

6. _____

7. _____

8. _____

9. _____

10. _____

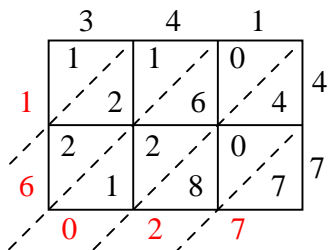
11. _____

12. _____

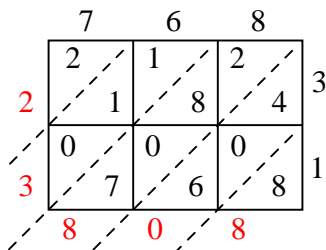


Usa la moltiplicazione del reticolo per risolvere ogni problema.

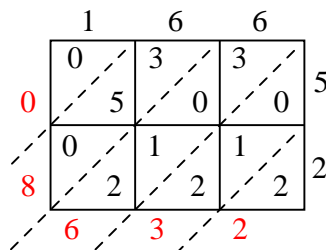
1) $341 \times 47 =$



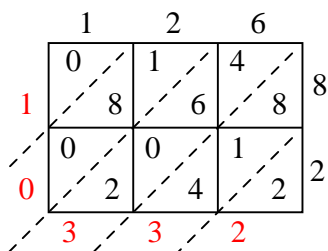
2) $768 \times 31 =$



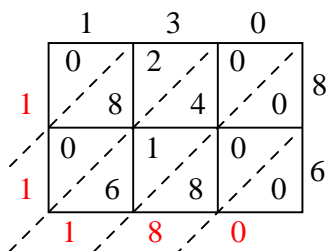
3) $166 \times 52 =$



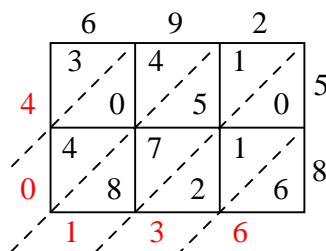
4) $126 \times 82 =$



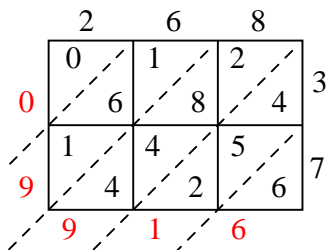
5) $130 \times 86 =$



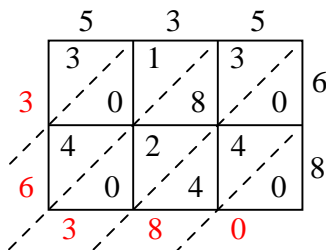
6) $692 \times 58 =$



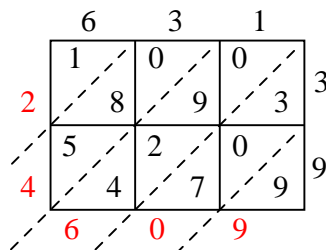
7) $268 \times 37 =$



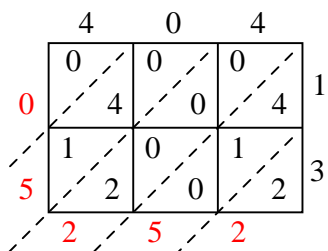
8) $535 \times 68 =$



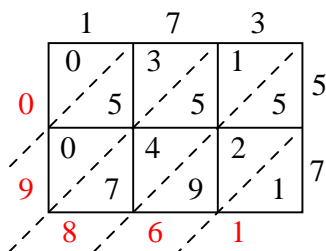
9) $631 \times 39 =$



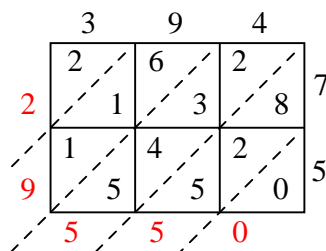
10) $404 \times 13 =$



11) $173 \times 57 =$



12) $394 \times 75 =$

**Risposte**1. **16.027**2. **23.808**3. **8.632**4. **10.332**5. **11.180**6. **40.136**7. **9.916**8. **36.380**9. **24.609**10. **5.252**11. **9.861**12. **29.550**