



Usa la moltiplicazione del reticolo per risolvere ogni problema.

1) $636 \times 32 =$



2) $339 \times 54 =$



3) $637 \times 28 =$



4) $525 \times 91 =$



5) $768 \times 79 =$



6) $686 \times 73 =$



7) $675 \times 69 =$



8) $714 \times 45 =$



9) $389 \times 41 =$



10) $135 \times 24 =$



11) $363 \times 59 =$



12) $417 \times 39 =$



Risposte

1. _____

2. _____

3. _____

4. _____

5. _____

6. _____

7. _____

8. _____

9. _____

10. _____

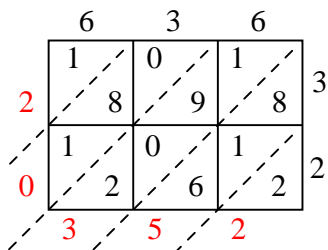
11. _____

12. _____

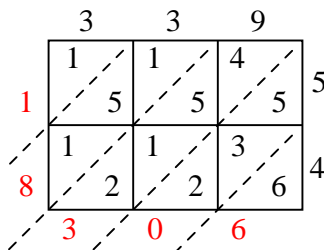


Usa la moltiplicazione del reticolo per risolvere ogni problema.

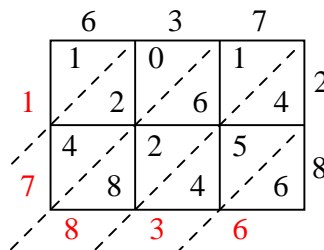
1) $636 \times 32 =$



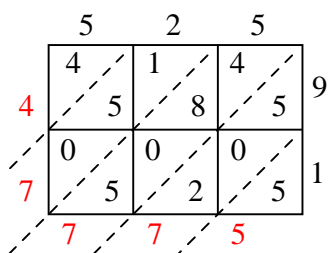
2) $339 \times 54 =$



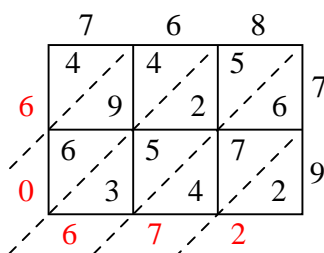
3) $637 \times 28 =$



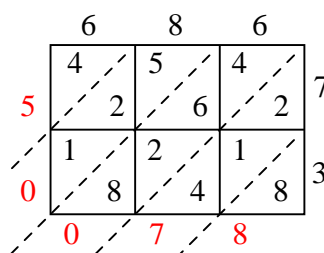
4) $525 \times 91 =$



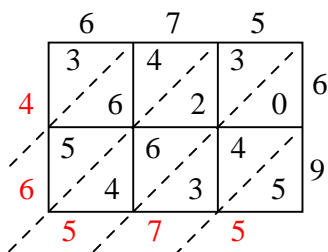
5) $768 \times 79 =$



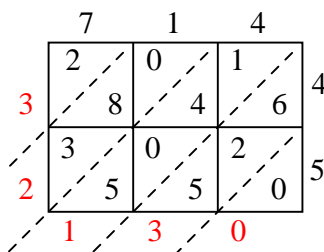
6) $686 \times 73 =$



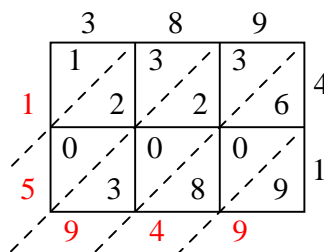
7) $675 \times 69 =$



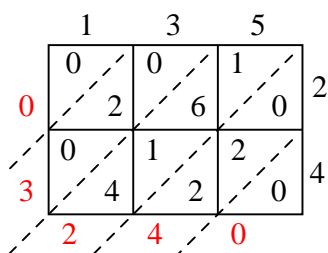
8) $714 \times 45 =$



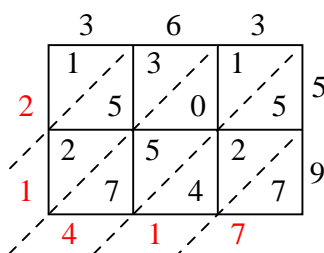
9) $389 \times 41 =$



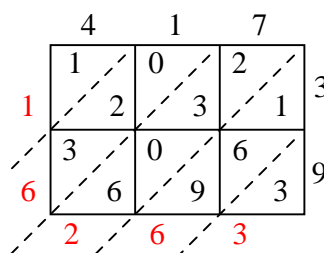
10) $135 \times 24 =$



11) $363 \times 59 =$



12) $417 \times 39 =$

**Risposte**1. **20.352**2. **18.306**3. **17.836**4. **47.775**5. **60.672**6. **50.078**7. **46.575**8. **32.130**9. **15.949**10. **3.240**11. **21.417**12. **16.263**